



# RAILWAY RECRUITMENT BOARDS

## रेलवे भर्ती बोर्ड

### RRB NTPC Graduate 18th Jan 2017 Shift 3

Roll No:	
Participants Name:	
Test Center Name:	
Test Date:	18/01/2017
Test Time:	4:00 PM - 5:30 PM
Subject:	RRB NTPC Graduate

- Options shown in green color with a tick icon are correct
- Chosen option on top right of the question indicates the option selected by the candidate

Q.1 Lifeline Express (LLE), the World's first 'Hospital on Train', went on its maiden journey on

- Ans
- 1. July 16, 2000
  - 2. July 16, 1992
  - 3. July 16, 1993
  - 4. July 16, 1991

Question ID : 584189284

Status : Not Attempted

Chosen Option : --

Q.2 Priya invested a certain amount of money and got back an amount of Rs. 8800 after 3 years. If the rate of simple interest is 40 %, what is the principal amount invested by Priya?

- Ans
- 1. Rs. 7000
  - 2. Rs. 4000
  - 3. Rs. 4333
  - 4. Rs. 7333

Question ID : 584189311

Status : Answered

Chosen Option : 4

Q.3 A piece of wire, bent in the shape of a square having 44 cm as its side, is subsequently bent to form a circle. What will be the radius of the circle?

- Ans
- 1. 14 cm
  - 2. 56 cm
  - 3. 28 cm
  - 4. 108 cm

Question ID : 584189300

Status : Answered

Chosen Option : 3

Q.4 Which of the following is used by a computer to translate the procedure oriented language program into machine language program?

- Ans
- 1. Scanner
  - 2. Plotter
  - 3. Compiler
  - 4. VDU (Video Display Unit)

Question ID : 584189280

Status : Answered

Chosen Option : 3

Q.5 Based on the relationship between the first two words, find out the missing word.

TERRESTRIALS : ANTS :: AMPHIBIANS : \_\_\_\_\_

- Ans
- 1. FISH
  - 2. SNAILS
  - 3. FROGS
  - 4. DOGS

Question ID : 584189367

Status : Answered

Chosen Option : 3

Q.6 Which of the following is one of the largest and the most versatile space telescopes that was launched into low Earth orbit in 1990?

Question ID : 584189268

- Ans  1. Spitzer  
 2. James Webb  
 3. Chandra  
 4. Hubble

Status : Answered  
Chosen Option : 4

Q.7 Pankaj buys 10 lemons for Rs. 80. At what price should he sell a dozen lemons, if he wishes to make a profit of 25%?

- Ans  1. Rs. 10  
 2. Rs. 100  
 3. Rs. 120  
 4. Rs. 240

Question ID : 584189323  
Status : Answered  
Chosen Option : 3

Q.8 Rs. 200 was distributed among three persons – Anil, Binay and Chinmay. Binay received 50% more than Chinmay. Anil received Rs.10 more than 150% of what Binay received. How much money did Anil receive?

- Ans  1. Rs. 100  
 2. Rs. 60  
 3. Rs. 40  
 4. Rs. 43

Question ID : 584189319  
Status : Answered  
Chosen Option : 1

Q.9 Which of the following uses only convex lens?

- Ans  1. Microscope  
 2. Flashlights  
 3. Peepholes  
 4. Car Headlights

Question ID : 584189282  
Status : Answered  
Chosen Option : 4

Q.10 An alphabet series is given below with one term missing, shown by a "?". Choose from the options the correct alternative that will fit the pattern of the series.  
ADM, BFL, CHK, ?, ELI, FNH

- Ans  1. DHJ  
 2. DJJ  
 3. DHL  
 4. DJK

Question ID : 584189339  
Status : Answered  
Chosen Option : 2

Q.11 Which of the following is an annual nationwide campaign in Singapore encouraging awareness and action for the environment?

- Ans  1. Eco Action Day  
 2. My Planet Day  
 3. Earth Day  
 4. Cycling Day

Question ID : 584189291  
Status : Answered  
Chosen Option : 4

Q.12 In 2015, which ex-President of Romania was prosecuted for crime against humanity?

- Ans  1. John Ashe  
 2. Richard Heck  
 3. Khaled Bahah  
 4. Ion Iliescu

Question ID : 584189265  
Status : Not Attempted  
Chosen Option : --

Q.13 Which of the following States came into existence in 2014?

- Ans  1. Uttarakhand  
 2. Jharkhand  
 3. Telangana  
 4. Chhattisgarh

Question ID : 584189258  
Status : Answered  
Chosen Option : 3

A trader buys a Persian rug for Rs. 1235 and sells it for Rs. 1500. Find his gain percentage.

- Q.14  
Ans
- 1. 17.67 %
  - 2. 20.1 %
  - 3. 22.5 %
  - 4. 21.46 %

Question ID : 584189313  
Status : Answered  
Chosen Option : 4

- Q.15 A number series is given below with one number missing, shown by a “?”. Choose from the options the correct alternative that will fit the pattern of the series.  
4, 9, 19, ?, 79, 159

Question ID : 584189358  
Status : Answered  
Chosen Option : 3

- Ans
- 1. 33
  - 2. 59
  - 3. 39
  - 4. 34

Comprehension:

Read the information given below and answer the questions that follow:

Following table gives the data on the number of students who appeared, qualified and were selected from various states in a national level exam.

Students who			
State	Appeared	Qualified	Were Selected
Maharashtra	8500	950	80
Uttar Pradesh	5600	620	85
Kerala	7500	720	78
Delhi	4800	400	48
Arunachal Pradesh	7000	650	70

SubQuestion No : 16

- Q.1  
6 Which State has the highest ratio of number of students selected to the number of students who qualified from that State?

Question ID : 584189360  
Status : Answered  
Chosen Option : 1

- Ans
- 1. Maharashtra
  - 2. Uttar Pradesh
  - 3. Kerala
  - 4. Delhi

Comprehension:

Read the information given below and answer the questions that follow:

Following table gives the data on the number of students who appeared, qualified and were selected from various states in a national level exam.

Students who			
State	Appeared	Qualified	Were Selected
Maharashtra	8500	950	80
Uttar Pradesh	5600	620	85
Kerala	7500	720	78
Delhi	4800	400	48
Arunachal Pradesh	7000	650	70

SubQuestion No : 17

- Q.1  
7 Which State has the lowest percentage of qualifications over those who had appeared?

Question ID : 584189361  
Status : Answered

Ans

- 1. Kerala
- 2. Maharashtra
- 3. Uttar Pradesh
- 4. Delhi

Chosen Option : 4

Comprehension:

**Read the information given below and answer the questions that follow:**

Following table gives the data on the number of students who appeared, qualified and were selected from various states in a national level exam.

Students who			
State	Appeared	Qualified	Were Selected
Maharashtra	8500	950	80
Uttar Pradesh	5600	620	85
Kerala	7500	720	78
Delhi	4800	400	48
Arunachal Pradesh	7000	650	70

SubQuestion No : 18

Q.1 What percentage of students who appeared in the exam were selected?  
8

- Ans
- 1. 0.90 %
  - 2. 2.11 %
  - 3. 1.08 %
  - 4. 2 %

Question ID : 584189362

Status : Answered

Chosen Option : 3

Comprehension:

**Read the information given below and answer the questions that follow:**

Following table gives the data on the number of students who appeared, qualified and were selected from various states in a national level exam.

Students who			
State	Appeared	Qualified	Were Selected
Maharashtra	8500	950	80
Uttar Pradesh	5600	620	85
Kerala	7500	720	78
Delhi	4800	400	48
Arunachal Pradesh	7000	650	70

SubQuestion No : 19

Q.1 Which State has the highest ratio of number of students selected to the number of students who appeared from that State?  
9

- Ans
- 1. Uttar Pradesh
  - 2. Maharashtra
  - 3. Kerala
  - 4. Delhi

Question ID : 584189363

Status : Answered

Chosen Option : 1

Q.20

Question ID : 584189353

Status : Answered

Chosen Option : 2

In the question given below, are given two statements followed by a few conclusions. You have to take the two given statements to be true even if they seem to be at variance with commonly known facts. Read all the conclusions and then decide which of the given conclusions follow the two given statements disregarding commonly known facts.

Statements:

- Ans  1. All arrows are bullets  
 2. Conclusions 1, 2 and 3 follow  
 3. Conclusions 2, 3 and 4 follow  
 4. All conclusions follow

Q.21 A batsman scored 150 runs in a one-day cricket match. He hit 20 fours and 5 sixes. Calculate the percentage of runs he scored by running between the wickets.

- Ans  1. 73.33%  
 2. 31.33%  
 3. 25%  
 4. 26.67%

Question ID : 584189318

Status : Answered

Chosen Option : 4

Q.22 'Integrated Circuits' belonged to which of the following generation of Computers?

- Ans  1. Fourth Generation  
 2. Fifth Generation  
 3. Third Generation  
 4. Second Generation

Question ID : 584189281

Status : Answered

Chosen Option : 1

Q.23 Based on the relationship between the first two words, find out the missing word.  
ODISHA : ODISSI :: KERALA : \_\_\_\_\_

- Ans  1. KUCHIPUDI  
 2. BHARATANATYAM  
 3. KATHAK  
 4. KATHAKALI

Question ID : 584189342

Status : Answered

Chosen Option : 2

Q.24 If 'J' means '×', 'K' means '+', 'Q' means '-' and 'T' means '÷' then what is the value of:  
26 J 74 K 4 T 5 Q 2

- Ans  1. 220  
 2. 488  
 3. 478  
 4. 376

Question ID : 584189336

Status : Answered

Chosen Option : 3

Q.25 Who is the author of the novel 'Anandamath'?

- Ans  1. Subramania Bharathi  
 2. Bhartendu Harish Chandra  
 3. Bankim Chandra Chattopadhyay  
 4. Dinabandhu Mitra

Question ID : 584189288

Status : Answered

Chosen Option : 3

Comprehension:

Read the passage given below and answer the questions that follow:

In a class of 32 students, 20 of them like Spiderman and 14 like Batman. 6 students like neither Spiderman nor Batman.

SubQuestion No : 26

Q.2 How many students like either Spiderman or Batman?  
6

- Ans  1. 6  
 2. 28  
 3. 12

Question ID : 584189357

Status : Answered

Chosen Option : 3



✓ 4. 26

Comprehension:

Read the passage given below and answer the questions that follow:

In a class of 32 students, 20 of them like Spiderman and 14 like Batman. 6 students like neither Spiderman nor Batman.

SubQuestion No : 27

Q.27 How many students like both Spiderman and Batman?

- Ans
- 1. 5
  - 2. 6
  - 3. 7
  - 4. 8

Question ID : 584189356  
Status : Answered  
Chosen Option : 4

Q.28 Who said - 'Give me blood and I will give you freedom'?

- Ans
- 1. Mahatma Gandhi
  - 2. Subhas Chandra Bose
  - 3. Jawaharlal Nehru
  - 4. Chandra Shekhar Azad

Question ID : 584189273  
Status : Answered  
Chosen Option : 2

Q.29 Which of the following Articles of the Constitution of India defines the 'Right to Education'?

- Ans
- 1. Article 5
  - 2. Article 21A
  - 3. Article 23
  - 4. Article 12

Question ID : 584189254  
Status : Answered  
Chosen Option : 2

Q.30 An electric bulb of 60 W is connected to a source of 240 V. The current drawn by the bulb will be:

- Ans
- 1. 2.5 A
  - 2. 4 A
  - 3. 0.4 A
  - 4. 0.25 A

Question ID : 584189256  
Status : Answered  
Chosen Option : 2

Q.31 Four words are given below out of which three are alike in some manner and one is different. Which one is different from the rest?

- Ans
- 1. Chalk
  - 2. Paper
  - 3. Blackboard
  - 4. Slate

Question ID : 584189343  
Status : Answered  
Chosen Option : 1

Q.32 In December 2015, Sadhana Shivdasani passed away. She was a popular \_\_\_\_\_.

- Ans
- 1. Actress
  - 2. Politician
  - 3.
  - 4.

Question ID : 584189248  
Status : Answered  
Chosen Option : 2

Q.33

- Ans
- 1.
  - 2.
  - 3.
  - 4.

Question ID : 584189297  
Status : Answered  
Chosen Option : 3

Q.34

Ans  1.  
 2.  
 3.  
 4.

Question ID : 584189267  
Status : Answered  
Chosen Option : 1

Q.35

Ans  1.  
 2.  
 3.  
 4.

Question ID : 584189346  
Status : Answered  
Chosen Option : 3

Q.36

Ans  1.  
 2.  
 3.  
 4.

Question ID : 584189289  
Status : Answered  
Chosen Option : 2

Q.37

Ans  1.  
 2.  
 3.  
 4.

Question ID : 584189331  
Status : Answered  
Chosen Option : 3

Q.38

Ans  1.  
 2.  
 3.  
 4.

Question ID : 584189327  
Status : Answered  
Chosen Option : 2

Q.39

Ans  1.  
 2.  
 3.  
 4.

Question ID : 584189285  
Status : Answered  
Chosen Option : 3

Q.40

Ans  1.  
 2.  
 3.  
 4.

Question ID : 584189274  
Status : Answered  
Chosen Option : 3

Q.41

Ans  1.  
 2.  
 3.  
 4.

Question ID : 584189301  
Status : Answered  
Chosen Option : 2

Q.42

Ans  1.  
 2.

Question ID : 584189305  
Status : Answered  
Chosen Option : 3



✓ 3.

✗ 4.

Q.43

Ans ✗ 1.

✗ 2.

✗ 3.

✓ 4.

Question ID : 584189366

Status : Answered

Chosen Option : 2

Q.44

Ans ✓ 1.

✗ 2.

✗ 3.

✗ 4.

Question ID : 584189309

Status : Answered

Chosen Option : 1

Q.45

Ans ✗ 1.

✗ 2.

✓ 3.

✗ 4.

Question ID : 584189368

Status : Answered

Chosen Option : 3

Q.46

Ans ✓ 1.

✗ 2.

✗ 3.

✗ 4.

Question ID : 584189303

Status : Answered

Chosen Option : 1

Q.47

Ans ✗ 1.

✓ 2.

✗ 3.

✗ 4.

Question ID : 584189259

Status : Answered

Chosen Option : 3

Q.48

Ans ✗ 1.

✓ 2.

✗ 3.

✗ 4.

Question ID : 584189266

Status : Answered

Chosen Option : 4

Q.49

Ans ✗ 1.

✗ 2.

✓ 3.

✗ 4.

Question ID : 584189294

Status : Answered

Chosen Option : 3

Q.50

Ans ✗ 1.

✓ 2.

✗ 3.

✗ 4.

Question ID : 584189251

Status : Answered

Chosen Option : 2

Q.51

- Ans
- 1.
  - 2.
  - 3.
  - 4.

Question ID : 584189337  
Status : Answered  
Chosen Option : 3

Q.52

- Ans
- 1.
  - 2.
  - 3.
  - 4.

Question ID : 584189283  
Status : Answered  
Chosen Option : 2

Q.53

- Ans
- 1.
  - 2.
  - 3.
  - 4.

Question ID : 584189302  
Status : Answered  
Chosen Option : 2

Q.54

- Ans
- 1.
  - 2.
  - 3.
  - 4.

Question ID : 584189290  
Status : Answered  
Chosen Option : 4

Q.55

- Ans
- 1.
  - 2.
  - 3.
  - 4.

Question ID : 584189324  
Status : Answered  
Chosen Option : 2

Q.56

- Ans
- 1.
  - 2.
  - 3.
  - 4.

Question ID : 584189293  
Status : Answered  
Chosen Option : 4

Q.57

- Ans
- 1.
  - 2.
  - 3.
  - 4.

Question ID : 584189272  
Status : Answered  
Chosen Option : 3

Q.58

- Ans
- 1.
  - 2.
  - 3.
  - 4.

Question ID : 584189255  
Status : Answered  
Chosen Option : 2

Q.59

- Ans
- 1.




Question ID : 584189270  
Status : Answered



-  2.
-  3.
-  4.




Chosen Option : 2

Q.60

- Ans
-  1.
  -  2.
  -  3.
  -  4.

Question ID : 584189249  
Status : Answered  
Chosen Option : 2

Q.61

- Ans
-  1.
  -  2.
  -  3.
  -  4.





Question ID : 584189328  
Status : Answered  
Chosen Option : 2

Q.62

- Ans
-  1.
  -  2.
  -  3.
  -  4.


Question ID : 584189329  
Status : Answered  
Chosen Option : 2

Q.63

- Ans
-  1.
  -  2.
  -  3.
  -  4.





Question ID : 584189271  
Status : Answered  
Chosen Option : 2

Q.64

- Ans
-  1.
  -  2.
  -  3.
  -  4.



Question ID : 584189252  
Status : Answered  
Chosen Option : 2

Q.65

- Ans
-  1.
  -  2.
  -  3.
  -  4.




Question ID : 584189250  
Status : Answered  
Chosen Option : 3

Q.66

- Ans
-  1.
  -  2.
  -  3.
  -  4.

Question ID : 584189332  
Status : Answered  
Chosen Option : 1



Q.67

- Ans
-  1.
  -  2.
  -  3.

Question ID : 584189262  
Status : Answered  
Chosen Option : 3





 4.

Q.68

- Ans  1.  
 2.  
 3.  
 4.




Question ID : 584189351  
Status : Answered  
Chosen Option : 2

Q.69

- Ans  1.  
 2.  
 3.  
 4.


Question ID : 584189261  
Status : Answered  
Chosen Option : 1

Q.70

- Ans  1.  
 2.  
 3.  
 4.





Question ID : 584189365  
Status : Answered  
Chosen Option : 4

Q.71

- Ans  1.  
 2.  
 3.  
 4.





Question ID : 584189322  
Status : Answered  
Chosen Option : 1

Q.72

- Ans  1.  
 2.  
 3.  
 4.




Question ID : 584189354  
Status : Answered  
Chosen Option : 4

Q.73

- Ans  1.  
 2.  
 3.  
 4.





Question ID : 584189321  
Status : Answered  
Chosen Option : 4

Q.74

- Ans  1.  
 2.  
 3.  
 4.

Question ID : 584189247  
Status : Answered  
Chosen Option : 1

Q.75

- Ans  1.  
 2.  
 3.  
 4.

Question ID : 584189333  
Status : Answered  
Chosen Option : 1

Q.76

- Ans  1.  
 2.  
 3.  
 4.

Question ID : 584189299  
Status : Answered  
Chosen Option : 1

- Q.77  
Ans  1.  
 2.  
 3.  
 4.

Question ID : 584189314  
Status : Answered  
Chosen Option : 1

- Q.78  
Ans  1.  
 2.  
 3.  
 4.

Question ID : 584189352  
Status : Answered  
Chosen Option : 4

- Q.79  
Ans  1.  
 2.  
 3.  
 4.

Question ID : 584189296  
Status : Answered  
Chosen Option : 4

- Q.80  
Ans  1.  
 2.  
 3.  
 4.

Question ID : 584189335  
Status : Answered  
Chosen Option : 3

- Q.81  
Ans  1.  
 2.  
 3.  
 4.

Question ID : 584189316  
Status : Answered  
Chosen Option : 4

- Q.82  
Ans  1.  
 2.  
 3.  
 4.

Question ID : 584189315  
Status : Answered  
Chosen Option : 3

- Q.83  
Ans  1.  
 2.  
 3.  
 4.

Question ID : 584189298  
Status : Answered  
Chosen Option : 1

- Q.84  
Ans  1.  
 2.

Question ID : 584189369  
Status : Answered  
Chosen Option : 4

 3.

 4.

Q.85

Ans  1.

 2.

 3.

 4.

Question ID : 584189340

Status : Answered

Chosen Option : 1

Q.86

Ans  1.

 2.

 3.

 4.

Question ID : 584189306

Status : Answered

Chosen Option : 2

Q.87

Ans  1.

 2.

 3.

 4.

Question ID : 584189277

Status : Answered

Chosen Option : 4

Q.88

Ans  1.

 2.

 3.

 4.

Question ID : 584189308

Status : Answered

Chosen Option : 1

Q.89

Ans  1.

 2.

 3.

 4.

Question ID : 584189275

Status : Answered

Chosen Option : 4

Q.90

Ans  1.

 2.

 3.

 4.

Question ID : 584189292

Status : Not Attempted

Chosen Option : --

Q.91

Ans  1.

 2.

 3.

 4.

Question ID : 584189326

Status : Answered

Chosen Option : 1

**Comprehension:**

SubQuestion No : 92

Q.9

2

Ans  1.

 2.

Question ID : 584189350

Status : Not Attempted

Chosen Option : --





 3.

 4.

**Comprehension:**

SubQuestion No : 93

Q.9  
3

Ans  1.

 2.

 3.

 4.

Question ID : 584189349

Status : Not Attempted

Chosen Option : --

**Comprehension:**

SubQuestion No : 94

Q.9  
4

Ans  1.

 2.

 3.

 4.

Question ID : 584189348

Status : Not Attempted

Chosen Option : --

Q.95

Ans  1.

 2.

 3.

 4.

Question ID : 584189320

Status : Answered

Chosen Option : 4

Q.96

Ans  1.

 2.

 3.

 4.

Question ID : 584189338

Status : Answered

Chosen Option : 3

Q.97

Ans  1.

 2.

 3.

 4.

Question ID : 584189341

Status : Answered

Chosen Option : 1

Q.98

Ans  1.

 2.

 3.

 4.

Question ID : 584189286

Status : Answered

Chosen Option : 3

Q.99

Ans  1.

 2.

 3.

 4.

Question ID : 584189307

Status : Not Attempted

Chosen Option : --

Q.10

0

- Ans
- 1.
  - 2.
  - 3.
  - 4.

Question ID : 584189257  
Status : Answered  
Chosen Option : 1

Q.10  
1

- Ans
- 1.
  - 2.
  - 3.
  - 4.

Question ID : 584189278  
Status : Answered  
Chosen Option : 1

Q.10  
2

- Ans
- 1.
  - 2.
  - 3.
  - 4.

Question ID : 584189287  
Status : Answered  
Chosen Option : 2

Q.10  
3

- Ans
- 1.
  - 2.
  - 3.
  - 4.

Question ID : 584189364  
Status : Answered  
Chosen Option : 2

Q.10  
4

- Ans
- 1.
  - 2.
  - 3.
  - 4.

Question ID : 584189263  
Status : Answered  
Chosen Option : 4

Q.10  
5

- Ans
- 1.
  - 2.
  - 3.
  - 4.

Question ID : 584189310  
Status : Answered  
Chosen Option : 2

Q.10  
6

- Ans
- 1.
  - 2.
  - 3.
  - 4.

Question ID : 584189325  
Status : Answered  
Chosen Option : 3

Q.10  
7

- Ans
- 1.
  - 2.
  - 3.

Question ID : 584189312  
Status : Answered  
Chosen Option : 4

✓ 4.

Q.10  
8

- Ans ✓ 1.  
✗ 2.  
✗ 3.  
✗ 4.

Question ID : 584189345  
Status : Answered  
Chosen Option : 1

Q.10  
9

- Ans ✗ 1.  
✓ 2.  
✗ 3.  
✗ 4.

Question ID : 584189317  
Status : Not Attempted  
Chosen Option : --

Q.11  
0

- Ans ✗ 1.  
✓ 2.  
✗ 3.  
✗ 4.

Question ID : 584189334  
Status : Answered  
Chosen Option : 2

Q.11  
1

- Ans ✗ 1.  
✗ 2.  
✗ 3.  
✓ 4.

Question ID : 584189260  
Status : Answered  
Chosen Option : 4

Q.11  
2

- Ans ✗ 1.  
✗ 2.  
✓ 3.  
✗ 4.

Question ID : 584189276  
Status : Answered  
Chosen Option : 3

Q.11  
3

- Ans ✗ 1.  
✓ 2.  
✗ 3.  
✗ 4.

Question ID : 584189330  
Status : Answered  
Chosen Option : 2

Q.11  
4

- Ans ✗ 1.  
✓ 2.  
✗ 3.  
✗ 4.

Question ID : 584189253  
Status : Answered  
Chosen Option : 2




Q.11  
5

- Ans ✗ 1.

Question ID : 584189279  
Status : Answered  
Chosen Option : 1





-  2.
-  3.
-  4.

Q.11  
6

- Ans
-  1.
  -  2.
  -  3.
  -  4.



Question ID : 584189304  
Status : Answered  
Chosen Option : 4

Q.11  
7

- Ans
-  1.
  -  2.
  -  3.
  -  4.




Question ID : 584189344  
Status : Answered  
Chosen Option : 4

Q.11  
8

- Ans
-  1.
  -  2.
  -  3.
  -  4.




Question ID : 584189269  
Status : Answered  
Chosen Option : 2

Q.11  
9

- Ans
-  1.
  -  2.
  -  3.
  -  4.

Question ID : 584189264  
Status : Answered  
Chosen Option : 2

Q.12  
0

- Ans
-  1.
  -  2.
  -  3.
  -  4.

Question ID : 584189295  
Status : Not Attempted  
Chosen Option : --

