



# RAILWAY RECRUITMENT BOARDS

## रेलवे भर्ती बोर्ड

RRB NTPC 19th April 2016 Shift 2

Test Date:	19/04/2016
Test Time:	12:30 PM - 2:00 PM
Subject:	RRB NTPC Graduate

- Options shown in green color with a tick icon are correct
- Chosen option on top right of the question indicates the option selected by the candidate

Q.1 If 'how are you' is written as 'ne ki se' and 'where are you' as 'ne bl se' and 'you were here' as 'ke ne jo', then 'how you here' is written as

- A. ke ki ne
- B. se ne ki
- C. ne bl ke
- D. bl se ne

- Ans
- 1. B
  - 2. D
  - 3. A
  - 4. C

Question ID : 9888372545

Status : **Not Attempted and Marked For Review**

Chosen Option : --

Q.2 \_\_\_\_\_ is not a type of heat transfer.

- A. Diffusion
- B. Reflection
- C. Convection
- D. Radiation

- Ans
- 1. B
  - 2. A
  - 3. D
  - 4. C

Question ID : 9888372494

Status : **Not Attempted**

Chosen Option : --

Q.3 International Women's day is celebrated on \_\_\_ March every year.

- A. 6<sup>th</sup>
- B. 7<sup>th</sup>
- C. 8<sup>th</sup>
- D. 9<sup>th</sup>

- Ans
- 1. B
  - 2. C
  - 3. A
  - 4. D

Question ID : 9888372473

Status : **Not Attempted**

Chosen Option : --

Q.4 Replace # sign with the mathematical operators '+', '+', '-' or '=' to get a balanced equation out of 186 # 31 # 36 # 30.

- A. + + =
- B. - = +
- C. - + +
- D. + = -

- Ans  1. D  
 2. B  
 3. C  
 4. A

Question ID : 9888372547

Status : Answered

Chosen Option : 1

Q.5 Triangle PQR is such that PQ=9 cm, QR=6 cm, PR=7.5 cm and triangle PQR is similar to triangle XYZ. If XY=18 cm, find the value of YZ.

- A. 15 cm
- B. 18 cm
- C. 12 cm
- D. 9 cm

- Ans  1. A  
 2. C  
 3. B  
 4. D

Question ID : 9888372533

Status : Answered

Chosen Option : 2

Q.6 \_\_\_\_\_ is used as a stabilizer in ice cream.

- A. Gelatin
- B. Sugar
- C. Milk
- D. Strawberry

- Ans  1. C  
 2. B  
 3. D  
 4. A

Question ID : 9888372502

Status : Not Attempted

Chosen Option : --

Q.7 The major ingredient of sweetened soft drink is

- A. Carbonated water
- B. Hydrochloric acid
- C. Phosphoric acid
- D. Caffeine

- Ans  1. C  
 2. B  
 3. D  
 4. A

Question ID : 9888372496

Status : Answered

Chosen Option : 4

Q.8 Rs. 10000 is being compounded at 20% per annum. Calculate the amount after 2 years if rate of interest is charged half yearly.

- A. Rs. 10041
- B. Rs. 14641
- C. Rs. 12000
- D. Rs. 13660

- Ans  1. C  
 2. D  
 3. A  
 4. B

Question ID : 9888372518

Status : Answered

Chosen Option : 4

Q.9 Pakistani film industry is known as \_\_\_\_\_ .

- A. Pollywood
- B. Lollywood
- C. Kollywood
- D. Mollywood

Ans  1. C  
 2. D  
 3. A  
 4. B

Question ID : 9888372478

Status : Answered

Chosen Option : 4

Q.10 The mean of a distribution is 18 and the standard deviation is 4.5. What is the value of the coefficient of variation?

- A. 50%
- B. 25%
- C. 100%
- D. 75%

Ans  1. D  
 2. A  
 3. C  
 4. B

Question ID : 9888372535

Status : Not Attempted

Chosen Option : --

Q.11 If  $a^3+b^3+c^3-3abc=0$ , then find the value of  $(a^2/bc + b^2/ac - 3)$ .

- A.  $-c^2/ab$
- B.  $-c^2/bc$
- C.  $-c^3/ba$
- D.  $-c/a$

Ans  1. B  
 2. D  
 3. A  
 4. C

Question ID : 9888372514

Status : Answered

Chosen Option : 3

Q.12 Pointing to a woman, I said that her brother's only son is the brother of my wife. How is the woman related to me?

- A. Father-in-law's sister
- B. Mother-in-law
- C. Sister-in-law
- D. Sister

Ans  1. B  
 2. D  
 3. C  
 4. A




Question ID : 9888372555

Status : Answered

Chosen Option : 4

Q.13 Which of the following states does not share a border with Myanmar?

- A. Assam
- B. Mizoram
- C. Nagaland
- D. Manipur

Ans  1. A  
 2. D  
 3. B

Question ID : 9888372476

Status : Answered

Chosen Option : 1

 4. C

**Q.14** Geographical Indication (GI) is related to \_\_\_\_\_ having unique geographic origin and evolution over centuries.

- A. Hills
- B. Mountain ranges
- C. Plains
- D. Products

**Ans**  1. C

 2. D

 3. B

 4. A

Question ID : **9888372477**

Status : **Answered**

Chosen Option : 3

**Q.15** In March 2016 Election Commission of India declared assembly elections in \_\_\_\_ states scheduled for April – May 2016.

- A. 3
- B. 7
- C. 5
- D. 6

**Ans**  1. B

 2. D

 3. C

 4. A

Question ID : **9888372488**

Status : **Answered**

Chosen Option : 3

**Q.16** 10 persons can do a job in X days. If 20 persons with twice the efficiency can do the same job in 5 days, then find the value of X?

- A. 40
- B. 15
- C. 20
- D. 30

**Ans**  1. B

 2. C

 3. A

 4. D

Question ID : **9888372520**

Status : **Answered**

Chosen Option : 2

**Q.17** P can do a piece of work in 60 days & Q can do the same work in 50 days. Find the ratio of working efficiencies of P to Q.

- A. 1/3
- B. 6/5
- C. 5/6
- D. 4/5

**Ans**  1. A

 2. B

 3. C

 4. D

Question ID : **9888372521**

Status : **Answered**

Chosen Option : 3

**Q.18** A kite is flying at a height of 50m. If the length of string is 100m then the inclination of string to the horizontal ground in degree measures is:

- A. 90
- B. 45
- C. 60
- D. 30

**Ans**  1. B

 2. C

 3. D

 4. A

Question ID : **9888372524**

Status : **Answered**

Chosen Option : 1

Q.19 Retinol is mainly related to \_\_\_\_\_.

- A. Vitamin A
- B. Vitamin B
- C. Vitamin D
- D. Vitamin E

Ans  1. D  
 2. A  
 3. C  
 4. B

Question ID : 9888372499

Status : Answered

Chosen Option : 2

Q.20 A lady said that father of Rahul's father is my father. How is the lady related to Rahul?

- A. Mother
- B. Paternal aunt
- C. Sister
- D. Niece

Ans  1. D  
 2. A  
 3. B  
 4. C

Question ID : 9888372557

Status : Answered

Chosen Option : 3

Q.21 Bollywood actor \_\_\_\_\_ has been selected for the 47<sup>th</sup> Dadasaheb Phalke Award for 2015.

- A. Dilip Kumar
- B. Manoj Kumar
- C. Rajinikanth
- D. Anupam Kher

Ans  1. C  
 2. A  
 3. B  
 4. D

Question ID : 9888372491

Status : Answered

Chosen Option : 3

Q.22 Read the given statement carefully and answer the question.

A group of people getting together casually without prior planning and in a relaxed manner is called informal gathering.

Which of the following situations better fits the above statement?

- A. A group celebrates every month on salary day.
- B. Invitees gather on the occasion of wedding reception.
- C. Soon after the release of mark list, top 10 rankers gather to greet each other.
- D. People gather to witness beating retreat at Wagah border in Amritsar.

Ans  1. A  
 2. C  
 3. D  
 4. B

Question ID : 9888372575

Status : Answered

Chosen Option : 2

Q.23 Sleep apnea is related to \_\_\_\_\_ while sleeping.

- A. Walking
- B. Talking
- C. Snoring
- D. Smiling

Ans  1. A  
 2. C  
 3. D

Question ID : 9888372504

Status : Answered

Chosen Option : 2

 4. B

Q.24 Boiling point of water is \_\_\_\_\_.

- A.  $210^{\circ}\text{F}$
- B.  $212^{\circ}\text{F}$
- C.  $214^{\circ}\text{F}$
- D.  $208^{\circ}\text{F}$

- Ans  1. A  
 2. B  
 3. D  
 4. C

Question ID : 9888372511  
Status : Answered  
Chosen Option : 2

Q.25 Circumvent : Bypass :: Comprehensible : \_\_\_\_\_

- A. Understandable
- B. Unclear
- C. Grasping
- D. Apprehend

- Ans  1. C  
 2. B  
 3. A  
 4. D

Question ID : 9888372552  
Status : Answered  
Chosen Option : 2

Q.26 Find the sum of first 8 odd prime numbers.

- A. 77
- B. 98
- C. 75
- D. 100

- Ans  1. B  
 2. C  
 3. A  
 4. D

Question ID : 9888372531  
Status : Answered  
Chosen Option : 1

Q.27 If  $a=2b/3$  ,  $b=2c/3$ , and  $c=2d/3$  , then find the ratio of b and d :

- A.  $8/9$
- B.  $4/9$
- C.  $4/3$
- D.  $5/27$

- Ans  1. D  
 2. C  
 3. A  
 4. B

Question ID : 9888372522  
Status : Answered  
Chosen Option : 4



Q.28 Windows 10 is

- A. an utility software.
- B. a browser.
- C. an application software.
- D. an operating system.

- Ans
- 1. B
  - 2. D
  - 3. C
  - 4. A

Question ID : 9888372507

Status : Answered

Chosen Option : 2

Q.29 One of the techniques used for desalination of sea water is

- A. Filtration
- B. Distillation
- C. Evaporation
- D. Condensation

- Ans
- 1. C
  - 2. B
  - 3. A
  - 4. D

Question ID : 9888372501

Status : Answered

Chosen Option : 2

Comprehension:

The following table represents the number of fans of stars MSD, VK, RD and SR in different areas of a town. Consider the information and answer the following questions based on it.

	Area 1	Area 2	Area 3	Area 4
VK	2500	1700	2300	5000
MSD	3000	3000	4000	3100
RD	1500	3500	4500	5200
SR	1500	4000	3500	2500

SubQuestion No : 30

Q.3 What is the difference between the numbers of fans of Area 2 to that of Area 3?

- 0
- A. Area 2 has 2200 more fans
  - B. Area 2 has 2100 less fans
  - C. Area 2 has 2100 more fans
  - D. Area 2 has 2200 less fans

- Ans
- 1. D
  - 2. C
  - 3. B
  - 4. A

Question ID : 9888372571

Status : Answered

Chosen Option : 3

Comprehension:



The following table represents the number of fans of stars MSD, VK, RD and SR in different areas of a town. Consider the information and answer the following questions based on it.

	Area 1	Area 2	Area 3	Area 4
VK	2500	1700	2300	5000
MSD	3000	3000	4000	3100
RD	1500	3500	4500	5200
SR	1500	4000	3500	2500

SubQuestion No : 31

Q.3 What is the difference between the total number of fans of SR and MSD?

- 1
- A. 1500
  - B. 1600
  - C. 3000
  - D. 3200

- Ans
- 1. D
  - 2. A
  - 3. B
  - 4. C

Question ID : 9888372570

Status : Answered

Chosen Option : 3

Comprehension:

The following table represents the number of fans of stars MSD, VK, RD and SR in different areas of a town. Consider the information and answer the following questions based on it.

	Area 1	Area 2	Area 3	Area 4
VK	2500	1700	2300	5000
MSD	3000	3000	4000	3100
RD	1500	3500	4500	5200
SR	1500	4000	3500	2500

SubQuestion No : 32

Q.3 In all, who has the highest number of fans?

- 2
- A. VK
  - B. MSD
  - C. RD
  - D. SR

- Ans
- 1. A
  - 2. C
  - 3. B
  - 4. D

Question ID : 9888372572

Status : Answered

Chosen Option : 2

Q.33 Echocardiogram is more closely related to

- A. Doppler effect
- B. Zeeman effect
- C. Photoelectric effect
- D. Magnetic effect

- Ans
- 1. D
  - 2. B
  - 3. C
  - 4. A

Question ID : 9888372500

Status : Answered

Chosen Option : 4

Q.34 Statements followed by some conclusions are given below.

Statements:

1. Compulsive online shopping has become a common behavior among youngsters.
2. This is evident from most of those seeking counseling for de-addiction.

Conclusions:

- I. All youngsters are addicted online shopping.
- II. All youngsters seek counseling for de-addiction.

Find which of the given conclusions logically follows from the given statements.

- A. Only conclusion I follows
- B. Only conclusion II follows
- C. Both I and II follow
- D. Neither I nor II follows

- Ans
- 1. A
  - 2. B
  - 3. D
  - 4. C

Question ID : 9888372563

Status : Answered

Chosen Option : 1

Q.35 In a mixture 25 litres, the ratio of milk and water is 4:1. How many litres of milk must be added to make the ratio 16:1?

- A. 21
- B. 25
- C. 60
- D. 36

- Ans
- 1. A
  - 2. D
  - 3. B
  - 4. C

Question ID : 9888372523

Status : Answered

Chosen Option : 4

Q.36 World Wetland day is celebrated every year on \_\_\_\_ February.

- A. 2<sup>nd</sup>
- B. 3<sup>rd</sup>
- C. 4<sup>th</sup>
- D. 5<sup>th</sup>

- Ans
- 1. B
  - 2. A
  - 3. C
  - 4. D

Question ID : 9888372487

Status : Not Attempted

Chosen Option : --

Q.37 Night blindness : Sight :: \_\_\_\_\_ : Speech

- A. Talk
- B. Stutter
- C. Speak
- D. Lecture

Ans  1. D  
 2. B  
 3. A  
 4. C

Question ID : 9888372554

Status : Answered

Chosen Option : 2

Q.38 Davis Cup 2015 final was held in \_\_\_\_\_.

- A. UK
- B. Australia
- C. Belgium
- D. Argentina

Ans  1. B  
 2. D  
 3. A  
 4. C

Question ID : 9888372485

Status : Not Attempted

Chosen Option : --

Q.39 Mohan starts to calculate sum of all odd natural number less than 83. What result does he get?

- A. 1456
- B. 1681
- C. 1437
- D. 1671

Ans  1. C  
 2. A  
 3. B  
 4. D

Question ID : 9888372529

Status : Answered

Chosen Option : 3

Q.40 'Start' menu in a standard personal computer is

- A. Part of the hardware
- B. A set of options and commands
- C. Nothing but the status bar
- D. Network related

Ans  1. B  
 2. A  
 3. C  
 4. D

Question ID : 9888372505

Status : Answered

Chosen Option : 1

Q.41 If the mathematical operator '+' means '×', '-' means '+', '×' means '+' and '÷' means '÷', then

$$24 + 48 - 12 \times 4 + 2 = ?$$

- A. 6
- B. -6
- C. 16
- D. 28

Ans  1. B

Question ID : 9888372548

Status : Answered

Chosen Option : 4

2. A

3. C

4. D

Q.42 **Avalanche : Ice :: Volcano : \_\_\_\_\_**

A. Lava

B. Sand

C. Heat

D. Earth

Ans  1. A

2. D

3. B

4. C

Question ID : 9888372553

Status : Answered

Chosen Option : 1

Q.43 The process of reducing the milk fat globules size to allow them to stay evenly distributed in milk is called \_\_\_\_\_.

A. Standardization

B. Pasteurization

C. Homogenization

D. Fortification

Ans  1. B

2. D

3. C

4. A

Question ID : 9888372512

Status : Answered

Chosen Option : 3

Q.44 \_\_\_\_\_ was the 3<sup>rd</sup> Mughal Emperor of India.

A. Humayun

B. Akbar

C. Aurangzeb

D. Jahangir

Ans  1. B

2. A

3. D

4. C

Question ID : 9888372480

Status : Answered

Chosen Option : 1

Q.45 Velocity of a car does not depend on

A. Speedometer

B. Change in direction

C. Change in speed

D. Change in acceleration

Ans  1. A

2. D

3. B

4. C

Question ID : 9888372495

Status : Answered

Chosen Option : 1

Q.46 The Colosseum, known as the Flavian Amphitheatre, is located in \_\_\_\_\_.

- A. Venice
- B. Rome
- C. Milan
- D. Vatican City

- Ans
- 1. A
  - 2. C
  - 3. D
  - 4. B

Question ID : 9888372492  
Status : Answered  
Chosen Option : 4

Q.47 Mukesh got series of discount 30%, 25%, 15% on his shirt. Find out the single equivalent discount.

- A. 52.34%
- B. 38.35%
- C. 55.38%
- D. 57.38%

- Ans
- 1. B
  - 2. C
  - 3. D
  - 4. A

Question ID : 9888372538  
Status : Answered  
Chosen Option : 2

Q.48 In March 2016 National Green Tribunal imposed an initial compensation of Rs. 5 Crore on \_\_\_\_\_ for tampering with the Yamuna river's flood plains.

- A. Kalki Avatar Foundation
- B. Art of Living Foundation
- C. Emissaries of Divine Light
- D. Sant Nirankari Mission

- Ans
- 1. C
  - 2. B
  - 3. A
  - 4. D

Question ID : 9888372486  
Status : Answered  
Chosen Option : 2

Q.49 The ancient Indian legal document 'Manusmriti' was written in \_\_\_\_\_.

- A. Tamil
- B. Hindi
- C. Sanskrit
- D. Bengali

- Ans
- 1. B
  - 2. D
  - 3. A
  - 4. C

Question ID : 9888372474  
Status : Answered  
Chosen Option : 4

Q.50 Find the missing (?) in the series:

....., FHJ, KMO, PRT, ?

- A. UVZ
- B. UXZ
- C. UVW
- D. UWY

- Ans
- 1. A
  - 2. C
  - 3. B

Question ID : 9888372550  
Status : Answered  
Chosen Option : 4



✓ 4. D

Q.51 India won the 2016 Asia Cup T20 held in Bangladesh by \_\_\_\_\_ wickets.

- A. 7
- B. 6
- C. 5
- D. 8

Ans ✓ 1. D

✗ 2. C

✗ 3. B

✗ 4. A

Question ID : 9888372484

Status : Not Attempted

Chosen Option : --

Q.52 Kakori train robbery was organized by the \_\_\_\_\_ in 1925.

- A. Swaraj Party
- B. Indian National Congress
- C. Anushilan Samiti
- D. Hindustan Republican Association

Ans ✗ 1. A

✗ 2. B

✓ 3. D

✗ 4. C

Question ID : 9888372481

Status : Answered

Chosen Option : 3

Q.53 The mean of 20 observations is 19. One more observation is included and the new mean becomes 20. The 21<sup>st</sup> observation is:

- A. 20
- B. 30
- C. 40
- D. 42

Ans ✓ 1. C

✗ 2. D

✗ 3. B

✗ 4. A

Question ID : 9888372536

Status : Answered

Chosen Option : 1

Q.54 Golconda Fort was built during \_\_\_\_\_.

- A. Vijayanagara Empire
- B. Qutb Shahi dynasty
- C. Satavahana dynasty
- D. Hoysala Dynasty

Ans ✗ 1. A

✗ 2. D

✗ 3. C

✓ 4. B

Question ID : 9888372493

Status : Answered

Chosen Option : 4

Q.55 Provincial Autonomy was provided by \_\_\_\_\_.

- A. The Government of India Act 1935
- B. The Montague-Chelmsford Report
- C. The Government of India Act 1919
- D. The Indian Independence Act 1947

Question ID : 9888372482

Status : Answered

Chosen Option : 1

- Ans  1. A  
 2. B  
 3. C  
 4. D

Q.56 Who is number 1 in the Forbes 2016 ranking of World's billionaires?

- A. Warren Buffet  
B. Amancio Ortega  
C. Bill Gates  
D. Carlos Slim Helu

Question ID : 9888372475  
Status : Answered  
Chosen Option : 2

- Ans  1. B  
 2. C  
 3. A  
 4. D

Q.57 In a factory, 60 workers can stitch 120 m of clothes in 7 days, what length of clothes can be stitched by 70 workers in 5 days?

- A. 100 m  
B. 90 m  
C. 85 m  
D. 110 m

Question ID : 9888372528  
Status : Answered  
Chosen Option : 4

- Ans  1. B  
 2. C  
 3. D  
 4. A

Q.58 Which one reveals, more appropriately, functioning of the heart?

- A. Electrocardiogram  
B. Echocardiogram  
C. Stethoscope  
D. Lipid profile

Question ID : 9888372503  
Status : Answered  
Chosen Option : 4

- Ans  1. B  
 2. D  
 3. C  
 4. A

Q.59 Given that  $(a^2+b^2)=60$ , then find the value of  $(a+b)^2 + (a-b)^2$ .

- A. 90  
B. 120  
C. 140  
D. 150

Question ID : 9888372515  
Status : Answered  
Chosen Option : 4

- Ans  1. C  
 2. A  
 3. D  
 4. B

Q.60 Mother of K's father is the sister of G. S is the daughter of G. How is S related to K's father?

- A. Cousin sister  
B. Mother  
C. Paternal Aunt  
D. Cannot be determined.

Question ID : 9888372556  
Status : Answered  
Chosen Option : 1



- Ans  1. A  
 2. B  
 3. C  
 4. D

Q.61 A balloon is connected to a meteorological station by a cable of length 130 m, inclined at  $60^\circ$  to the horizontal. Find the height of the balloon from the ground. Assume that there is no slack in cable.

- A. 110.32 m  
B. 173 m  
C. 163.28 m  
D. 112.58 m

- Ans  1. C  
 2. A  
 3. B  
 4. D

Question ID : 9888372525

Status : Answered

Chosen Option : 4

Q.62 Orbital period of Halley's comet is \_\_\_\_\_ years.

- A. 25  
B. 50  
C. 75  
D. 100

- Ans  1. B  
 2. D  
 3. A  
 4. C

Question ID : 9888372508

Status : Answered

Chosen Option : 4

Q.63 Find the greatest number which on dividing 1580 and 3800 leaves remainders 8 and 1 respectively.

- A. 262  
B. 131  
C. 65.5  
D. 393

- Ans  1. B  
 2. D  
 3. C  
 4. A

Question ID : 9888372516

Status : Not Attempted and Mark ed For Review

Chosen Option : --

Q.64 Which one is not the cause of kidney stone formation?

- A. Drinking more water  
B. Diabetic mellitus  
C. Taking nuts rich in oxalate  
D. Eating lot of stone forming foods

- Ans  1. A  
 2. B  
 3. D  
 4. C

Question ID : 9888372498

Status : Answered

Chosen Option : 1

Q.65 If the angles of a triangle are in the ratio of 2:3:5, then find the ratio of the greatest angle to the smallest angle.

- A. 7:2  
B. 5:2  
C. 5:3  
D. 3:5

Question ID : 9888372534

Status : Answered

Chosen Option : 1

- Ans  1. D  
 2. C  
 3. A  
 4. B

Q.66 The annual financial statement prepared under article 112 of the Indian Constitution is called \_\_\_\_\_.

- A. Public account  
B. Consolidated account  
C. Budget  
D. Revenue account

- Ans  1. A  
 2. D  
 3. C  
 4. B

Question ID : 9888372489

Status : Not Attempted

Chosen Option : --

Q.67 Ram travels  $\frac{4}{9}$  of the total journey by bus,  $\frac{5}{18}$  by rail and the remaining 10 km on foot. Find the distance of total journey.

- A. 42 km  
B. 90 km  
C. 36 km  
D. 18 km

- Ans  1. B  
 2. A  
 3. D  
 4. C

Question ID : 9888372541

Status : Answered

Chosen Option : 4

Q.68 If  $a=5$ ,  $b=4$ ,  $c=8$  then find the value of  $(a^3+b^3+c^3-3abc)/(ab+bc+ca-a^2-b^2-c^2)$ .

- A. 15  
B. 17  
C. -17  
D. -15

- Ans  1. B  
 2. C  
 3. D  
 4. A

Question ID : 9888372513

Status : Answered

Chosen Option : 2

Q.69 The average age of a batch of 19 members is 24 years. If the age of the faculty be included, then the average increases by 4 months. What is the age of the faculty?

- A. 35 years  
B. 30 years 8 months  
C. 37 years 4 months  
D. 32 years 8 months

- Ans  1. C  
 2. A  
 3. D  
 4. B

Question ID : 9888372527

Status : Answered

Chosen Option : 4

Q.70 Courtroom : Judge :: Stadium : \_\_\_\_\_

- A. Landlord  
B. Organizer  
C. Referee  
D. Promoter

- Ans  1. A

Question ID : 9888372551

Status : Answered

Chosen Option : 3

 2. B

 3. C

 4. D

Q.71 The tennis star, \_\_\_\_\_ was provisionally suspended after testing positive for banned drugs during Australian open 2016.

- A. Maria Sharapova
- B. Serena Williams
- C. Ana Ivanovic
- D. Andy Murray

Ans  1. B

 2. C

 3. D

 4. A

Question ID : 9888372490

Status : Answered

Chosen Option : 4

Comprehension:

Consider the following information and answer the questions based on it.

Out of the 75 birders, 15 wanted to see only sunbird, 10 wanted to see only flycatcher, 12 wanted to see both sunbird and nuthatch, 15 wanted to see only bee-eater, 13 wanted to see both sunbird and bee-eater, 5 wanted to see both flycatcher and nuthatch and the remaining wanted to see only nuthatch.

SubQuestion No : 72

Q.7 The difference between the birders who want to see sunbird and those who want to see flycatcher is

- 2
- A. 12
  - B. 25
  - C. 30
  - D. 15

Ans  1. B

 2. C

 3. A

 4. D

Question ID : 9888372567

Status : Not Attempted

Chosen Option : --

Comprehension:

Consider the following information and answer the questions based on it.

Out of the 75 birders, 15 wanted to see only sunbird, 10 wanted to see only flycatcher, 12 wanted to see both sunbird and nuthatch, 15 wanted to see only bee-eater, 13 wanted to see both sunbird and bee-eater, 5 wanted to see both flycatcher and nuthatch and the remaining wanted to see only nuthatch.

SubQuestion No : 73

Q.7 How many birders wanted to see only one bird?

- 3
- A. 30
  - B. 40
  - C. 45
  - D. 50

Ans  1. A

 2. D

 3. C

 4. B

Question ID : 9888372566

Status : Not Attempted

Chosen Option : --

Comprehension:

Consider the following information and answer the questions based on it.

Out of the 75 birders, 15 wanted to see only sunbird, 10 wanted to see only flycatcher, 12 wanted to see both sunbird and nuthatch, 15 wanted to see only bee-eater, 13 wanted to see both sunbird and bee-eater, 5 wanted to see both flycatcher and nuthatch and the remaining wanted to see only nuthatch.

SubQuestion No : 74

Q.7 The ratio of birders who like nuthatch to those who like bee-eaters is

- 4
- A. 11/14
  - B. 10/7
  - C. 11/20
  - D. 30/8

Question ID : 9888372568

Status : Not Attempted

Chosen Option : --

- Ans
- 1. C
  - 2. B
  - 3. A
  - 4. D

Q.75 Find the missing (?) in the series:

9, 4, 16, 6, 36, 9, 81, ?

- A. 12
- B. 10
- C. 11
- D. 13

Question ID : 9888372549

Status : Not Attempted

Chosen Option : --

- Ans
- 1. C
  - 2. D
  - 3. A
  - 4. B

Q.76 Charles Wilkinson's English version of Bhagavad Gita was first published in the year

- A. 1685
- B. 1725
- C. 1785
- D. 1885

Question ID : 9888372479

Status : Not Attempted

Chosen Option : --

- Ans
- 1. C
  - 2. A
  - 3. B
  - 4. D

Q.77 A sum of money of Rs. 1000 is lent out in two parts in such a way that the interest on one part at 10% per annum for 5 years is equal to another at 5% for 10 years. Calculate the sum lent out at 5%.

- A. Rs. 500
- B. Rs. 800
- C. Rs. 1000
- D. Rs. 1200

Question ID : 9888372519

Status : Not Attempted and Mark ed For Review

Chosen Option : --

- Ans
- 1. D
  - 2. C
  - 3. A
  - 4. B



Q.78 In a certain code, 329 means 'you are bad', 419 means 'bad is good' and 195 means 'nothing is bad'. \_\_\_\_ represents 'good'.

- A. 9
- B. 4
- C. 1
- D. 3

Ans  1. D  
 2. B  
 3. A  
 4. C

Question ID : 9888372544

Status : Not Attempted

Chosen Option :--

Q.79 Any online 'demo' is \_\_\_\_\_.

- A. An interactive presentation
- B. A non-interactive presentation
- C. Not a sequential presentation
- D. An active user interface

Ans  1. A  
 2. B  
 3. C  
 4. D

Question ID : 9888372506

Status : Answered

Chosen Option : 2

Q.80 In a certain code, 324 means 'are you alright', 783 means 'you come home' and 9271 means 'we are at home'. Which digit represents 'come'?

- A. 8
- B. 9
- C. 7
- D. 3

Ans  1. C  
 2. D  
 3. B  
 4. A

Question ID : 9888372543

Status : Not Attempted

Chosen Option :--

Q.81 The game of football is also referred to as \_\_\_\_\_.

- A. Rugby
- B. Poker
- C. Soccer
- D. Ping-Pong

Ans  1. D  
 2. B  
 3. C  
 4. A

Question ID : 9888372483

Status : Answered

Chosen Option : 3

Q.82 Rearrange the jumbled letters to make meaningful words and then select the one which is different.

- A. OMESU
- B. ROTINOM
- C. RETIAW
- D. RETNIRP

Ans  1. C  
 2. D  
 3. B  
 4. A

Question ID : 9888372564

Status : Not Attempted

Chosen Option :--

Q.83 Find the odd pair out.

- A. Nitrogen : Air
- B. Hydrogen : Water
- C. Uranium : Coins
- D. Sulphur : Match stick

Ans  1. B  
 2. D  
 3. A  
 4. C

Question ID : 9888372497

Status : Answered

Chosen Option : 4

Q.84 Neeraj purchased a few shirts for his shop at cost prices ranging from Rs. 400 to Rs. 550 and sold at prices ranging from Rs. 450 to Rs. 650. What is the maximum profit that might be made in selling 10 shirts?

- A. Rs. 2800
- B. Rs. 2500
- C. Rs. 2400
- D. Rs. 2000

Ans  1. B  
 2. C  
 3. D  
 4. A

Question ID : 9888372539

Status : Not Attempted

Chosen Option : --

Q.85 As per historical astronomy there are \_\_\_\_\_ zodiac divisions.

- A. 9
- B. 10
- C. 11
- D. 12

Ans  1. D  
 2. B  
 3. A  
 4. C

Question ID : 9888372510

Status : Answered

Chosen Option : 1

Q.86 How much is the maximum % discount that Sheela can offer to her customer on her Marked Price so that she sells her product at no profit or loss, if she had already marked her product by 25% more than the cost price?

- A. 25%
- B. 20%
- C. 30%
- D. 40%

Ans  1. A  
 2. C  
 3. B  
 4. D

Question ID : 9888372540

Status : Not Attempted

Chosen Option : --

Q.87 If the standard deviation of a population is 10, what would be the population variance?

- A. 100
- B. 30
- C. 5
- D. 20

Ans  1. D  
 2. B  
 3. A  
 4. C

Question ID : 9888372537

Status : Answered

Chosen Option : 3

Q.88 An assertion (A) and a reason (R) are given below.

**Assertion (A):** Electric wires are generally made of copper.

**Reason (R):** Copper is a good conductor.

Choose the correct option.

- A. Both A and R are true and R is the correct explanation of A
- B. Both A and R are true, but R is not the correct explanation of A
- C. A is true, but R is false
- D. A is false, but R is true

- Ans
- 1. D
  - 2. B
  - 3. A
  - 4. C

Question ID : 9888372573

Status : Answered

Chosen Option : 3

Q.89 Ram is thrice as fast as Mohan and Mohan is twice as fast as Sohan. The distance covered by Sohan in 42 minutes will be covered by Mohan in :

- A. 18 minutes
- B. 21 minutes
- C. 20 minutes
- D. 22 minutes

- Ans
- 1. A
  - 2. B
  - 3. D
  - 4. C

Question ID : 9888372542

Status : Answered

Chosen Option : 2

Q.90 An angle is  $60^\circ$  more than one fifth of its complement. Find the smaller angle in degrees.

- A.  $65^\circ$
- B.  $35^\circ$
- C.  $25^\circ$
- D.  $45^\circ$

- Ans
- 1. C
  - 2. B
  - 3. D
  - 4. A

Question ID : 9888372532

Status : Answered

Chosen Option : 1

Comprehension:

Consider the following information and answer questions based on it.

Seven bottles colored – brown, blue, black, violet, white, indigo and purple are kept in a row, in random order, from left to right such that the –

1. White and purple bottles are not at either extremes.
2. Brown bottle is to the immediate right of violet bottle and to the immediate left of the white bottle.
3. White, violet and brown bottles are not at the center.
4. Black bottle is to the immediate left of purple bottle.
5. Blue bottle is neither second last nor at either extremes.

SubQuestion No : 91

Q.91 Bottles at the extreme right and left ends are

- A. Violet and purple
- B. Indigo and violet
- C. Black and indigo
- D. Black and violet

- Ans
- 1. B

Question ID : 9888372561

Status : Answered

Chosen Option : 1



 2. D

 3. A

 4. C

**Comprehension:**

**Consider the following information and answer questions based on it.**

Seven bottles colored – brown, blue, black, violet, white, indigo and purple are kept in a row, in random order, from left to right such that the –

1. White and purple bottles are not at either extremes.
2. Brown bottle is to the immediate right of violet bottle and to the immediate left of the white bottle.
3. White, violet and brown bottles are not at the center.
4. Black bottle is to the immediate left of purple bottle.
5. Blue bottle is neither second last nor at either extremes.

SubQuestion No : 92

Q.9  
2 Which bottle is at the center of the row?

- A. Black bottle
- B. Indigo bottle
- C. Blue bottle
- D. Purple bottle

Question ID : 9888372559

Status : Answered

Chosen Option : 3

Ans  1. B

 2. C

 3. A

 4. D

**Comprehension:**

**Consider the following information and answer questions based on it.**

Seven bottles colored – brown, blue, black, violet, white, indigo and purple are kept in a row, in random order, from left to right such that the –

1. White and purple bottles are not at either extremes.
2. Brown bottle is to the immediate right of violet bottle and to the immediate left of the white bottle.
3. White, violet and brown bottles are not at the center.
4. Black bottle is to the immediate left of purple bottle.
5. Blue bottle is neither second last nor at either extremes.

SubQuestion No : 93

Q.9  
3 Which of the following statement is correct?

- A. Indigo bottle is to the immediate left of the purple bottle.
- B. Blue is to the immediate right of the purple bottle.
- C. There are at least five bottles between brown and black.
- D. Black bottle is to the immediate right of the blue bottle.

Question ID : 9888372560

Status : Not Attempted

Chosen Option : --

Ans  1. A

 2. D

 3. C

 4. B

Q.94 Statements followed by some conclusions are given below.

Statements:

1. Demand and supply determine the prices of goods and services.
2. When there are too many buyers, prices are pushed up and too many sellers push down prices.

Conclusions:

- I. Buyers and sellers determine the prices.
- II. Price discovery is market driven.

Find which of the given conclusions logically follows from the given statements.

- A. Only conclusion I follows
- B. Only conclusion II follows
- C. Both I and II follow
- D. Neither I nor II follows

- Ans
- 1. A
  - 2. B
  - 3. C
  - 4. D

Question ID : 9888372562

Status : Not Attempted

Chosen Option : --

Q.95 Find the value of  $6 + 11 + 16 + 21 + \dots + 71$ .

- A. 539
- B. 561
- C. 661
- D. 639

- Ans
- 1. A
  - 2. D
  - 3. B
  - 4. C

Question ID : 9888372530

Status : Answered

Chosen Option : 1

Q.96 The astronomer who discovered planet Pluto was \_\_\_\_\_.

- A. Sylvain Arend
- B. Joseph Asbrook
- C. Edwin Hubble
- D. Clyde Tombaugh

- Ans
- 1. C
  - 2. A
  - 3. B
  - 4. D

Question ID : 9888372509

Status : Not Attempted

Chosen Option : --

Q.97 Read the given statements carefully and answer the question.

Statement: The main reasons behind cyber criminals using international phone numbers to cheat the public, by asking their secured credit card details are

- (i) it is easy to convince people and
- (ii) it is difficult to trace the calls coming from foreign countries.

Which of the following is true according to the given statement?

- A. There are only two reasons behind such calls.
- B. People have full faith in foreign calls.
- C. It is not possible to trace foreign calls.
- D. Cyber criminals prefer international calls to cheat gullible people.

- Ans
- 1. A
  - 2. C
  - 3. B
  - 4. D

Question ID : 9888372574

Status : Answered

Chosen Option : 4

**Q.98** Three numbers are in the ratio of 3:5:10 and their LCM is 630. Find their HCF.

- A. 21
- B. 42
- C. 63
- D. 36

**Ans**  1. A

2. D

3. C

4. B

Question ID : **9888372517**

Status : **Not Attempted**

Chosen Option : --

**Q.99** 3 years ago, the ratio of Maya's and Shikha's age was 5: 9 respectively. After 5 years, this ratio would become 3: 5. Find present age of Maya?

- A. 40
- B. 45
- C. 43
- D. 53

**Ans**  1. C

2. A

3. D

4. B

Question ID : **9888372526**

Status : **Answered**

Chosen Option : 1

**Q.10** If 'god is fair' = 'ge se fa', 'who is god' = 'ge we fa' and 'you are god' = 'ne le fa', which code does represent 'is'?

**0**

- A. se
- B. ge
- C. fa
- D. we

**Ans**  1. A

2. C

3. D

4. B

Question ID : **9888372546**

Status : **Answered**

Chosen Option : 4

