



# RAILWAY RECRUITMENT BOARDS

## रेलवे भर्ती बोर्ड

RRB NTPC 27th April 2016 Shift 2

Test Date:	27/04/2016
Test Time:	12:30 PM - 2:00 PM
Subject:	RRB NTPC Graduate

- Options shown in green color with a tick icon are correct
- Chosen option on top right of the question indicates the option selected by the candidate

Q.1 \_\_\_\_\_ is not caused by airborne transmission.

- A. Tuberculosis
- B. Chickenpox
- C. Measles
- D. Hepatitis B

Ans  1. D  
 2. A  
 3. C  
 4. B

Question ID : 2055233733

Status : Answered

Chosen Option : 2

Q.2 Read the statements and answer the question based on it.

Statements:

- Some mammals are extinct and some are critically endangered.
- All dinosaurs are extinct.
- Some reptiles are critically endangered and some are already extinct.

Which option logically follows the given statements?

- A. All dinosaurs are mammals.
- B. There are no reptiles that are out of the danger of extinction.
- C. No dinosaurs are critically endangered.
- D. Some reptiles are dinosaurs who are extinct.

Ans  1. D  
 2. C  
 3. B  
 4. A

Question ID : 2055233808

Status : Answered

Chosen Option : 3

Q.3 Allergy Screening Blood Test for human beings does not include \_\_\_\_\_.

- A. RAST
- B. ELISA
- C. IgE
- D. Hemoglobin A1C

Ans  1. B

Question ID : 2055233738

Status : Not Attempted

Chosen Option : --

✓ 2. D

✗ 3. A

✗ 4. C

Q.4 \_\_\_\_\_ is not a tributary of the river Ganges.

A. Yamuna

B. Gomti

C. Kosi

D. Manas

Ans ✗ 1. B

✗ 2. C

✓ 3. D

✗ 4. A

Question ID : 2055233712

Status : Answered

Chosen Option : 3

Q.5 वह संख्या ज्ञात कीजिए जिसका 6 गुना 60 से 6 कम है।

A. 6

B. 7

C. 8

D. 9

Ans ✗ 1. B

✓ 2. D

✗ 3. A

✗ 4. C

Question ID : 2055233749

Status : Not Attempted

Chosen Option : --

Q.6 The area of a rectangle is 448 sq.m. If the length is more than the breadth by 12%, find the breadth.

A. 14 m

B. 16 m

C. 18 m

D. 20 m

Ans ✗ 1. A

✗ 2. C

✓ 3. D

✗ 4. B

Question ID : 2055233772

Status : Not Attempted

Chosen Option : --

Q.7 Mirages are formed primarily due to \_\_\_\_\_ of light.

A. Reflection

B. Diffusion

C. Refraction

D. Scattering

Ans ✗ 1. B

✓ 2. C

✗ 3. D

✗ 4. A

Question ID : 2055233746

Status : Answered

Chosen Option : 4

Q.8 Resolution : Determination : : Consensus : \_\_\_\_\_ .

- A. Difference
- B. Unanimity
- C. Decide
- D. Outcome

- Ans
- 1. C
  - 2. D
  - 3. A
  - 4. B

Question ID : 2055233789

Status : Answered

Chosen Option : 1

Comprehension:

The following table represents the transport preferences of a certain number of people in three towns V, K and S. Consider the information and answer the following questions based on it.

	Cycle	Taxi	Rickshaw	Bus	Own car	Train
Town V	150	155	75	100	125	145
Town K	115	100	100	175	175	110
Town S	150	150	125	100	100	155

SubQuestion No : 9

Q.9 What is the most preferred mode of transport?

- A. Train
- B. Bus
- C. Cycle
- D. Taxi

- Ans
- 1. D
  - 2. A
  - 3. C
  - 4. B

Question ID : 2055233807

Status : Answered

Chosen Option : 3

Comprehension:

The following table represents the transport preferences of a certain number of people in three towns V, K and S. Consider the information and answer the following questions based on it.

	Cycle	Taxi	Rickshaw	Bus	Own car	Train
Town V	150	155	75	100	125	145
Town K	115	100	100	175	175	110
Town S	150	150	125	100	100	155

SubQuestion No : 10

Q.10 The number of people wanting to travel by train and bus is how much more or less than those wanting to travel by taxi and own car?

- A. 15 more
- B. 15 less
- C. 20 more
- D. 20 less

- Ans
- 1. B
  - 2. D
  - 3. A
  - 4. C

Question ID : 2055233806

Status : Not Attempted

Chosen Option : --

Comprehension:

The following table represents the transport preferences of a certain number of people in three towns V, K and S. Consider the information and answer the following questions based on it.





	Cycle	Taxi	Rickshaw	Bus	Own car	Train
Town V	150	155	75	100	125	145
Town K	115	100	100	175	175	110
Town S	150	150	125	100	100	155

SubQuestion No : 11

Q.1 The difference between people who prefer taxi to own car is?

1

- A. 5
- B. 10
- C. 15
- D. 20

Ans  1. D  
 2. B  
 3. C  
 4. A

Question ID : 2055233805

Status : Answered

Chosen Option : 4

Q.12 Salt Satyagraha in Tamil Nadu was led by \_\_\_\_\_.

- A. C. Rajagopalachari
- B. K. Kamaraj
- C. Potti Sriramulu
- D. C. Subramaniam

Ans  1. A  
 2. B  
 3. D  
 4. C

Question ID : 2055233717

Status : Not Attempted

Chosen Option : --



Q.13 An assertion (A) and a reason (R) are given below.

**Assertion (A):** Tungsten filament is used for making light bulbs.

**Reason (R):** Tungsten has a high melting point.

**Choose the correct option.**

- A. Both A and R are true and R is the correct explanation of A
- B. Both A and R are true, but R is not the correct explanation of A
- C. A is true, but R is false
- D. A is false, but R is true

Ans  1. C  
 2. A  
 3. B  
 4. D

Question ID : 2055233809

Status : Answered

Chosen Option : 3

Q.14 Esc key in a windows keyboard is not used to

- A. Close a dialog-box
- B. Run a selected command
- C. Cancel a command
- D. Close a selected drop down list

Question ID : 2055233742

Status : Answered

Chosen Option : 2

- Ans  1. A  
 2. C  
 3. D  
 4. B

Q.15 Rs. 3,105 is due to be divided among K, L and M in the proportion of  $2/3 : 3/4 : 1/2$  respectively. How much will L get?

- A. Rs. 1,080  
B. Rs. 810  
C. Rs. 1,215  
D. Rs. 970

- Ans  1. D  
 2. B  
 3. C  
 4. A

Question ID : 2055233757

Status : Answered

Chosen Option : 2

Q.16 If 'due to you' is coded as 'ba da ca', 'he is due' as 'xe ba le' and 'is due to' as 'ba xe ca', then 'you' =?

- A. ba  
B. ca  
C. xe  
D. da

- Ans  1. A  
 2. D  
 3. C  
 4. B

Question ID : 2055233781

Status : Answered

Chosen Option : 2

Q.17 If  $a - b = 5$  and  $a^2 + b^2 = 97$ ,  $ab = ?$

- A. 48  
B. 32  
C. 36  
D. 72

- Ans  1. A  
 2. C  
 3. B  
 4. D

Question ID : 2055233767

Status : Not Attempted

Chosen Option : --

Q.18 If  $CAR = 22$  and  $BUS = 42$ , then  $TRAM = ?$

- A. 62  
B. 52  
C. 72  
D. 42

- Ans  1. A  
 2. C  
 3. B  
 4. D

Question ID : 2055233778

Status : Answered

Chosen Option : 3


Q.19 N invested Rs. 20,000 in a business. Six months later, C joined him with Rs. 10,000. At the end of the year, the profit was Rs. 10,000. What should be the share of N?

- A. Rs. 2,000  
B. Rs. 4,000  
C. Rs. 6,000  
D. Rs. 8,000

Question ID : 2055233764

Status : Answered

Chosen Option : 4



- Ans  1. C  
 2. B  
 3. A  
 4. D

Q.20 If **WORK** = 7935, **ROCK** = 3587 AND **WART** = 1945, which digit stands for T?

- A. Either 9 or 1  
B. Either 8 or 1  
C. Either 4 or 5  
D. Either 1 or 4

- Ans  1. B  
 2. C  
 3. A  
 4. D

Question ID : 2055233779  
Status : Answered  
Chosen Option : 4

Q.21 Yerwada Jail is in

- A. Mumbai  
B. Pune  
C. Goa  
D. Nagpur

- Ans  1. C  
 2. A  
 3. B  
 4. D

Question ID : 2055233728  
Status : Answered  
Chosen Option : 2

Q.22 Which pair is not similar to the other three?

- A. Bare : Dressed  
B. Baffled : Informed  
C. Counterfeit : Fake  
D. Degrade : Exalt

- Ans  1. D  
 2. B  
 3. C  
 4. A

Question ID : 2055233788  
Status : Answered  
Chosen Option : 3

Q.23 A grant for estimated expenditure made by Lok Sabha for part of a financial year pending voting is called

- A. Cut motion  
B. Appropriation  
C. Prorogation  
D. Vote on account

- Ans  1. C  
 2. A  
 3. D  
 4. B

Question ID : 2055233723  
Status : Not Attempted  
Chosen Option : --

Q.24

Question ID : 2055233715  
Status : Answered

\_\_\_\_\_ is the capital of Mizoram.

Chosen Option : 1

- A. Shillong
- B. Aizawl
- C. Kavaratti
- D. Imphal

- Ans
- 1. C
  - 2. A
  - 3. B
  - 4. D

**Q.25** Statements followed by some conclusions are given below.

**Statements:**

1. We don't have the will to punish the guilty unless he is weak and poor.
2. The rich and well-connected get away with every wrong doing.

**Conclusions:**

- I. The rich people are able to escape punishment for wrong doing.
- II. If we will, justice will be same for all.

**Find which of the given conclusions logically follows from the given statements.**

- A. Only conclusion I follows
- B. Only conclusion II follows
- C. Both I and II follow
- D. Neither I nor II follows

- Ans
- 1. C
  - 2. A
  - 3. D
  - 4. B

Question ID : 2055233798

Status : Not Attempted

Chosen Option : --

**Q.26** India shares water border with \_\_\_\_\_ countries.

- A. One
- B. Two
- C. Three
- D. Four

- Ans
- 1. D
  - 2. A
  - 3. C
  - 4. B

Note: For this question, discrepancy is found in question/answer. So, This question is ignored for all candidates.

Question ID : 2055233713

Status : Answered

Chosen Option : 1

**Q.27** Find the LCM of 12, 16, 20 and 24.

- A. 180
- B. 220
- C. 240
- D. 260

- Ans
- 1. D
  - 2. A
  - 3. B

Question ID : 2055233755

Status : Answered

Chosen Option : 4



 4. C

**Q.28** Which of the following does not represent the things that make a 'Smart City', under the smart city campaign?

- A. Affordable housing, especially for the poor.
- B. Adequate water supply.
- C. Free health and education.
- D. Sustainable environment.

**Ans**  1. C

 2. B

 3. A

 4. D

Question ID : 2055233708

Status : Answered

Chosen Option : 3

**Q.29** A box of 20 items was bought for Rs. 6,400 after a discount of 20%. Find the cost of each item.

- A. Rs. 300
- B. Rs. 350
- C. Rs. 400
- D. Rs. 450

**Ans**  1. B

 2. A

 3. D

 4. C

Question ID : 2055233766

Status : Answered

Chosen Option : 1

**Q.30 Error : Blunder : : \_\_\_\_\_ : Excellent**

- A. Acceptable
- B. Excel
- C. Unsatisfactory
- D. Splendid

**Ans**  1. A

 2. B

 3. C

 4. D

Question ID : 2055233787

Status : Answered

Chosen Option : 4

**Q.31** In human body, vertebrae are part of \_\_\_\_\_.

- A. Intestine
- B. Liver
- C. Spinal cord
- D. Brain

**Ans**  1. A

 2. D

 3. B

 4. C

Question ID : 2055233739

Status : Not Attempted

Chosen Option : --

**Q.32**

Question ID : 2055233785

Status : Answered

Chosen Option : 1

Find the missing (?) in the series.

**AB, CE, FI, ?, OT**

- A. JM
- B. GK
- C. HO
- D. JN

Ans  1. D  
 2. A  
 3. C  
 4. B

**Q.33** \_\_\_\_\_ are twin prime numbers.

- A. (4, 9)
- B. (2, 3)
- C. (4, 6)
- D. (3, 5)

Ans  1. B  
 2. C  
 3. A  
 4. D

Question ID : 2055233751

Status : Answered

Chosen Option : 4

**Q.34** X does 25% of a work in 20 days. Y joins X and they together finish the remaining work in 15 days. Y alone can do the whole work in \_\_\_ days.

- A. 30 days
- B.  $25\frac{1}{2}$  days
- C.  $26\frac{2}{3}$  days
- D.  $26\frac{1}{3}$  days

Ans  1. A  
 2. D  
 3. B  
 4. C

Question ID : 2055233759

Status : Answered

Chosen Option : 3

**Q.35**  $(4x - 7)^2 = ?$

- A.  $4x^2 - 56x + 49$
- B.  $4x^2 - 14x + 49$
- C.  $16x^2 + 14x + 49$
- D.  $16x^2 - 56x + 49$

Ans  1. B  
 2. A  
 3. C  
 4. D

Question ID : 2055233769

Status : Not Attempted

Chosen Option : --

**Q.36**

Question ID : 2055233786

Status : Answered

Chosen Option : 3



**Fire : Burn :: Water : ?**

- A. River
- B. H<sub>2</sub>O
- C. Flood
- D. Dam

Ans  1. D  
 2. B  
 3. A  
 4. C

**Q.37** \_\_\_\_\_ is not related to gases.

- A. Boyle's Law
- B. Joule's Law
- C. Avogadro's Law
- D. Charles's Law

Ans  1. D  
 2. A  
 3. C  
 4. B

Question ID : 2055233737

Status : Answered

Chosen Option : 1

**Q.38** The maturity value of a certain sum after two years at 20% p.a. interest compounded annually is Rs.14,400/-. Find the principal amount.

- A. Rs. 9,000
- B. Rs. 9,500
- C. Rs. 10,000
- D. Rs. 10,500

Ans  1. A  
 2. C  
 3. D  
 4. B

Question ID : 2055233763

Status : Answered

Chosen Option : 1

**Q.39** The smallest of the fractions among  $\frac{5}{8}$ ,  $\frac{3}{4}$ ,  $\frac{13}{16}$ ,  $\frac{7}{12}$  is \_\_\_\_\_.

- A.  $\frac{5}{8}$
- B.  $\frac{3}{4}$
- C.  $\frac{13}{16}$
- D.  $\frac{7}{12}$

Ans  1. C  
 2. A  
 3. B  
 4. D

Question ID : 2055233752

Status : Answered

Chosen Option : 2

**Q.40** If angles M and N measure 60° and 30° respectively,  $(\sin M) \times (\cot N) = ?$

- A.  $\frac{1}{2}$
- B.  $\frac{\sqrt{3}}{2}$
- C.  $\frac{3}{2}$
- D. 0

Ans  1. D  
 2. B

Question ID : 2055233773

Status : Not Attempted

Chosen Option : --

 3. A

 4. C

Q.41 The official journal of the Committee on Space Research (COSPAR) is

- A. Astrophysics and Space
- B. Space Science Reviews
- C. Advances in Space Research
- D. Cosmic Research

Question ID : 2055233745

Status : **Not Attempted**

Chosen Option : --

Ans  1. A

 2. B

 3. D

 4. C

Q.42 The diagonals of 2 squares M & N are in the ratio 2:1. The ratio of their areas is

- A. 1:2
- B. 2:1
- C. 1:4
- D. 4:1

Question ID : 2055233771

Status : **Not Attempted**

Chosen Option : --

Ans  1. C

 2. A

 3. D

 4. B

Q.43 Which of the following is not a renewable source of energy?

- A. Solar
- B. Wind
- C. Ocean waves
- D. Coal

Question ID : 2055233722

Status : **Answered**

Chosen Option : 3

Ans  1. C

 2. A

 3. D

 4. B

Q.44 A serial port can

- A. only transfer information from a hard drive.
- B. only transfer information to a hard drive.
- C. transfer information both to and from a hard drive.
- D. neither transfer information from nor to a hard drive.

Question ID : 2055233740

Status : **Answered**

Chosen Option : 1

Ans  1. C

 2. A

 3. D

 4. B

Q.45 Find the greatest number which on dividing 391 and 318 leaves remainders 7 and 6 respectively.

- A. 20
- B. 23
- C. 24
- D. 32

Question ID : 2055233754

Status : **Answered**

Chosen Option : 1

Ans  1. C

 2. B

 3. A

 4. D

**Q.46** Find the odd one out in relation to using ATM and net-banking facilities.

- A. Don't share your ATM card.
- B. Don't share your PIN.
- C. Don't change your PIN at regular intervals.
- D. Don't share your login Id and password.

Question ID : 2055233741

Status : Answered

Chosen Option : 3

Ans  1. D

 2. A

 3. C

 4. B

**Q.47** Read the following paragraph and answer the question based on it.

The ongoing progress in technologies continue to throw up fresh risks related to data privacy and security. There can be no true progress in technologies without such risks. The IT industries need to be equipped to handle such risks.

Which option relates best to the above statement?

- A. True progress in technology involves some risks too.
- B. IT industries are not equipped to handle such threats.
- C. Progress must be free of risks and threats.
- D. Data privacy and security is not important to the IT industries.

Question ID : 2055233810

Status : Not Attempted and Marked For Review

Chosen Option : --

Ans  1. A

 2. D

 3. C

 4. B

**Q.48** The instrument used to examine a person's digestive tract is called \_\_\_\_\_.

- A. Oscilloscope
- B. Microscope
- C. Endoscope
- D. Radiograph

Question ID : 2055233736

Status : Answered

Chosen Option : 4

Ans  1. A

 2. D

 3. B

 4. C

**Q.49** \_\_\_\_\_ is not an example of refraction of light.

- A. Twinkling effect of stars
- B. Mirages
- C. Lateral inversion
- D. Bending of light while passing through a medium

Question ID : 2055233729

Status : Answered

Chosen Option : 1

Ans  1. D

 2. C

 3. A

 4. B

**Q.50** X and Y are parents of four married sons, one married daughter and one unmarried daughter living in a joint family. Two of the sons have two daughters and one son each. The other two have two sons and one daughter each. How many male members are there in the family?

- A. 9
- B. 10
- C. 11
- D. 12

Question ID : 2055233790

Status : Answered

Chosen Option : 2

- Ans  1. B  
 2. D  
 3. A  
 4. C

Q.51 The cost of 15 kg of groundnuts and 4 kg of cashews is Rs. 7,000. The cost of 10 kg of cashews is equal to 25 kg of groundnuts. Find the cost of groundnut per kg.

- A. Rs. 320  
B. Rs. 700  
C. Rs. 540  
D. Rs. 280

- Ans  1. A  
 2. B  
 3. D  
 4. C

Question ID : 2055233748  
Status : Not Attempted  
Chosen Option : --

Q.52 If '+' means 'brother of', 'x' means 'mother of', '-' means 'father of' and '÷' means 'son of', then which of the following means V is the nephew of W?

- A.  $V + U - W$   
B.  $V \div U + W$   
C.  $V \times W - U$   
D.  $V \div W - U$

- Ans  1. B  
 2. A  
 3. C  
 4. D

Question ID : 2055233792  
Status : Answered  
Chosen Option : 1

Q.53 The average weight of 25 bags is 55 kg. The weight of one bag was misread as 65 instead of 56. Find the correct mean value.

- A. 55.25  
B. 55.36  
C. 54.64  
D. 55.65

- Ans  1. A  
 2. C  
 3. B  
 4. D

Question ID : 2055233776  
Status : Answered  
Chosen Option : 3

Q.54 If  $w : 0.80 :: 9 : 6$ ,  $w = ?$

- A. 2.5  
B. 1.1  
C. 3.3  
D. 1.2

- Ans  1. B  
 2. C  
 3. A  
 4. D


Question ID : 2055233756  
Status : Not Attempted  
Chosen Option : --

Q.55 Which Indian freedom fighter unfurled the flag known as Saptarishi at Stuttgart in Germany in 1907?

- A. Madam Cama  
B. Mahatma Gandhi  
C. Dadabhai Naoroji  
D. Lokmanya Tilak

- Ans  1. D  
 2. B

Question ID : 2055233716  
Status : Answered  
Chosen Option : 4





✓ 3. A

✗ 4. C

Q.56 Which one is not the key objective of the Jan Aushadhi Campaign?

- A. Make quality the hallmark of medicine availability.
- B. Redefine the unit cost of treatment per person.
- C. Develop a model which can be replicated only in India.
- D. To be adopted by the Private Sector also.

Question ID : 2055233710

Status : Not Attempted

Chosen Option : --

Ans ✗ 1. B

✓ 2. C

✗ 3. D

✗ 4. A

Q.57 \_\_\_\_\_ was the Indian captain for 2016 ICC Women's World Cup Twenty20 cricket match.

- A. Rajeshwari Gayakwad
- B. Harmanpreet Kaur
- C. Deepti Sharma
- D. Mithali Raj

Question ID : 2055233719

Status : Not Attempted

Chosen Option : --

Ans ✗ 1. C

✗ 2. B

✓ 3. D

✗ 4. A

Comprehension:

Consider the following information and answer the questions based on it.

Out of 60 people in a colony, 10 speak only Bengali, 5 speak only Assamese, 10 speak both Hindi and Odia, 12 speak both Marathi and Hindi, 13 speak English, Tamil and Marathi, 5 speak both Assamese and Hindi and the remaining speak both Bengali and Hindi.

SubQuestion No : 58

Q.5<sub>8</sub> In all, how many people speak Hindi?

- A. 22
- B. 27
- C. 32
- D. 45

Question ID : 2055233801

Status : Answered

Chosen Option : 3

Ans ✗ 1. D

✗ 2. A

✗ 3. B

✓ 4. C

Comprehension:

Consider the following information and answer the questions based on it.

Out of 60 people in a colony, 10 speak only Bengali, 5 speak only Assamese, 10 speak both Hindi and Odia, 12 speak both Marathi and Hindi, 13 speak English, Tamil and Marathi, 5 speak both Assamese and Hindi and the remaining speak both Bengali and Hindi.

SubQuestion No : 59

Q.5<sub>9</sub>

Question ID : 2055233803

Status : Answered

Chosen Option : 1

How many people speak more than one language?

- A. 15
- B. 45
- C. 50
- D. 55

Ans  1. B

2. A

3. C

4. D

**Comprehension:**

**Consider the following information and answer the questions based on it.**

Out of 60 people in a colony, 10 speak only Bengali, 5 speak only Assamese, 10 speak both Hindi and Odia, 12 speak both Marathi and Hindi, 13 speak English, Tamil and Marathi, 5 speak both Assamese and Hindi and the remaining speak both Bengali and Hindi.

**SubQuestion No : 60**

**Q.6** The ratio of people who speak Bengali to those who speak Marathi is

- A. 15/32
- B. 1/2
- C. 3/4
- D. 3/5

Ans  1. D

2. B

3. A

4. C

Question ID : 2055233802

Status : Answered

Chosen Option : 1

**Q.61** In a farm, there are goats and peacocks. If the number of heads are 60 and the number of feet are 170, then the number of goats = ?

- A. 18
- B. 20
- C. 23
- D. 25

Ans  1. C

2. B

3. D

4. A

Question ID : 2055233768

Status : Not Attempted

Chosen Option : --

**Q.62** A train runs at 80 kmph for the first 40 km and the next 30 km at 60 kmph. Find the average speed.

- A. 62 kmph
- B. 64 kmph
- C. 65 kmph
- D. 70 kmph

Ans  1. A

2. B

3. D

4. C

Question ID : 2055233761

Status : Not Attempted

Chosen Option : --

**Q.63**

Question ID : 2055233735

Status : Answered

Chosen Option : 3

Objects float on water based on \_\_\_\_\_.

- A. Newton's third law of motion
- B. Hooke's law
- C. Faraday's law
- D. Archimedes principle

- Ans
-  1. B
  -  2. C
  -  3. D
  -  4. A

**Comprehension:**


E, F, G, H and K visit a hospital on week days. Each one of them is a physician, surgeon, dentist, cardiologist, nephrologist but in the random order. Each visits the hospital only one day in the week and attends to their profession only. Consider the following information and answer questions based on it.

1. The physician visits office every Monday.
2. E is the cardiologist who comes neither on Tuesday nor Thursday.
3. K is a surgeon and G is not the physician.
4. The person who visits the office on Thursday is not a nephrologist.
5. H works on a Tuesday and K works on the following day.

SubQuestion No : 64

Q.6  
4 Who is the nephrologist?

- A. E
- B. F
- C. G
- D. H

- Ans
-  1. B
  -  2. A
  -  3. D
  -  4. C

Question ID : 2055233795

Status : Answered

Chosen Option : 2

**Comprehension:**

E, F, G, H and K visit a hospital on week days. Each one of them is a physician, surgeon, dentist, cardiologist, nephrologist but in the random order. Each visits the hospital only one day in the week and attends to their profession only. Consider the following information and answer questions based on it.

1. The physician visits office every Monday.
2. E is the cardiologist who comes neither on Tuesday nor Thursday.
3. K is a surgeon and G is not the physician.
4. The person who visits the office on Thursday is not a nephrologist.
5. H works on a Tuesday and K works on the following day.

SubQuestion No : 65

Q.6  
5 Who is the physician?

- A. E
- B. F
- C. G
- D. H

Question ID : 2055233796

Status : Answered

Chosen Option : 1

Ans  1. B

 2. A

 3. D

 4. C

**Comprehension:**

E, F, G, H and K visit a hospital on week days. Each one of them is a physician, surgeon, dentist, cardiologist, nephrologist but in the random order. Each visits the hospital only one day in the week and attends to their profession only. Consider the following information and answer questions based on it.

1. The physician visits office every Monday.
2. E is the cardiologist who comes neither on Tuesday nor Thursday.
3. K is a surgeon and G is not the physician.
4. The person who visits the office on Thursday is not a nephrologist.
5. H works on a Tuesday and K works on the following day.

SubQuestion No : 66

Q.6<sub>6</sub> The cardiologist visits the office on

- A. Tuesday
- B. Wednesday
- C. Thursday
- D. Friday

Question ID : 2055233794

Status : **Answered**

Chosen Option : 2

Ans  1. C

 2. A

 3. D

 4. B

Q.67 A tap can fill a tank in 50 minutes. If the tank has a leakage which alone is capable of emptying the tank in  $2\frac{1}{2}$  hours, the tank will now be filled in \_\_\_\_\_.

- A. 1 hour
- B. 1 hour 15 mins
- C. 1 hour 25 mins
- D. 1 hour 30 mins

Ans  1. D

 2. B

 3. C

 4. A

Question ID : 2055233758

Status : **Not Attempted**

Chosen Option : --

Q.68 How many full member teams were in ICC Cricket World Cup T20 - 2016 other than the host country?

- A. Seven
- B. Eight
- C. Nine
- D. Ten

Ans  1. C

 2. B

 3. D

 4. A

Question ID : 2055233718

Status : **Answered**

Chosen Option : 2

Q.69

Question ID : 2055233780

Status : **Answered**

Chosen Option : 1



**BROWN : BNORW :: SOUND : ?**

- A. SNOUD
- B. OSUDN
- C. SUDNO
- D. DNOSU

Ans  1. A  
 2. C  
 3. B  
 4. D

Q.70 \_\_\_\_\_ is known as a disease mostly caused by occupational health hazards.

- A. Syphilis
- B. Cirrhosis
- C. Silicosis
- D. Parkinson's

Ans  1. B  
 2. C  
 3. A  
 4. D

Question ID : 2055233734

Status : Not Attempted

Chosen Option : --

Q.71 The speed of light in vacuum is estimated as \_\_\_\_\_ meters / second.

- A.  $3.00 \times 10^8$
- B.  $3.10 \times 10^8$
- C.  $3.12 \times 10^8$
- D.  $3.15 \times 10^8$

Ans  1. C  
 2. A  
 3. B  
 4. D

Question ID : 2055233730

Status : Not Attempted

Chosen Option : --

Q.72 Find the missing (?) in the series.

**3, 5, 9, 11, ?, 33, 65.....**

- A. 23
- B. 21
- C. 17
- D. 15

Ans  1. D  
 2. B  
 3. A  
 4. C

Question ID : 2055233784

Status : Not Attempted

Chosen Option : --

Q.73  $(0.2 \times 0.2 \times 0.2) (0.06 \times 0.06 \times 0.06) \div (0.12 \times 0.12 \times 0.12) = ?$

- A. 0.008
- B. 0.001
- C. 0.002
- D. 0.006

Question ID : 2055233753

Status : Answered

Chosen Option : 3

- Ans  1. D  
 2. A  
 3. B  
 4. C

Q.74 Salarjung Museum is located in \_\_\_\_\_.

- A. Kolkata
- B. Ahmadabad
- C. Delhi
- D. Hyderabad

Question ID : 2055233727  
Status : Answered  
Chosen Option : 3

- Ans  1. C  
 2. B  
 3. D  
 4. A

Q.75 Bollywood actress Priyanka Chopra won the Favourite Actress award at the People's Choice awards 2016, for her leading role in the American TV thriller series \_\_\_\_\_.

- A. Secrets and Lies
- B. The Middle
- C. Quantico
- D. Mistresses

- Ans  1. A  
 2. D  
 3. B  
 4. C

Question ID : 2055233726  
Status : Not Attempted  
Chosen Option : --

Q.76 Find the range of the data 9, 5, 9, 3, 4, 7, 8, 4, 8, 9, 5, 9.

- A. 3
- B. 5
- C. 6
- D. 4

- Ans  1. B  
 2. C  
 3. A  
 4. D

Question ID : 2055233775  
Status : Not Attempted  
Chosen Option : --

Q.77 Name the first civilian president of Myanmar.

- A. Htin Kyaw
- B. Myint Swe
- C. Henry Van Thio
- D. Thein Sein

- Ans  1. A  
 2. C  
 3. D  
 4. B

Question ID : 2055233725  
Status : Answered  
Chosen Option : 4

Q.78 \_\_\_\_\_ is used in yellow lamp street lights.

- A. Neon
- B. Nitrogen
- C. Phosphorous
- D. Sodium

Ans  1. B  
 2. A  
 3. C  
 4. D

Question ID : 2055233731  
Status : **Answered**  
Chosen Option : 4

Q.79 Curd contains mainly \_\_\_\_\_ acid.

- A. Benzoic
- B. Fumaric
- C. Lactic
- D. Malic

Ans  1. A  
 2. D  
 3. C  
 4. B

Question ID : 2055233732  
Status : **Not Attempted**  
Chosen Option : --

Q.80 The cost price of 5 kg of wheat and 10 kg of lentil were at Rs. 70 and Rs. 80 per kg respectively. On selling, he gained 10% on wheat and 20% on sugar. What was the total sale price?

- A. Rs. 1,375
- B. Rs. 1,345
- C. Rs. 1,400
- D. Rs. 1,350


Ans 1. D  
2. C  
3. B  
4. A

Note: For this question, discrepancy is found in question/answer. So, This question is ignored for all candidates.

Question ID : 2055233765  
Status : **Not Attempted**  
Chosen Option : --

Q.81 The official language of Goa is \_\_\_\_\_.

- A. English
- B. Portuguese
- C. Konkani
- D. Marathi

Ans  1. A  
 2. D  
 3. B  
 4. C

Question ID : 2055233714  
Status : **Answered**  
Chosen Option : 1

Q.82 M borrowed some money for 1 year at certain simple interest. But the interest rate was increased to 2% which amounted to Rs. 120. Find the principal amount.

- A. Rs. 4,000
- B. Rs. 5,000
- C. Rs. 6,000
- D. Rs. 7,000

Ans  1. C

Question ID : 2055233762  
Status : **Not Attempted**  
Chosen Option : --



2. D

3. B

4. A

**Q.83** If the radius ( $r$ ) of a circle is increased by 'x' units, what is the number of units by which the circumference of the circle is increased?

- A.  $\pi$
- B.  $2\pi$
- C.  $2\pi r$
- D.  $2\pi x$

**Ans**  1. D

2. C

3. B

4. A

Question ID : 2055233770

Status : Not Attempted

Chosen Option : --

**Q.84** ISS stands for

- A. International Space Station
- B. International Space System
- C. Indian space Studies
- D. Inter-Space Spectroscopy

**Ans**  1. B

2. D

3. A

4. C

Question ID : 2055233744

Status : Answered

Chosen Option : 3

**Q.85** \_\_\_\_\_ is used in periscope.

- A. Plane mirror
- B. Prism
- C. Concave lens
- D. Convex lens

**Ans**  1. B

2. D

3. C

4. A

Question ID : 2055233747

Status : Answered

Chosen Option : 2

**Q.86** Statement followed by some conclusions are given below.

**Statement:**

The search team believes that the plane debris recovered in 2016, near Mozambique was highly likely to be from MH370-Malaysian aircraft which disappeared after take-off in 2014.

**Conclusions:**

- I. The debris found near Mozambique definitely belonged to MH370 aircraft.
- II. The search team is mistaken about the findings.

**Find which of the given conclusions logically follows from the given statements.**

- A. Only conclusion I follows
- B. Only conclusion II follows
- C. Both I and II follow
- D. Neither I nor II follows

**Ans**  1. A

2. B

3. C

4. D

Question ID : 2055233797

Status : Not Attempted

Chosen Option : --



Q.87 Most of the \_\_\_\_\_ are formed by sand and silt deposited by rivers and sea waves.

- A. Laterite and lateritic soils
- B. Alluvial soils
- C. Peaty and Marshy soils
- D. Saline and alkaline soils

Ans  1. D  
 2. A  
 3. C  
 4. B



Question ID : 2055233711

Status : Not Attempted

Chosen Option : --

Q.88 X is the brother of Y. Z is the wife of Y. F is the father of X. E is son of Z. How is E related to F?

- A. Grandson
- B. Nephew
- C. Brother
- D. Son

Ans  1. C  
 2. B  
 3. D  
 4. A


Question ID : 2055233791

Status : Not Attempted

Chosen Option : --

Q.89 If LIGER is coded as GIRLE, then TEPAL will be coded as

- A. PETAL
- B. PLATE
- C. PELTA
- D. PLEAT

Ans  1. C  
 2. A  
 3. B  
 4. D


Question ID : 2055233783

Status : Not Attempted

Chosen Option : --

Q.90 If  $\sin\theta = 15/17$ , then  $\cot\theta = ?$

- A. 8/17
- B. 15/8
- C. 8/15
- D. 17/8

Ans  1. C  
 2. B  
 3. D  
 4. A



Question ID : 2055233774

Status : Not Attempted

Chosen Option : --

Q.91 There are 3 numbers. The 2<sup>nd</sup> number is 3 times the 1<sup>st</sup>. The 3<sup>rd</sup> is twice the 2<sup>nd</sup>. If their average is 70, find the smallest of the 3 numbers.

- A. 18
- B. 19
- C. 20
- D. 21

Ans  1. B  
 2. A  
 3. D  
 4. C

Question ID : 2055233777

Status : Not Attempted

Chosen Option : --

Q.92 The maximum interval between two sessions of state assembly can be \_\_\_\_\_.

- A. 3 months
- B. 6 months
- C. 9 months
- D. 12 months

Ans  1. B  
 2. A  
 3. D  
 4. C

Question ID : 2055233724  
Status : Not Attempted  
Chosen Option : --

Q.93 If A means '−', C means '+', B means '÷', E means '×' then the value of

$$6 C 78 B 3 A 4 E 6 = ?$$

- A. 4
- B. 6
- C. 8
- D. 10

Ans  1. A  
 2. D  
 3. B  
 4. C

Question ID : 2055233782  
Status : Not Attempted  
Chosen Option : --

Q.94 The distance between the Sun and Earth is estimated to be

- A.  $15.96 \times 10^7$  km
- B.  $14.96 \times 10^7$  km
- C.  $12.96 \times 10^7$  km
- D.  $11.96 \times 10^7$  km

Ans  1. C  
 2. A  
 3. D  
 4. B

Question ID : 2055233743  
Status : Not Attempted  
Chosen Option : --

Q.95 Which of the following is not true in regard to exchange rate of Indian Rupee?

- A. Mainly, its price is in terms of US Dollar.
- B. It is decided by Reserve Bank of India.
- C. It is published by Reserve Bank of India.
- D. It is decided by market forces.

Ans  1. D  
 2. C  
 3. B  
 4. A

Question ID : 2055233709  
Status : Not Attempted  
Chosen Option : --

Q.96 The age difference between M and R is the same as that between P and M. M is elder to P but younger to R. If the sum of the ages of R and P is 66, how old is M?

- A. 28
- B. 30
- C. 33
- D. 36

Ans  1. B  
 2. A  
 3. C  
 4. D

Question ID : 2055233750  
Status : Not Attempted  
Chosen Option : --

Q.97 Rearrange the jumbled letters to make a meaningful word and then select the one which is different.

- A. OLEMN
- B. PEALP
- C. OGREAN
- D. OTTOPA

Ans  1. A  
 2. D  
 3. B  
 4. C





Question ID : 2055233799

Status : Not Attempted

Chosen Option : --

Q.98 Which one of the following names is associated with golf?

- A. Gurmeet Singh
- B. H.S. Prannoy
- C. S.S.P. Chawrasia
- D. Chetan Anand

Ans  1. D  
 2. C  
 3. A  
 4. B



Question ID : 2055233720

Status : Not Attempted

Chosen Option : --

Q.99 A man starts walking at 6.30a.m. and wants to cover a distance of 30km. His initial speed is 6 kmph and after covering three-fifth distance, he reduces his speed by 2 kmph. At what time will he complete his walk?

- A. 11.00 am
- B. 12.30 pm
- C. 11.30 pm
- D. 12.00 pm

Ans  1. D  
 2. A  
 3. B  
 4. C




Question ID : 2055233760

Status : Not Attempted

Chosen Option : --

Q.10 Rajaji National Park is in \_\_\_\_\_.

- A. Tamil Nadu
- B. Uttarakhand
- C. Karnataka
- D. Kerala

Ans  1. B  
 2. C  
 3. A  
 4. D

Question ID : 2055233721

Status : Not Attempted

Chosen Option : --

