

# JEE Main 2019

## Afternoon Session – Slot 2

### January 10 – Paper 1

Actual Question Paper with Answer Key

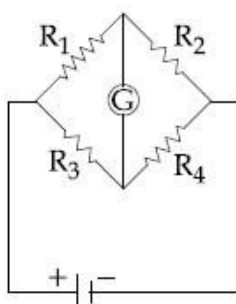


# JEE Main 2019 Paper 1 Question Paper & Answer Key – January 10, Shift 2

## Section : Physics

Q.1 The Wheatstone bridge shown in Fig. here, gets balanced when the carbon resistor used as  $R_1$  has the colour code (Orange, Red, Brown). The resistors  $R_2$  and  $R_4$  are  $80\ \Omega$  and  $40\ \Omega$ , respectively.

Assuming that the colour code for the carbon resistors gives their accurate values, the colour code for the carbon resistor, used as  $R_3$ , would be :



Options<sub>1</sub>. Brown, Blue, Brown

2. Brown, Blue, Black
3. Red, Green, Brown
4. Grey, Black, Brown

Q.2 Consider the nuclear fission



Given that the binding energy/nucleon of  $\text{Ne}^{20}$ ,  $\text{He}^4$  and  $\text{C}^{12}$  are, respectively,  $8.03\ \text{MeV}$ ,  $7.07\ \text{MeV}$  and  $7.86\ \text{MeV}$ , identify the correct statement :

Options<sub>1</sub>. energy of  $12.4\ \text{MeV}$  will be supplied

2.  $8.3\ \text{MeV}$  energy will be released
3. energy of  $3.6\ \text{MeV}$  will be released

4. energy of 11.9 MeV has to be supplied

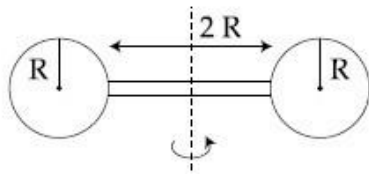
**Q.3** A hoop and a solid cylinder of same mass and radius are made of a permanent magnetic material with their magnetic moment parallel to their respective axes. But the magnetic moment of hoop is twice of solid cylinder. They are placed in a uniform magnetic field in such a manner that their magnetic moments make a small angle with the field. If the oscillation periods of hoop and cylinder are  $T_h$  and  $T_c$  respectively, then :

- Options**
1.  $T_h = T_c$
  2.  $T_h = 2T_c$
  3.  $T_h = 1.5T_c$
  4.  $T_h = 0.5T_c$

**Q.4** An unknown metal of mass 192 g heated to a temperature of  $100^\circ\text{C}$  was immersed into a brass calorimeter of mass 128 g containing 240 g of water at a temperature of  $8.4^\circ\text{C}$ . Calculate the specific heat of the unknown metal if water temperature stabilizes at  $21.5^\circ\text{C}$ . (Specific heat of brass is  $394 \text{ J kg}^{-1} \text{ K}^{-1}$ )

- Options**
1.  $458 \text{ J kg}^{-1} \text{ K}^{-1}$
  2.  $1232 \text{ J kg}^{-1} \text{ K}^{-1}$
  3.  $916 \text{ J kg}^{-1} \text{ K}^{-1}$
  4.  $654 \text{ J kg}^{-1} \text{ K}^{-1}$

- Q.5 Two identical spherical balls of mass  $M$  and radius  $R$  each are stuck on two ends of a rod of length  $2R$  and mass  $M$  (see figure). The moment of inertia of the system about the axis passing perpendicularly through the centre of the rod is :



- Options
1.  $\frac{137}{15} MR^2$
  2.  $\frac{17}{15} MR^2$
  3.  $\frac{209}{15} MR^2$
  4.  $\frac{152}{15} MR^2$

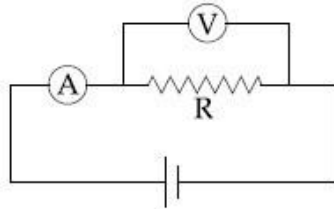
- Q.6 The self induced emf of a coil is 25 volts. When the current in it is changed at uniform rate from 10 A to 25 A in 1 s, the change in the energy of the inductance is :

- Options
1. 740 J
  2. 437.5 J
  3. 540 J
  4. 637.5 J

Q.7

The actual value of resistance  $R$ , shown in the figure is  $30\ \Omega$ . This is measured in an experiment as shown using the standard

formula  $R = \frac{V}{I}$ , where  $V$  and  $I$  are the readings of the voltmeter and ammeter, respectively. If the measured value of  $R$  is 5% less, then the internal resistance of the voltmeter is :



- Options<sub>1</sub>.
1.  $600\ \Omega$
  2.  $570\ \Omega$
  3.  $35\ \Omega$
  4.  $350\ \Omega$

Q.8 At some location on earth the horizontal component of earth's magnetic field is  $18 \times 10^{-6}\ \text{T}$ . At this location, magnetic needle of length  $0.12\ \text{m}$  and pole strength  $1.8\ \text{Am}$  is suspended from its mid-point using a thread, it makes  $45^\circ$  angle with horizontal in equilibrium. To keep this needle horizontal, the vertical force that should be applied at one of its ends is :

- Options<sub>1</sub>.
1.  $3.6 \times 10^{-5}\ \text{N}$
  2.  $1.8 \times 10^{-5}\ \text{N}$
  3.  $1.3 \times 10^{-5}\ \text{N}$
  4.  $6.5 \times 10^{-5}\ \text{N}$

Q.9

Two vectors  $\vec{A}$  and  $\vec{B}$  have equal magnitudes. The magnitude of  $(\vec{A} + \vec{B})$  is 'n' times the magnitude of  $(\vec{A} - \vec{B})$ . The angle between  $\vec{A}$  and  $\vec{B}$  is :

Options

1.  $\cos^{-1} \left[ \frac{n^2 - 1}{n^2 + 1} \right]$

2.  $\cos^{-1} \left[ \frac{n - 1}{n + 1} \right]$

3.  $\sin^{-1} \left[ \frac{n^2 - 1}{n^2 + 1} \right]$

4.  $\sin^{-1} \left[ \frac{n - 1}{n + 1} \right]$

Q.10 A metal plate of area  $1 \times 10^{-4} \text{ m}^2$  is illuminated by a radiation of intensity  $16 \text{ mW/m}^2$ . The work function of the metal is  $5 \text{ eV}$ . The energy of the incident photons is  $10 \text{ eV}$  and only  $10\%$  of it produces photo electrons. The number of emitted photo electrons per second and their maximum energy, respectively, will be :  
[ $1 \text{ eV} = 1.6 \times 10^{-19} \text{ J}$ ]

Options

1.  $10^{14}$  and  $10 \text{ eV}$

2.  $10^{12}$  and  $5 \text{ eV}$

3.  $10^{11}$  and  $5 \text{ eV}$

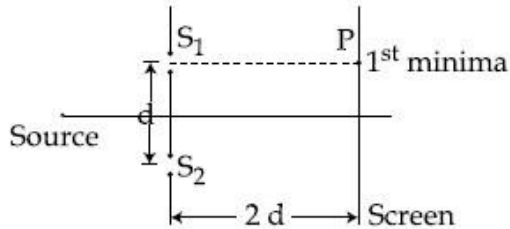
4.  $10^{10}$  and  $5 \text{ eV}$

Q.11

A particle which is experiencing a force, given by  $\vec{F} = 3\vec{i} - 12\vec{j}$ , undergoes a displacement of  $\vec{d} = 4\vec{i}$ . If the particle had a kinetic energy of 3 J at the beginning of the displacement, what is its kinetic energy at the end of the displacement?

- Options
1. 9 J
  2. 12 J
  3. 10 J
  4. 15 J

Q.12 Consider a Young's double slit experiment as shown in figure. What should be the slit separation  $d$  in terms of wavelength  $\lambda$  such that the first minima occurs directly in front of the slit ( $S_1$ )?



- Options
1.  $\frac{\lambda}{2(\sqrt{5} - 2)}$
  2.  $\frac{\lambda}{(\sqrt{5} - 2)}$
  3.  $\frac{\lambda}{2(5 - \sqrt{2})}$
  4.  $\frac{\lambda}{(5 - \sqrt{2})}$

The eye can be regarded as a single refracting surface. The radius of curvature of this surface is equal to that of cornea (7.8 mm). This surface separates two media of refractive indices 1 and 1.34. Calculate the distance from the refracting surface at which a parallel beam of light will come to focus.

- Options
- 1 cm
  - 2 cm
  - 4.0 cm
  - 3.1 cm

Q.14 A current of 2 mA was passed through an unknown resistor which dissipated a power of 4.4 W. Dissipated power when an ideal power supply of 11 V is connected across it is :

- Options
1.  $11 \times 10^{-5}$  W
  2.  $11 \times 10^{-3}$  W
  3.  $11 \times 10^{-4}$  W
  4.  $11 \times 10^5$  W

Q.15 The diameter and height of a cylinder are measured by a meter scale to be  $12.6 \pm 0.1$  cm and  $34.2 \pm 0.1$  cm, respectively. What will be the value of its volume in appropriate significant figures ?

- Options
1.  $4264 \pm 81$  cm<sup>3</sup>
  2.  $4264.4 \pm 81.0$  cm<sup>3</sup>
  3.  $4260 \pm 80$  cm<sup>3</sup>
  4.  $4300 \pm 80$  cm<sup>3</sup>



Q.16 Four equal point charges  $Q$  each are placed in the  $xy$  plane at  $(0, 2)$ ,  $(4, 2)$ ,  $(4, -2)$  and  $(0, -2)$ . The work required to put a fifth charge  $Q$  at the origin of the coordinate system will be :

Options

1.  $\frac{Q^2}{4\pi\epsilon_0} \left(1 + \frac{1}{\sqrt{3}}\right)$

2.  $\frac{Q^2}{4\pi\epsilon_0} \left(1 + \frac{1}{\sqrt{5}}\right)$

3.  $\frac{Q^2}{2\sqrt{2}\pi\epsilon_0}$

4.  $\frac{Q^2}{4\pi\epsilon_0}$

Q.17 The modulation frequency of an AM radio station is 250 kHz, which is 10% of the carrier wave. If another AM station approaches you for license what broadcast frequency will you allot ?

Options

1. 2750 kHz

2. 2900 kHz

3. 2250 kHz

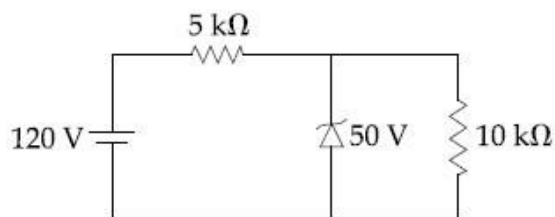
4. 2000 kHz

Q.18 A closed organ pipe has a fundamental frequency of 1.5 kHz. The number of overtones that can be distinctly heard by a person with this organ pipe will be : (Assume that the highest frequency a person can hear is 20,000 Hz)

Options 1. 6

2. 4
3. 7
4. 5

Q.19 For the circuit shown below, the current through the Zener diode is :



- Options
1. 9 mA
  2. 5 mA
  3. Zero
  4. 14 mA

Q.20 The electric field of a plane polarized electromagnetic wave in free space at time  $t=0$  is given by an expression

$$\vec{E}(x, y) = 10 \hat{j} \cos [(6x + 8z)]$$

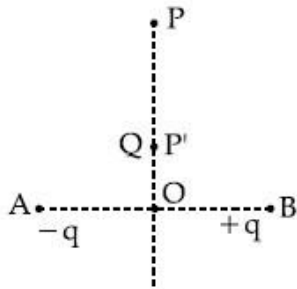
The magnetic field  $\vec{B}(x, z, t)$  is given by : (c is the velocity of light)

- Options
1.  $\frac{1}{c} (6\hat{k} + 8\hat{i}) \cos [(6x - 8z + 10ct)]$
  2.  $\frac{1}{c} (6\hat{k} - 8\hat{i}) \cos [(6x + 8z - 10ct)]$
  3.  $\frac{1}{c} (6\hat{k} + 8\hat{i}) \cos [(6x + 8z - 10ct)]$
  4.  $\frac{1}{c} (6\hat{k} - 8\hat{i}) \cos [(6x + 8z + 10ct)]$

Q.21 Charges  $-q$  and  $+q$  located at A and B, respectively, constitute an electric dipole. Distance  $AB=2a$ , O is the mid point of the dipole and OP is perpendicular to AB. A charge Q is placed at P where  $OP=y$  and  $y \gg 2a$ . The charge Q experiences an electrostatic force F. If Q is now moved along the equatorial line to P' such that

$OP' = \left(\frac{y}{3}\right)$ , the force on Q will be close

to:  $\left(\frac{y}{3} \gg 2a\right)$



Options

1.  $3F$
2.  $\frac{F}{3}$
3.  $9F$
4.  $27F$

Q.22 Two stars of masses  $3 \times 10^{31}$  kg each, and at distance  $2 \times 10^{11}$  m rotate in a plane about their common centre of mass O. A meteorite passes through O moving perpendicular to the star's rotation plane. In order to escape from the gravitational field of this double star, the minimum speed that meteorite should have at O is :

(Take Gravitational constant  $G = 6.67 \times 10^{-11} \text{ Nm}^2 \text{ kg}^{-2}$ )

Options

1.  $2.4 \times 10^4$  m/s
2.  $1.4 \times 10^5$  m/s
3.  $3.8 \times 10^4$  m/s
4.  $2.8 \times 10^5$  m/s

**Q.23** Half mole of an ideal monoatomic gas is heated at constant pressure of 1 atm from  $20^\circ\text{C}$  to  $90^\circ\text{C}$ . Work done by gas is close to : (Gas constant  $R = 8.31$  J/mol·K)

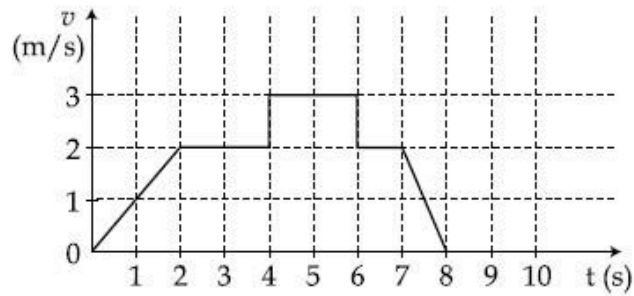
- Options**
1. 581 J
  2. 291 J
  3. 146 J
  4. 73 J

**Q.24** A parallel plate capacitor having capacitance 12 pF is charged by a battery to a potential difference of 10 V between its plates. The charging battery is now disconnected and a porcelain slab of dielectric constant 6.5 is slipped between the plates. The work done by the capacitor on the slab is :

- Options**
1. 692 pJ
  2. 508 pJ
  3. 560 pJ
  4. 600 pJ


**Q.25**

A particle starts from the origin at time  $t=0$  and moves along the positive  $x$ -axis. The graph of velocity with respect to time is shown in figure. What is the position of the particle at time  $t=5\text{s}$ ?



- Options
1. 10 m
  2. 6 m
  3. 3 m
  4. 9 m

Q.26 A rigid massless rod of length  $3l$  has two masses attached at each end as shown in the figure. The rod is pivoted at point P on the horizontal axis (see figure). When released from initial horizontal position, its instantaneous angular acceleration will be :



- Options
1.  $\frac{g}{13l}$
  2.  $\frac{g}{3l}$
  3.  $\frac{g}{2l}$
  4.  $\frac{7g}{3l}$

Q.27 Two forces P and Q, of magnitude 2F and 3F, respectively, are at an angle  $\theta$  with each other. If the force Q is doubled, then their resultant also gets doubled. Then, the angle  $\theta$  is :

Options

1.  $120^\circ$
2.  $60^\circ$
3.  $90^\circ$
4.  $30^\circ$

Q.28  
Options

A cylindrical plastic bottle of negligible mass is filled with 310 ml of water and left floating in a pond with still water. If pressed downward slightly and released, it starts performing simple harmonic motion at angular frequency  $\omega$ . If the radius of the bottle is 2.5 cm then  $\omega$  is close to : (density of water =  $10^3 \text{ kg/m}^3$ )

1.  $3.75 \text{ rad s}^{-1}$
2.  $1.25 \text{ rad s}^{-1}$
3.  $2.50 \text{ rad s}^{-1}$
4.  $5.00 \text{ rad s}^{-1}$

A particle executes simple harmonic motion with an amplitude of 5 cm. When the particle is at 4 cm from the mean position, the magnitude of its velocity in SI units is equal to that of its acceleration. Then, its periodic time in seconds is :

1.  $\frac{4\pi}{3}$

2.  $\frac{3}{8}\pi$

3.  $\frac{8\pi}{3}$

Q.29 Options

4.  $\frac{7}{3}\pi$

Two kg of a monoatomic gas is at a pressure of  $4 \times 10^4 \text{ N/m}^2$ . The density of the gas is  $8 \text{ kg/m}^3$ . What is the order of energy of the gas due to its thermal motion ?

Q.30

Options 1.  $10^3 \text{ J}$

2.  $10^5 \text{ J}$

3.  $10^4 \text{ J}$

4.  $10^6 \text{ J}$

**Section : Chemistry**



The ground state energy of hydrogen atom is  $-13.6$  eV. The energy of second excited state of  $\text{He}^+$  ion in eV is :

Q.1

- Options 1.  $-54.4$
2.  $-3.4$
3.  $-6.04$
4.  $-27.2$

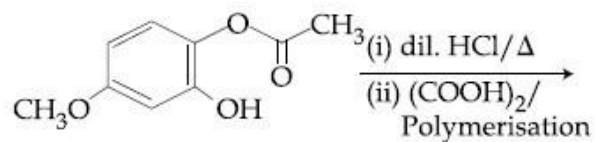
Haemoglobin and gold sol are examples of :

Q.2

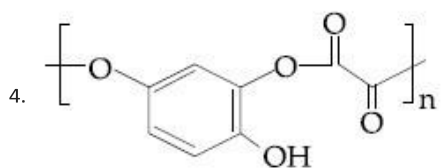
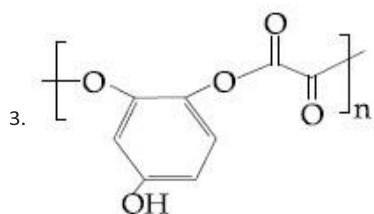
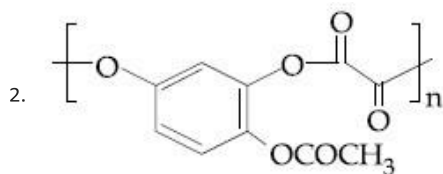
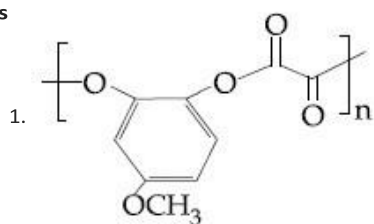
- Options
1. positively and negatively charged sols, respectively
2. positively charged sols
3. negatively charged sols

4. negatively and positively charged  
sols, respectively

Q.3 The major product of the following reaction  
is :



Options



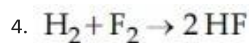
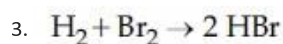
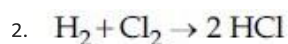
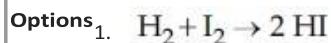
Q.4 The amount of sugar ( $C_{12}H_{22}O_{11}$ ) required  
to prepare 2 L of its 0.1 M aqueous solution  
is :

- Options
1. 136.8 g
  2. 17.1 g

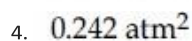
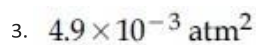
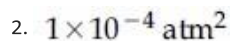
3. 68.4 g

4. 34.2 g

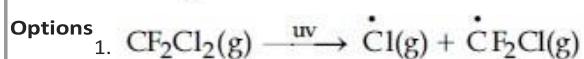
Q.5 Among the following reactions of hydrogen with halogens, the one that requires a catalyst is :

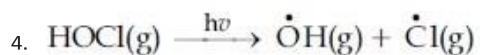
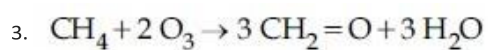
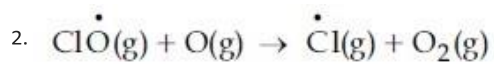


Q.6 5.1 g  $\text{NH}_4\text{SH}$  is introduced in 3.0 L evacuated flask at  $327^\circ\text{C}$ . 30% of the solid  $\text{NH}_4\text{SH}$  decomposed to  $\text{NH}_3$  and  $\text{H}_2\text{S}$  as gases. The  $K_p$  of the reaction at  $327^\circ\text{C}$  is ( $R = 0.082 \text{ L atm mol}^{-1}\text{K}^{-1}$ , Molar mass of  $\text{S} = 32 \text{ g mol}^{-1}$ , molar mass of  $\text{N} = 14 \text{ g mol}^{-1}$ )



Q.7 The reaction that is NOT involved in the ozone layer depletion mechanism in the stratosphere is :





Q.8 In the cell

$\text{Pt}(\text{s})|\text{H}_2(\text{g}, 1\text{bar})|\text{HCl}(\text{aq})|\text{AgCl}(\text{s})|\text{Ag}(\text{s})|\text{Pt}(\text{s})$   
the cell potential is 0.92 V when a  $10^{-6}$  molal HCl solution is used. The standard electrode potential of (AgCl/Ag,Cl<sup>-</sup>) electrode is :

$$\left\{ \text{Given, } \frac{2.303RT}{F} = 0.06 \text{ V at } 298 \text{ K} \right\}$$

Options 1. 0.94 V

2. 0.76 V

3. 0.40 V

4. 0.20 V

Q.9 The 71<sup>st</sup> electron of an element X with an atomic number of 71 enters into the orbital :

Options 1. 6p

2. 4f

3. 5d

4. 6s

Q.10

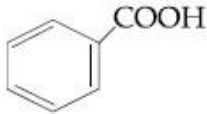
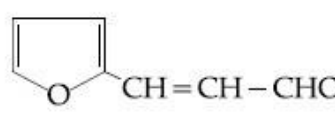
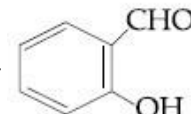
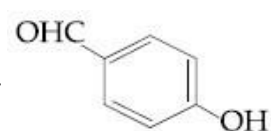
The correct match between item 'I' and item 'II' is :

Item 'I' (compound)	Item 'II' (reagent)
(A) Lysine	(P) 1-naphthol
(B) Furfural	(Q) ninhydrin
(C) Benzyl alcohol	(R) $\text{KMnO}_4$
(D) Styrene	(S) Ceric ammonium nitrate

- Options
1. (A)  $\rightarrow$  (Q); (B)  $\rightarrow$  (P); (C)  $\rightarrow$  (S); (D)  $\rightarrow$  (R)
  2. (A)  $\rightarrow$  (Q); (B)  $\rightarrow$  (P); (C)  $\rightarrow$  (R); (D)  $\rightarrow$  (S)
  3. (A)  $\rightarrow$  (R); (B)  $\rightarrow$  (P); (C)  $\rightarrow$  (Q); (D)  $\rightarrow$  (S)
  4. (A)  $\rightarrow$  (Q); (B)  $\rightarrow$  (R); (C)  $\rightarrow$  (S); (D)  $\rightarrow$  (P)

Q.11 An aromatic compound 'A' having molecular formula  $\text{C}_7\text{H}_6\text{O}_2$  on treating with aqueous ammonia and heating forms compound 'B'. The compound 'B' on reaction with molecular bromine and potassium hydroxide provides compound 'C' having molecular formula  $\text{C}_6\text{H}_7\text{N}$ . The structure of 'A' is :

Options

1. 
2. 
3. 
4. 

Q.12 The process with negative entropy change is :

- Options
1. Dissociation of  $\text{CaSO}_4(\text{s})$  to  $\text{CaO}(\text{s})$  and  $\text{SO}_3(\text{g})$
  2. Sublimation of dry ice
  3. Dissolution of iodine in water
  4. Synthesis of ammonia from  $\text{N}_2$  and  $\text{H}_2$

Q.13 An ideal gas undergoes isothermal compression from  $5 \text{ m}^3$  to  $1 \text{ m}^3$  against a constant external pressure of  $4 \text{ Nm}^{-2}$ . Heat released in this process is used to increase the temperature of 1 mole of Al. If molar heat capacity of Al is  $24 \text{ J mol}^{-1}\text{K}^{-1}$ , the temperature of Al increases by :

- Options
1.  $\frac{3}{2} \text{ K}$
  2.  $2 \text{ K}$
  3.  $\frac{2}{3} \text{ K}$
  4.  $1 \text{ K}$

Question ID : 41652910459

Option 1 ID : 41652941297

Option 2 ID : 41652941296

Option 3 ID : 41652941295

Option 4 ID : 41652941294

Status : Answered

Chosen Option : 3

Q.14 Elevation in the boiling point for 1 molal solution of glucose is 2 K. The depression in the freezing point for 2 molal solution of glucose in the same solvent is 2 K. The relation between  $K_b$  and  $K_f$  is :

- Options
1.  $K_b = 1.5 K_f$
  2.  $K_b = K_f$
  3.  $K_b = 0.5 K_f$
  4.  $K_b = 2 K_f$

Q.15 The major product of the following reaction is :



Options



Q.16 Sodium metal on dissolution in liquid ammonia gives a deep blue solution due to the formation of :

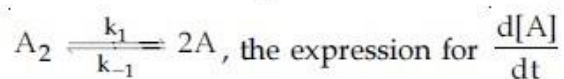
Options 1. sodium-ammonia complex

2. sodamide

3. sodium ion-ammonia complex

4. ammoniated electrons

Q.17 For an elementary chemical reaction,



is :

Options 1.  $k_1[A_2] - k_{-1}[A]^2$

2.  $2k_1[A_2] - k_{-1}[A]^2$

$$k_1[A_2] + k_{-1}[A]^2$$

$$2k_1[A_2] - 2k_{-1}[A]^2$$

3.

4.

Q.18

Options

Which of the following tests cannot be used for identifying amino acids ?

1. Biuret test
2. Barfoed test
3. Ninhydrin test
4. Xanthoproteic test

Q.19

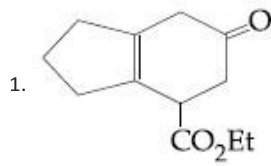
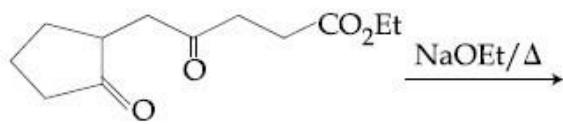
Options

The difference in the number of unpaired electrons of a metal ion in its high-spin and low-spin octahedral complexes is two. The metal ion is :

1.  $Ni^{2+}$
2.  $Fe^{2+}$
3.  $Co^{2+}$
4.  $Mn^{2+}$

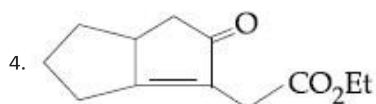
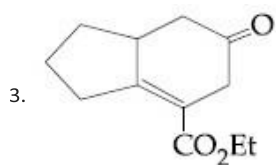
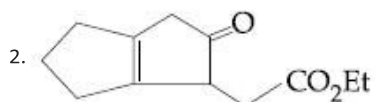


The major product obtained in the following reaction is :



Q.20

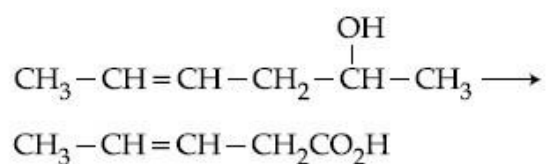
Options



Q.21 The pair that contains two P-H bonds in each of the oxoacids is :

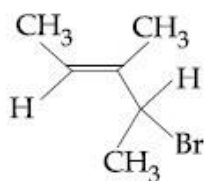
- Options
1.  $\text{H}_4\text{P}_2\text{O}_5$  and  $\text{H}_4\text{P}_2\text{O}_6$
  2.  $\text{H}_3\text{PO}_2$  and  $\text{H}_4\text{P}_2\text{O}_5$
  3.  $\text{H}_3\text{PO}_3$  and  $\text{H}_3\text{PO}_2$
  4.  $\text{H}_4\text{P}_2\text{O}_5$  and  $\text{H}_3\text{PO}_3$

Q.22 Which is the most suitable reagent for the following transformation ?



- Options
1. Tollen's reagent
  2.  $\text{I}_2/\text{NaOH}$
  3.  $\text{CrO}_2\text{Cl}_2/\text{CS}_2$
  4. alkaline  $\text{KMnO}_4$

Q.23 What is the IUPAC name of the following compound ?



- Options
1. 3-Bromo-1, 2-dimethylbut-1-ene
  2. 3-Bromo-3-methyl-1, 2-dimethylprop-1-ene
  3. 2-Bromo-3-methylpent-3-ene
  4. 4-Bromo-3-methylpent-2-ene

Q.24 The number of 2-centre-2-electron and 3-centre-2-electron bonds in  $B_2H_6$ , respectively, are :

- Options
1. 2 and 1
  2. 4 and 2
  3. 2 and 2
  4. 2 and 4

Q.25 In the reaction of oxalate with permanganate in acidic medium, the number of electrons involved in producing one molecule of  $CO_2$  is :

- Options
1. 1
  2. 10
  3. 2
  4. 5

Q.26 A reaction of cobalt(III) chloride and ethylenediamine in a 1 : 2 mole ratio generates two isomeric products A (violet coloured) and B (green coloured). A can show optical activity, but, B is optically inactive. What type of isomers does A and B represent ?

- Options
1. Geometrical isomers
  2. Coordination isomers
  3. Linkage isomers
  4. Ionisation isomers

Q.27 The electrolytes usually used in the electroplating of gold and silver, respectively, are :

- Options
1.  $[\text{Au}(\text{CN})_2]^-$  and  $[\text{Ag}(\text{CN})_2]^-$
  2.  $[\text{Au}(\text{CN})_2]^-$  and  $[\text{AgCl}_2]^-$
  3.  $[\text{Au}(\text{OH})_4]^-$  and  $[\text{Ag}(\text{OH})_2]^-$
  4.  $[\text{Au}(\text{NH}_3)_2]^+$  and  $[\text{Ag}(\text{CN})_2]^-$

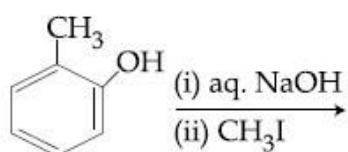
Q.28 A compound of formula  $\text{A}_2\text{B}_3$  has the hcp lattice. Which atom forms the hcp lattice and what fraction of tetrahedral voids is occupied by the other atoms :

- Options
1. hcp lattice - A,  $\frac{2}{3}$  Tetrahedral voids - B
  2. hcp lattice - A,  $\frac{1}{3}$  Tetrahedral voids - B

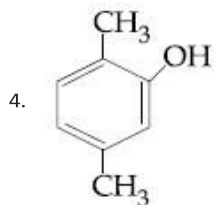
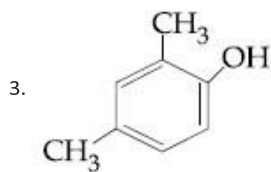
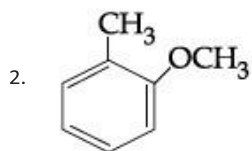
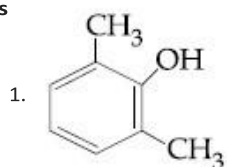
3. hcp lattice - B,  $\frac{2}{3}$  Tetrahedral  
voids - A

4. hcp lattice - B,  $\frac{1}{3}$  Tetrahedral  
voids - A

Q.29 The major product of the following reaction is :

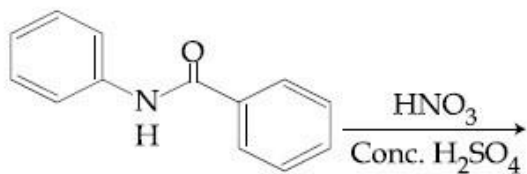


Options

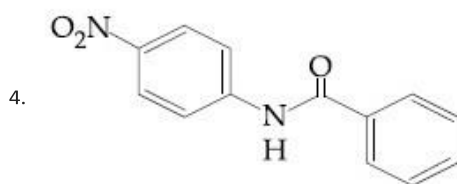
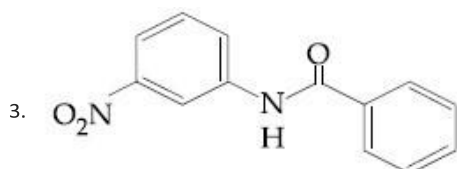
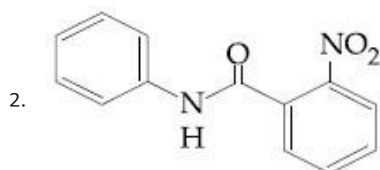
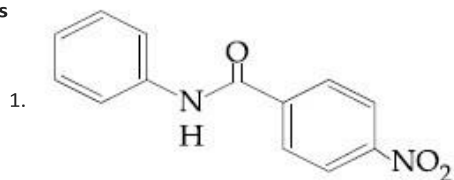


Q.30

What will be the major product in the following mononitration reaction ?



Options



## Section : Mathematics

Q.1 The value of  $\lambda$  such that sum of the squares of the roots of the quadratic equation,  $x^2 + (3 - \lambda)x + 2 = \lambda$  has the least value is :

Options

1.  $\frac{15}{8}$

2. 1

3.  $\frac{4}{9}$

4. 2

Q.2 The value of

$$\cos \frac{\pi}{2^2} \cdot \cos \frac{\pi}{2^3} \cdot \dots \cdot \cos \frac{\pi}{2^{10}} \cdot \sin \frac{\pi}{2^{10}}$$

is :

Options

1.  $\frac{1}{512}$

2.  $\frac{1}{1024}$

3.  $\frac{1}{256}$

4.  $\frac{1}{2}$

Q.3 The curve amongst the family of curves represented by the differential equation,  $(x^2 - y^2)dx + 2xy dy = 0$  which passes through  $(1, 1)$ , is :

Options 1. a circle with centre on the  $x$ -axis.

2. an ellipse with major axis along the  $y$ -axis.

3. a circle with centre on the  $y$ -axis.

4. a hyperbola with transverse axis along the  $x$ -axis.

Q.4 Let  $f: (-1, 1) \rightarrow \mathbf{R}$  be a function defined by

$$f(x) = \max \left\{ -|x|, -\sqrt{1-x^2} \right\}. \text{ If } K \text{ be}$$

the set of all points at which  $f$  is not differentiable, then  $K$  has exactly :

- Options
1. five elements
  2. one element
  3. three elements
  4. two elements

Q.5 The positive value of  $\lambda$  for which the co-efficient of  $x^2$  in the expression

$$x^2 \left( \sqrt{x} + \frac{\lambda}{x^2} \right)^{10} \text{ is } 720, \text{ is :}$$

Options

1. 4
2.  $2\sqrt{2}$
3.  $\sqrt{5}$
4. 3

Q.6 The tangent to the curve,  $y = xe^{x^2}$  passing through the point  $(1, e)$  also passes through the point :

Options

1.  $(2, 3e)$
2.  $\left( \frac{4}{3}, 2e \right)$
3.  $\left( \frac{5}{3}, 2e \right)$
4.  $(3, 6e)$

Q.7



Let  $\mathbf{N}$  be the set of natural numbers and two functions  $f$  and  $g$  be defined as  $f, g : \mathbf{N} \rightarrow \mathbf{N}$  such that

$$f(n) = \begin{cases} \frac{n+1}{2} & \text{if } n \text{ is odd} \\ \frac{n}{2} & \text{if } n \text{ is even} \end{cases}$$

and  $g(n) = n - (-1)^n$ . Then  $f \circ g$  is :

- Options
1. onto but not one-one.
  2. one-one but not onto.
  3. both one-one and onto.
  4. neither one-one nor onto.

**Q.8** The number of values of  $\theta \in (0, \pi)$  for which the system of linear equations

$$x + 3y + 7z = 0$$

$$-x + 4y + 7z = 0$$

$$(\sin 3\theta)x + (\cos 2\theta)y + 2z = 0$$

has a non-trivial solution, is :

- Options
1. three
  2. two
  3. four
  4. one

**Q.9** Let  $\vec{\alpha} = (\lambda - 2)\vec{a} + \vec{b}$  and

$$\vec{\beta} = (4\lambda - 2)\vec{a} + 3\vec{b}$$

be two given vectors where vectors  $\vec{a}$  and  $\vec{b}$  are non-collinear. The value of  $\lambda$  for which

vectors  $\vec{\alpha}$  and  $\vec{\beta}$  are collinear, is :

- Options
1. -4

-3

4

3

2.

3.

4.

Q.10  
Options

Two sides of a parallelogram are along the lines,  $x + y = 3$  and  $x - y + 3 = 0$ . If its diagonals intersect at  $(2, 4)$ , then one of its vertex is :

1.  $(3, 5)$

2.  $(2, 1)$

3.  $(2, 6)$

4.  $(3, 6)$

If  $\int_0^x f(t) dt = x^2 + \int_x^1 t^2 f(t) dt$ , then

$f'(1/2)$  is :

Q.11

Options

1.  $\frac{24}{25}$

1.

2.  $\frac{18}{25}$

2.

3.  $\frac{4}{5}$

3.

4.  $\frac{6}{25}$

4.

Q.12

Let  $z = \left(\frac{\sqrt{3}}{2} + \frac{i}{2}\right)^5 + \left(\frac{\sqrt{3}}{2} - \frac{i}{2}\right)^5$ . If  $R(z)$

and  $I(z)$  respectively denote the real and imaginary parts of  $z$ , then :

- Options
1.  $I(z) = 0$
  2.  $R(z) > 0$  and  $I(z) > 0$
  3.  $R(z) < 0$  and  $I(z) > 0$
  4.  $R(z) = -3$

Q.13 If the probability of hitting a target by a shooter, in any shot, is  $\frac{1}{3}$ , then the minimum number of independent shots at the target required by him so that the probability of hitting the target at least once is greater than  $\frac{5}{6}$ , is :

- Options
1. 3
  2. 6
  3. 5
  4. 4

Q.14 If  $\int x^5 e^{-4x^3} dx = \frac{1}{48} e^{-4x^3} f(x) + C$ , where  $C$  is a constant of integration, then  $f(x)$  is equal to :

- Options
1.  $-2x^3 - 1$
  2.  $-4x^3 - 1$
  3.  $-2x^3 + 1$
  4.  $4x^3 + 1$

Q.15 If the area of an equilateral triangle inscribed in the circle,  $x^2 + y^2 + 10x + 12y + c = 0$  is  $27\sqrt{3}$  sq. units then c is equal to :

- Options
1. 13
  2. 20
  3. -25
  4. 25

Q.16 Consider the following three statements :  
P : 5 is a prime number.  
Q : 7 is a factor of 192.  
R : L.C.M. of 5 and 7 is 35.  
Then the truth value of which one of the following statements is true ?

- Options
1.  $(\sim P) \vee (Q \wedge R)$
  2.  $(P \wedge Q) \vee (\sim R)$
  3.  $(\sim P) \wedge (\sim Q \wedge R)$
  4.  $P \vee (\sim Q \wedge R)$

Q.17 The length of the chord of the parabola  $x^2 = 4y$  having equation  $x - \sqrt{2}y + 4\sqrt{2} = 0$  is :

- Options
1.  $3\sqrt{2}$
  2.  $2\sqrt{11}$
  3.  $8\sqrt{2}$
  4.  $6\sqrt{3}$

Q.18

Let  $A = \begin{bmatrix} 2 & b & 1 \\ b & b^2 + 1 & b \\ 1 & b & 2 \end{bmatrix}$  where  $b > 0$ . Then

the minimum value of  $\frac{\det(A)}{b}$  is :

- Options
1.  $2\sqrt{3}$
  2.  $-2\sqrt{3}$
  3.  $-\sqrt{3}$
  4.  $\sqrt{3}$

Q.19 Let

$$S = \left\{ (x, y) \in \mathbb{R}^2 : \frac{y^2}{1+r} - \frac{x^2}{1-r} = 1 \right\},$$

where  $r \neq \pm 1$ . Then S represents :

Options a hyperbola whose eccentricity is

1.  $\frac{2}{\sqrt{1-r}}$ , when  $0 < r < 1$ .

an ellipse whose eccentricity is

2.  $\sqrt{\frac{2}{r+1}}$ , when  $r > 1$ .

a hyperbola whose eccentricity is

3.  $\frac{2}{\sqrt{r+1}}$ , when  $0 < r < 1$ .

an ellipse whose eccentricity is

4.  $\frac{1}{\sqrt{r+1}}$ , when  $r > 1$ .

Q.20

$$\text{If } \sum_{r=0}^{25} \left\{ {}^{50}C_r \cdot {}^{50-r}C_{25-r} \right\} = K \left( {}^{50}C_{25} \right),$$

then K is equal to :

- Options
1.  $(25)^2$
  2.  $2^{25} - 1$
  3.  $2^{24}$
  4.  $2^{25}$

Q.21

The plane which bisects the line segment joining the points  $(-3, -3, 4)$  and  $(3, 7, 6)$  at right angles, passes through which one of the following points ?

- Options
1.  $(-2, 3, 5)$
  2.  $(4, -1, 7)$
  3.  $(2, 1, 3)$
  4.  $(4, 1, -2)$

Q.22

$$\text{The value of } \cot \left( \sum_{n=1}^{19} \cot^{-1} \left( 1 + \sum_{p=1}^n 2p \right) \right)$$

is :

- Options
1.  $\frac{21}{19}$
  2.  $\frac{19}{21}$
  3.  $\frac{22}{23}$
  4.  $\frac{23}{22}$

Q.23 If mean and standard deviation of 5 observations  $x_1, x_2, x_3, x_4, x_5$  are 10 and 3, respectively, then the variance of 6 observations  $x_1, x_2, \dots, x_5$  and  $-50$  is equal to :

- Options
1. 509.5
  2. 586.5
  3. 582.5
  4. 507.5

Q.24 Let  $f$  be a differentiable function such that

$$f'(x) = 7 - \frac{3}{4} \frac{f(x)}{x}, \quad (x > 0) \quad \text{and}$$

$$f(1) \neq 4. \quad \text{Then } \lim_{x \rightarrow 0^+} x f\left(\frac{1}{x}\right) :$$

- Options
1. exists and equals  $\frac{4}{7}$ .
  2. exists and equals 4.
  3. does not exist.
  4. exists and equals 0.

Q.25 Two vertices of a triangle are  $(0, 2)$  and  $(4, 3)$ . If its orthocentre is at the origin, then its third vertex lies in which quadrant ?

- Options
1. third
  2. second
  3. first
  4. fourth



Q.26

The value of  $\int_{-\pi/2}^{\pi/2} \frac{dx}{[x] + [\sin x] + 4}$ , where

$[t]$  denotes the greatest integer less than or equal to  $t$ , is :

Options

1.  $\frac{1}{12} (7\pi + 5)$

2.  $\frac{1}{12} (7\pi - 5)$

3.  $\frac{3}{20} (4\pi - 3)$

4.  $\frac{3}{10} (4\pi - 3)$

Q.27 On which of the following lines lies the point of intersection of the line,

$\frac{x-4}{2} = \frac{y-5}{2} = \frac{z-3}{1}$  and the plane,  
 $x+y+z=2$ ?

Options

1.  $\frac{x+3}{3} = \frac{4-y}{3} = \frac{z+1}{-2}$

2.  $\frac{x-4}{1} = \frac{y-5}{1} = \frac{z-5}{-1}$

3.  $\frac{x-1}{1} = \frac{y-3}{2} = \frac{z+4}{-5}$

4.  $\frac{x-2}{2} = \frac{y-3}{2} = \frac{z+3}{3}$

Q.28 Let  $a_1, a_2, a_3, \dots, a_{10}$  be in G.P. with  $a_i > 0$  for  $i = 1, 2, \dots, 10$  and  $S$  be the set of pairs  $(r, k)$ ,  $r, k \in \mathbb{N}$  (the set of natural numbers) for which

$$\begin{vmatrix} \log_e a_1^r a_2^k & \log_e a_2^r a_3^k & \log_e a_3^r a_4^k \\ \log_e a_4^r a_5^k & \log_e a_5^r a_6^k & \log_e a_6^r a_7^k \\ \log_e a_7^r a_8^k & \log_e a_8^r a_9^k & \log_e a_9^r a_{10}^k \end{vmatrix} = 0$$

Then the number of elements in  $S$ , is :

Options 1. 4

2. infinitely many

3. 2

4. 10

Q.29 With the usual notation, in  $\Delta ABC$ , if  $\angle A + \angle B = 120^\circ$ ,  $a = \sqrt{3} + 1$  and  $b = \sqrt{3} - 1$ , then the ratio  $\angle A : \angle B$ , is :

Options 1. 7 : 1

2. 5 : 3

3. 9 : 7

4. 3 : 1

Q.30 A helicopter is flying along the curve given by  $y - x^{3/2} = 7$ , ( $x \geq 0$ ). A soldier positioned at the point  $\left(\frac{1}{2}, 7\right)$  wants to shoot down the helicopter when it is nearest to him. Then this nearest distance is :

Options 1.  $\frac{\sqrt{5}}{6}$

2.  $\frac{1}{3}\sqrt{\frac{7}{3}}$

3.  $\frac{1}{6}\sqrt{\frac{7}{3}}$

4.  $\frac{1}{2}$