
Question 1. Select the related word/letters/number from the given alternatives.

दिये गये विकल्पों में से संबंधित शब्द/अक्षरों/संख्या को चुनिए।

Donkey : Brays :: Monkey : ?

गधा : रैंकना : बन्दर : ?

Options:

1) Chatters

चहकना

2) Trumpets

चिंघाड़ना

3) Bellows

गरजना

4) Grunts

घुरघुराना

Correct Answer: Chatters

चहकना

Candidate Answer: Grunts

घुरघुराना

Question 2. Select the related word/letters/number from the given alternatives.

दिये गये विकल्पों में से संबंधित शब्द/अक्षरों/संख्या को चुनिए।

ABDE : FGJI :: IJLM : ?

Options:

1) NOQR

2) NOPQ

3) NMOP

4) NPQR

Correct Answer: NOQR

Candidate Answer: NOQR

Question 3. Select the related word/letters/number from the given alternatives.

दिये गये विकल्पों में से संबंधित शब्द/अक्षरों/संख्या को चुनिए।

1 : 8 :: ? : 64

Options:

1) 25

2) 36

3) 30

4) 27

Correct Answer: 27

Candidate Answer: 27

Question 4.

For the following questions

Find the odd word/letters/number pair from the given alternatives.

दिये गए विकल्पों में से विषम शब्द/ अक्षर/ संख्या युग्म छांटिए ।

Options:

1) Swimming

2) Sailing

3) Diving

4) Driving

Correct Answer: Driving

Candidate Answer: Diving

Question 5.

For the following questions

Find the odd word/letters/number pair from the given alternatives.

दिये गए विकल्पों में से विषम शब्द/ अक्षर/ संख्या युग्म छांटिए ।

Options:

1) RGTF

2) MLOK

3) CTES

4) VDZC

Correct Answer: VDZC

Candidate Answer: MLOK

Question 6.

For the following questions

Find the odd word/letters/number pair from the given alternatives.

दिये गए विकल्पों में से विषम शब्द/ अक्षर/ संख्या युग्म छांटिए ।

Options:

1) 443

2) 633

3) 821

4) 245

Correct Answer: 633

Candidate Answer: [NOT ANSWERED]

Question 7. Arrange the following words as per order in the dictionary

निम्नलिखित शब्दों को शब्दकोश में दिए गए क्रम के अनुसार लिखिए।

1. Dyke 2. Dwindle 3. Dwell 4. Dye

Options:

1) 3,2,4,1

2) 1,3,4,2

3) 2,1,3,4

4) 3,4,2,1

Correct Answer: 3,2,4,1

Candidate Answer: 3,2,4,1

Question 8. Choose the correct alternative that will replace the question mark in the given series:

सही विकल्प चुनकर सीरीज में प्रश्न चिन्ह के स्थान पर लिखिए।

DHL, PTX, BFJ, ?

Options:

1) KOS

2) NRV

3) NPS

4) NRU

Correct Answer: NRV

Candidate Answer: NRV

Question 9. Find the wrong number in the series:

सीरीज में गलत संख्या छांटिए।

28, 33, 31, 36, 34, 29

Options:

1) 33

2) 36

3) 34

4) 29

Correct Answer: 29

Candidate Answer: 29

Question 10. The age of Rakhi is twelve times that of her daughter Anubha. If age of Anubha is 3 years now, then what was the age of Rakhi, 2 years earlier?

राखी की आयु उसकी पुत्री (अनुभा) की आयु की 12 गुनी है। यदि अनुभा की आयु 3 वर्ष है। तो 2 वर्ष पहले राखी की उम्र क्या थी ?

Options:

1) 20 years

20 वर्ष

2) 34 years

34 वर्ष

3) 30 years

30 वर्ष

4) 36 years

36 वर्ष

Correct Answer: 34 years

34 वर्ष

Candidate Answer: 34 years

34 वर्ष

Question 11. Satya's birthday falls on 15th August and Meena's birthday falls on 25th June. If Meena's birthday was on Wednesday, what was the day on Satya's birthday in the same year?

सत्या का जन्मदिन 15 अगस्त को और मीना का जन्मदिन 25 जून को आता है। यदि मीना का जन्मदिन बुधवार को था, तो सत्या का जन्मदिन उसी वर्ष कौन से दिन था ?

Options:

- 1) Friday
शुक्रवार
- 2) Monday
सोमवार
- 3) Tuesday
मंगलवार
- 4) Saturday
शनिवार

Correct Answer: Friday

शुक्रवार

Candidate Answer: Tuesday

मंगलवार

Question 12. From the given words, select the word which can be formed using the letters of the given word.

निम्नलिखित शब्दों में से वह शब्द चुनिए जो दिए गए शब्द के अक्षरों के प्रयोग से बनाया जा सकता है ?

AMPLIFICATION

Options:

- 1) ACTOR
- 2) MANOR
- 3) CHAMP
- 4) MANIA

Correct Answer: MANIA

Candidate Answer: MANIA

Question 13. If BLACKSMITH is coded as CNBELUNKUJ, then CHILDREN will be coded as ?

अगर BLACKSMITH का कोड CNBELUNKUJ हो तो CHILDREN का कोड क्या होगा ?

Options:

- 1) DIJMESFO
- 2) DJJNETFP
- 3) DJINETEP
- 4) DJJNETEP

Correct Answer: DJJNETFP

Candidate Answer: DJJNETFP

Question 14. If $17 + 17 = 2895$

$18 + 18 = 3245$

$19 + 19 = 3615$

then $23 + 23 = ?$

यदि $17 + 17 = 2895$

$18 + 18 = 3245$

$19 + 19 = 3615$

हो तो $23 + 23 = ?$

Options:

- 1) 5765
- 2) 2565
- 3) 4005
- 4) 5295

Correct Answer: 5295

Candidate Answer: 5295

Question 15. In the following problem, '=' stands for '÷', '+' stands for '-', 'x' stands for '=', '-' stands for '+' and '÷' stands for 'x'. Find the correct equation.

यदि (=) का मतलब (÷), (+) का मतलब (-), (x) का मतलब (=), (-) का मतलब (+), और (÷) का मतलब (x) हो, तो सही समीकरण ज्ञात कीजिए ?

Options:

1) $8 \div 4 + 1 - 5 = 6 \times 4$

2) $4 \times 6 \div 4 + 4 = 7$

3) $5 \div 3 - 25 + 20 = 20 \times 39$

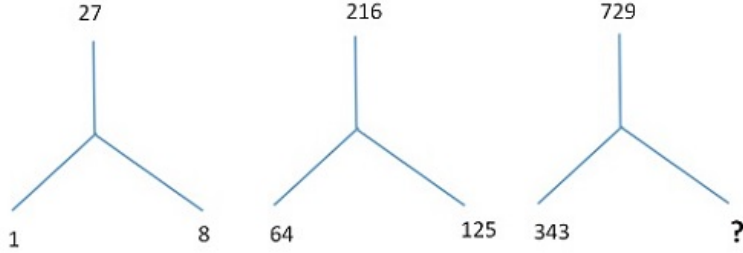
4) $96 \div 2 \times 6 \div 105 + 1$

Correct Answer: $5 \div 3 - 25 + 20 = 20 \times 39$

Candidate Answer: $5 \div 3 - 25 + 20 = 20 \times 39$

Question 16. Select the missing number from the given responses.

लुप्त संख्या ज्ञात कीजिए ?



Options:

1) 432

2) 334

3) 512

4) 501

Correct Answer: 512

Candidate Answer: 512

Question 17. A man walked 9 km towards East and then 12 km towards South. How far is he from the starting point?

एक आदमी 9 कि.मी. पूर्व की ओर उसके बाद 12 कि.मी. दक्षिण की ओर जाता है। उसके प्रारम्भ और अन्तिम बिन्दु के बीच की दूरी ज्ञात कीजिए ?

Options:

1) 8 km

8 कि.मी.

2) 6 km

6 कि.मी.

3) 15 km

15 कि.मी.

4) 7.5 km

7.5 कि.मी.

Correct Answer: 15 km

15 कि.मी.

Candidate Answer: 15 km

15 कि.मी.

Question 18. Consider the given statement/s to be true and decide which of the given conclusions/assumptions can definitely be drawn from the given statement.

Statement: Poverty is a symptom as well as a consequence of social disorder.

Assumptions: I. Poverty is a type of social order

II. Poverty is related to social order

निम्नलिखित प्रश्न में एक या दो वक्तव्य दिये गये हैं, जिसके आगे दो निष्कर्ष/मान्यताएं, I और II निकाले गये हैं। आपको विचार करना है कि वक्तव्य सत्य है चाहे वह सामान्यतः शर्त तथ्यों से भिन्न प्रतीत होता हो। आपको निर्णय करना है कि दिए गए वक्तव्य में से कोन-सा निश्चित रूप से सही निष्कर्ष/मान्यता निकाला जा सकता है ?

कथन : गरीबी, सामाजिक अव्यवस्था का लक्षण एवं परिणाम है।

निष्कर्ष : I. गरीबी सामाजिक व्यवस्था का एक प्रकार है।

II. गरीबी सामाजिक व्यवस्था से सम्बन्धित है।

Options:

1) only I assumption is correct

केवल निष्कर्ष I सही है।

2) only assumption II is correct

केवल निष्कर्ष II सही है।

3) Both assumptions I and II are correct

दोनों निष्कर्ष I और II सही हैं।

4) Neither assumption I nor II is correct

ना तो निष्कर्ष I सही है और ना ही निष्कर्ष II

Correct Answer: Neither assumption I nor II is correct

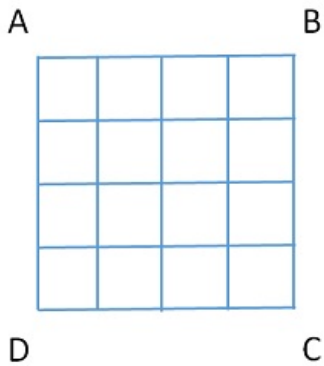
ना तो निष्कर्ष I सही है और ना ही निष्कर्ष II

Candidate Answer: only I assumption is correct

केवल निष्कर्ष I सही है।

Question 19. How many squares are there in the square figure ABCD?

वर्ग ABCD में कितने वर्ग हैं ?



Options:

1) 16

2) 17

3) 26

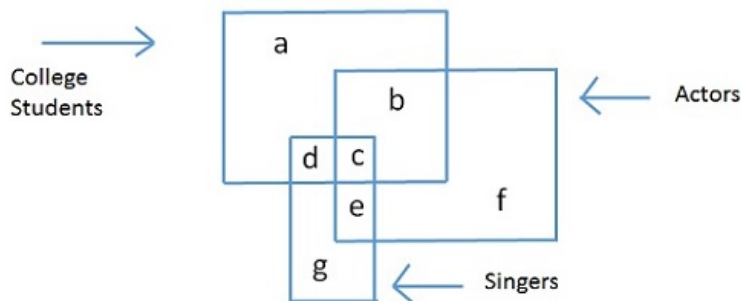
4) 30

Correct Answer: 30

Candidate Answer: 17

Question 20. Find the part which represents those actors who are also singers

वह कौन सा भाग है जो दर्शाता है कि जो अभिनेता हैं वह गायक भी हैं।



Options:

1) a

2) b

3) c

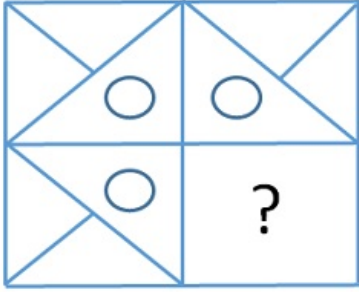
4) f

Correct Answer: c

Candidate Answer: c

Question 21. Which answer figure will complete the pattern in the question figure?

कौन सी उत्तर आकृति प्रश्न आकृति के प्रतिरूप को पूरा करेगी ?



Options:

1)



2)



3)



4)



Correct Answer:

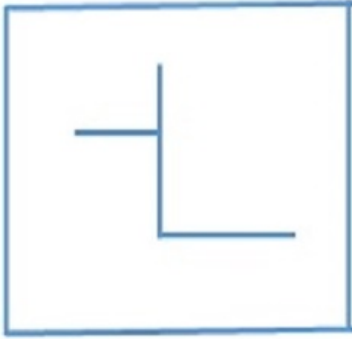


Candidate Answer:



Question 22. From the given answer figures, select the one in which the question figure is hidden/embedded.

दी गई उत्तर आकृतियों में से उस उत्तर आकृति को चुनिए जिसमें प्रश्न आकृति निहित है।



Options:

1)



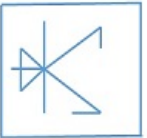
2)



3)



4)



Correct Answer:

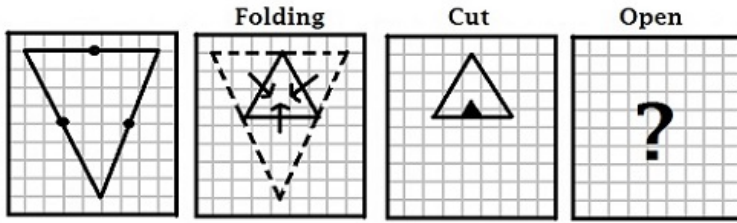


Candidate Answer:



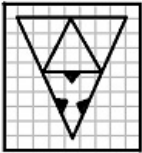
Question 23. A piece of paper is folded and cut as shown below in the question figures. From the given answer figures, indicate how it will appear when opened.

नीचे प्रश्न आकृतियों में दिखाए अनुसार कागज को मोड़कर, काटने तथा खोलने के बाद वह किस उत्तर आकृति जैसा दिखाई देगा ?




Options:

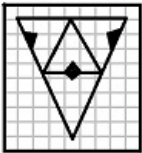
1)



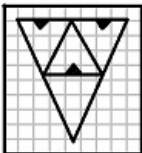
2)



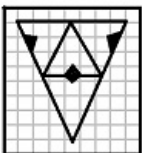
3)



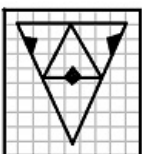
4)



Correct Answer:

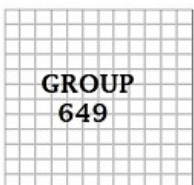


Candidate Answer:



Question 24. Which of the answer figure is exactly the water image of the given figure?

दी गई आकृतियों में से उपरोक्त आकृति का जल प्रतिबिम्ब कौन सा है ?



Options:

1) 56, 58, 03, 02

2) 59, 77, 85, 43

3) 56, 62, 03, 02

4) 57, 60, 10, 02

Correct Answer: 59, 77, 85, 43

Candidate Answer: 59, 77, 85, 43

Question 26. Trickle down theory ignores the impact of economic growth on

टपकन सिद्धांत (आपमात्रीय सिद्धांत) निम्नलिखित में से किस पर आर्थिक वृद्धि के प्रभाव को नजर अंदाज करता है ?

Options:

1) Investment

निवेश

2) Savings

बचत

3) Income distribution

आय वितरण

4) Consumption

उपयोग

Correct Answer: Income distribution

आय वितरण

Candidate Answer: [NOT ANSWERED]

Question 27. The Comptroller and Auditor General of India does not audit the receipts and expenditure of

भारत के नियंत्रक-महालेखापरीक्षक निम्नलिखित में से किसकी प्राप्तियों और व्यय की लेखापरीक्षा नहीं करते ?

Options:

1) Central Government

केंद्र सरकार

2) Local Bodies

स्थानीय निकाय

3) State Government

राज्य सरकार

4) Government Companies

सरकारी कम्पनियां

Correct Answer: Local Bodies

स्थानीय निकाय

Candidate Answer: Local Bodies

स्थानीय निकाय

Question 28. In which year did the Kakori conspiracy case take place?

काकोरी षडयंत्र मामले किस वर्ष में हुआ ?

Options:

1) 1925

2) 1924

3) 1926

4) 1927

Correct Answer: 1925

Candidate Answer: 1925

Question 29. The Taj Mahal is called 'a dream in marble'. Which monument is called as 'a dream in stone'?

ताज महल को 'संगमरमर में स्वप्न' (a dream in marble) कहा जाता है ? किस स्मारक को 'पत्थर में स्वप्न' कहा जाता है ?

Options:

1) The Rang Mahal

रंग महल

2) The Panch Mahal

पंच महल

3) The Red Fort

लाल किला

4) The Bahai temple

बहाई मन्दिर

Correct Answer: The Panch Mahal
पंच महल

Candidate Answer: The Red Fort
लाल किला

Question 30. Sex-ratio in India is measured as

भारत में लिंग अनुपात की गणना कैसे की जाती है ?

Options:

1) Number of males per thousand females

प्रति हजार स्त्रियों पर पुरुषों की संख्या

2) Number of females per thousand males

प्रति हजार पुरुषों पर स्त्रियों की संख्या

3) Number of males per hundred females

प्रति सौ स्त्रियों पर पुरुषों की संख्या

4) Number of females per hundred males

प्रति सौ पुरुषों पर स्त्रियों की संख्या

Correct Answer: Number of females per thousand males

प्रति हजार पुरुषों पर स्त्रियों की संख्या

Candidate Answer: Number of females per thousand males

प्रति हजार पुरुषों पर स्त्रियों की संख्या

Question 31. Companion cells are unique to

सहचर कोशिकाएं निम्नलिखित में से सिर्फ किसमें हैं ?

Options:

1) Bryophytes

ब्रायोफाइट

2) Pteridophytes

टेरिडोफाइट्स

3) Angiosperms

एन्जियोस्पर्म (आवृतबीजी)

4) Gymnosperms

जिम्नोस्पर्म (अनावृतबीजी)

Correct Answer: Angiosperms

एन्जियोस्पर्म (आवृतबीजी)

Candidate Answer: [NOT ANSWERED]

Question 32. Which one of the following is an insulator?

निम्नलिखित में से क्या विद्युत-रोधी है ?

Options:

1) Copper

तांबा

2) Wood

लकड़ी

3) Mercury

पारद

4) Aluminium

एल्यूमिनियम

Correct Answer: Wood

लकड़ी

Candidate Answer: Wood

लकड़ी

Question 33. Bubbles of air rise up through liquids due to:

किस कारण से वायु के बुलबुले तरल पदार्थ में उठते हैं ?

Options:

1) Surface tension and adherence

पृष्ठ-तनाव और आसंजन

2) viscosity and buoyancy.

श्यानता और उत्पलव

3) air current over the liquid and buoyancy

तरल पदार्थ पर वायु प्रवाह और उत्पलव

4) Up thrust and surface tension.

उत्क्षेप और पृष्ठ तनाव

Correct Answer: viscosity and buoyancy.

श्यानता और उत्पलव

Candidate Answer: Up thrust and surface tension.

उत्क्षेप और पृष्ठ तनाव

Question 34. Zeolite is

जियोलाइट क्या है ?

Options:

1) hydrated ferric oxide

हाइड्रेटेड फेरिक ऑक्साइड

2) hydrated sodium aluminium silicate

हाइड्रेटेड सोडियम एल्युमिनियम सिलिकेट

3) sodium hexameta phosphate

सोडियम हेक्सामेटा फॉस्फेट

4) sodium tetra borate

सोडियम टेट्राबोरेट

Correct Answer: hydrated sodium aluminium silicate

हाइड्रेटेड सोडियम एल्युमिनियम सिलिकेट

Candidate Answer: [NOT ANSWERED]

Question 35. The boiling point of liquids vary as

किस कारण से तरल पदार्थों के क्वथनांक (boiling point) में भिन्नता होती है ?

Options:

1) pressure varies

दाब में भिन्नता

2) temperature varies

तापमान में भिन्नता

3) volume varies

आयतन में भिन्नता

4) density varies

घनत्व में भिन्नता

Correct Answer: pressure varies

दाब में भिन्नता

Candidate Answer: temperature varies

तापमान में भिन्नता

Question 36. The largest source of pollution in the world is

विश्व में प्रदूषण का सबसे बड़ा स्रोत कौन-सा है ?

Options:

1) herbicides and insecticides

शाकनाशी और कीटनाशी

2) Automobile exhausts

आटोमोबाइल से निकलने वाला धुआं

3) Sewage and garbage

कूड़ा और कचरा

4) Industrial effluents

औद्योगिक बहिःसाव

Correct Answer: Sewage and garbage

कूड़ा और कचरा

Candidate Answer: Industrial effluents

औद्योगिक बहिःसाव

Question 37. Among the following states, the literacy rate is highest in

निम्नलिखित राज्यों में से सर्वोच्च साक्षरता दर किस राज्य में है ?

Options:

- 1) Orissa
उड़िसा
- 2) Punjab
पंजाब
- 3) Maharashtra
महाराष्ट्र
- 4) Mizoram
मिज़ोरम

Correct Answer: Mizoram

मिज़ोरम

Candidate Answer: Mizoram

मिज़ोरम

Question 38. The minimum number of members that must be present to hold the meeting of the Lok Sabha is

लोकसभा की बैठक आयोजित करने के लिए न्यूनतम कितनी संख्या में सदस्य उपस्थित होने चाहिए ?

Options:

- 1) One-fourth of the total membership
कुल सदस्यता का एक-चौथाई
- 2) One-tenth of the total membership
कुल सदस्यता का दसवां भाग
- 3) Fifty percent strength of the Lok Sabha
लोकसभा की पचास प्रतिशत संख्या
- 4) At least hundred members
न्यूनतम सौ सदस्य

Correct Answer: One-tenth of the total membership

कुल सदस्यता का दसवां भाग

Candidate Answer: One-fourth of the total membership

कुल सदस्यता का एक-चौथाई

Question 39. India's population growth is characterized by

भारत में जनसंख्या वृद्धि की क्या विशेषता है ?

Options:

- 1) An increase in rate of death
मृत्यु दर में वृद्धि
- 2) An increase in the ratio of females
महिलाओं के अनुपात में वृद्धि
- 3) An increase in the birth rate and declining death rate
जन्म-दर में वृद्धि किन्तु मृत्यु दर में कमी
- 4) Increasing number of old people
वृद्ध व्यक्तियों की बढ़ती संख्या

Correct Answer: An increase in the birth rate and declining death rate

जन्म-दर में वृद्धि किन्तु मृत्यु दर में कमी

Candidate Answer: An increase in the birth rate and declining death rate

जन्म-दर में वृद्धि किन्तु मृत्यु दर में कमी

Question 40. What will you call a system of taxation under which the poorer sections are taxed at higher rates than the richer sections?

आप ऐसी कर प्रणाली को क्या कहेंगे जिसमें निर्धन वर्ग पर धनी वर्ग की अपेक्षा अधिक कर लगाया जाता है ?

Options:

- 1) Progressive tax
प्रगामी कर
- 2) Proportional tax
आनुपातिक कर
- 3) Regressive tax
पश्चगामी कर
- 4) Degressive tax
अवक्रमिक कर

Correct Answer: Regressive tax

पश्चगामी कर

Candidate Answer: Degressive tax
अवक्रमिक कर

Question 41. The most important function of an interest group is to

किसी 'हितबद्ध गट' का सबसे महत्वपूर्ण कार्य क्या होता है ?

Options:

1) form the government

सरकार बनाना

2) alter government policies to its liking

अपनी पसंद के अनुसार सरकारी नीतियों में परिवर्तन

3) build up public opinion

जनमत बनाना

4) Contest elections

चुनाव लड़ना

Correct Answer: alter government policies to its liking

अपनी पसंद के अनुसार सरकारी नीतियों में परिवर्तन

Candidate Answer: form the government

सरकार बनाना

Question 42. Which among the following is not correctly paired?

निम्नलिखित में से कौन-सा युग्म सही नहीं है ?

Options:

1) Shivaji-Afzal Khan

शिवाजी-अफजल खां

2) Nurjahan-Mahabat Khan

नूरजहां-महाबत खां

3) Akbar-Rana Pratap

अकबर-राणा प्रताप

4) Babar-Bairam Khan

बाबर-बैरम खां

Correct Answer: Babar-Bairam Khan

बाबर-बैरम खां

Candidate Answer: Nurjahan-Mahabat Khan

नूरजहां-महाबत खां

Question 43. Which of the following deserts is rich in gold reserves?

निम्नलिखित में से किस रेगिस्तान में अत्याधिक मात्रा में स्वर्ण भंडार पाया जाता है ?

Options:

1) Arabian

अरब

2) Thar

थार

3) Mongolian

मंगोलिया

4) Atacama

आटाकामा

Correct Answer: Atacama

आटाकामा

Candidate Answer: Atacama

आटाकामा

Question 44. Lacrymal glands are situated in the

अश्रु ग्रंथी कहां स्थित होती हैं ?

Options:

- 1) Palms
हथेलियों में
- 2) Buccal cavity
पुख गुहिका में
- 3) Eye orbit
नेत्र गुहा में
- 4) Stomach
पेट में

Correct Answer: Eye orbit

नेत्र गुहा में

Candidate Answer: Eye orbit

नेत्र गुहा में

Question 45. The most extensive use of molasses after fermentation is for producing

किण्वन के पश्चात सबसे व्यापक रूप में "मोलासे" का प्रयोग निम्नलिखित में से क्या तैयार करने के लिए किया जाता है ?

Options:

- 1) Methanol
मेथेनॉल
- 2) Sugar
चीनी
- 3) Ethanol
ऐथेनॉल
- 4) Sugarcane
गन्ना

Correct Answer: Ethanol

ऐथेनॉल

Candidate Answer: [NOT ANSWERED]

Question 46. Acid rain is caused due to pollution of atmosphere by

अम्ल वर्षा निम्नलिखित में से किसके द्वारा हुए प्रदूषण से होती है ?

Options:

- 1) oxides of nitrogen and sulphur
नाइट्रोजन और सल्फर के ऑक्साइड से
- 2) oxides of nitrogen and phosphorous
नाइट्रोजन और फास्फोरस के ऑक्साइड से
- 3) oxides of carbon and nitrogen
कार्बन और नाइट्रोजन के ऑक्साइड से
- 4) oxides of nitrogen and methane
नाइट्रोजन और मीथेन के ऑक्साइड से

Correct Answer: oxides of nitrogen and sulphur

नाइट्रोजन और सल्फर के ऑक्साइड से

Candidate Answer: oxides of nitrogen and sulphur

नाइट्रोजन और सल्फर के ऑक्साइड से

Question 47. The dispute over Siachin Glacier is between

सियाचिन ग्लेशियर को लेकर किन देशों के बीच विवाद है ?

Options:

- 1) India and China
भारत और चीन
- 2) India and Afghanistan
भारत और अफगानिस्तान
- 3) India and Pakistan
भारत और पाकिस्तान
- 4) India and Nepal
भारत और नेपाल

Correct Answer: India and Pakistan

भारत और पाकिस्तान

Candidate Answer: India and China

भारत और चीन

Question 48. Who wrote the famous line: 'A thing of beauty is a joy forever'

यह प्रसिद्ध युक्ती किसने लिखी थी : "A thing of beauty is a joy forever"

Options:

- 1) John Keats
जॉन कीट्स
- 2) V.S. Naipaul
वी.एस. नाइपॉल
- 3) Sir Richard Burton
सर रिचर्ड बर्टन
- 4) Larry Collins
लैरी कॉलिन्स

Correct Answer: John Keats

जॉन कीट्स

Candidate Answer: John Keats

जॉन कीट्स

Question 49. Who was the first lady Governor of an Indian State?

किसी भारतीय राज्य की प्रथम महिला राज्यपाल कौन थी ?

Options:

- 1) Mrs. Sucheta Kripalani
श्रीमती सुचेता कृपलानी
- 2) Miss Padmaja Naidu
कु. पद्मजा नायडू
- 3) Mrs Tarkeswari Sinha
श्रीमती तारकेश्वरी सिन्हा
- 4) Mrs. Sarojini Naidu
श्रीमती सरोजनी नायडू

Correct Answer: Mrs. Sucheta Kripalani

श्रीमती सुचेता कृपलानी

Candidate Answer: Mrs. Sarojini Naidu

श्रीमती सरोजनी नायडू

Question 50. Which of the following is an application protocol?

निम्नलिखित में से कौन-सा एप्लिकेशन प्रोटोकॉल है ?

Options:

- 1) HTTP
- 2) TCP
- 3) IP
- 4) UDP

Correct Answer: HTTP

Candidate Answer: HTTP

Question 51. A clock gains 15 minutes per day. If it is set right at 12 noon, the time it shows at 4 AM is

एक घड़ी प्रत्येक दिन 15 मिनट आगे हो जाती है। यदि उसे दोपहर 12 बजे सही सेट करके चलाया जाता है, तो प्रातः 4 बजे वह क्या समय दिखाएगी ?

Options:

- 1) 4.20 AM
4.20 प्रातः
- 2) 4.30 AM
4.30 प्रातः
- 3) 4.02 AM
4.02 प्रातः
- 4) 4.10 AM
4.10 प्रातः

Correct Answer: 4.10 AM

4.10 प्रातः

Candidate Answer: 4.20 AM

4.20 प्रातः

Question 52. A home theatre set is Rs. 4950. If two successive discounts of 20% and 15% are given, then its selling price is

एक होम थियेटर सेट Rs. 4950 का है। यदि उस पर 20% और 15% की दो क्रमिक छूट दी जाए तो उसका विक्रय मूल्य क्या होगा ?

Options:

1) Rs.3366

2) Rs.6633

3) Rs.3636

4) Rs.6363

Correct Answer: Rs.3366

Candidate Answer: Rs.3366

Question 53. If 15% of x is three times of 10% of y, then x:y =

यदि x का 15% , y के 10% का तिगुना है, तो x : y किसके बराबर होगा ?

Options:

1) 1:2

2) 2:1

3) 3:2

4) 2:3

Correct Answer: 2:1

Candidate Answer: 3:2

Question 54. A bookseller bought 500 text books for ₹ 20,000. He wanted to sell them at a profit so that he get 50 books free. At what profit percent should he sell them?

किसी पुस्तक विक्रेता ने 500 पाठ्य पुस्तकें ₹ 20000 में खरीदी। वह उन्हें ऐसे लाभ पर बेचना चाहता है ताकि उसे 50 पुस्तकें निःशुल्क पड़े। उसे कितने प्रतिशत लाभ पर अपनी पुस्तकें बेचनी चाहिए ?

Options:

1) 10

2) 20

3) 15

4) 10.5

Correct Answer: 10

Candidate Answer: 10.5

Question 55. 20% of a man's salary is paid as rent, 60% are his living expenses and 10% are his savings. If he spends remaining ₹ 30 on the education of his children, find his salary

किसी व्यक्ति के वेतन का 20% भाग किराए पर खर्च होता है, 60% भाग जीवन-यापन पर खर्च होता है और 10% भाग की वह बचत करता है। यदि वह शेष ₹ 30 बच्चों की शिक्षा पर खर्च करे, तो उसका वेतन कितना है ?

Options:

1) 300

2) 900

3) 3000

4) 9000

Correct Answer: 300

Candidate Answer: 300

Question 56. A gun is fired at a distance of 6.64 km away from Ram. He hears the sound 20 seconds later. Then the speed of sound is

एक बन्दूक राम से 6.64 कि.मी. की दूरी से दागी जाती है। राम 20 सेकेण्ड बाद उसकी आवाज़ (ध्वनि) सुनता है। उस ध्वनि की गति क्या है ?

Options:

- 1) 664 m/s
664 मी./से.
- 2) 664 km/s
664 कि.मी./से.
- 3) 332 m/s
332 मी./से.
- 4) 332 km/s
332 कि.मी./से.

Correct Answer: 332 m/s

332 मी./से.

Candidate Answer: [NOT ANSWERED]

Question 57. The simple interest on Rs. 2000 for 2 years at Rs. 75 per thousand per annum will be

Rs. 2000 पर Rs. 75 प्रति हजार वार्षिक दर पर 2 वर्ष का साधारण ब्याज क्या होगा ?

Options:

- 1) Rs.150
- 2) Rs.300
- 3) Rs.600
- 4) Rs.400

Correct Answer: Rs.300

Candidate Answer: Rs.300

Question 58. If $x = 1 + \sqrt{2} + \sqrt{3}$, then the value of $x^2 - 2x - 4$ is

यदि $x = 1 + \sqrt{2} + \sqrt{3}$ हो, तो $x^2 - 2x - 4$ का मान बताएं ?

Options:

- 1) $\sqrt{6}$
- 2) $2\sqrt{3}$
- 3) $3\sqrt{2}$
- 4) $2\sqrt{6}$

Correct Answer: $2\sqrt{6}$

Candidate Answer: [NOT ANSWERED]

Question 59.

If $\frac{(a+b)}{\sqrt{ab}} = \frac{2}{1}$, then the value of $(a-b)$ is

यदि $\frac{(a+b)}{\sqrt{ab}} = \frac{2}{1}$ हो, तो $(a-b)$
का मान क्या होगा ?

Options:

- 1) 1
- 2) 0
- 3) -1
- 4) 2

Correct Answer: 0

Candidate Answer: 0

Question 60. If ΔABC is an equilateral triangle of side 16 cm, then the length of altitude is

यदि ΔABC 16 से.मी. भुजा वाला समबाहु त्रिकोण हो, तो त्रिकोण कि ऊँचाई बताएं ?

Options:

- 1) $2\sqrt{3}$ cm
2) $4\sqrt{3}$ cm
- 3) $8\sqrt{3}$ cm
- 4) $5\sqrt{3}$ cm

Correct Answer: $8\sqrt{3}$ cm

$8\sqrt{3}$ से.मी.

Candidate Answer: [NOT ANSWERED]

Question 61.O is the circumcentre of ΔABC . If $AO = 8$ cm, then the length of BO is

ΔABC का O परिकेन्द्र है। यदि $AO = 8$ से.मी. हो, तो BO की लम्बाई बताएं ?

Options:

- 1) 12 cm
2) 3 cm
- 3) 6 cm
- 4) 8 cm

Correct Answer: 8 cm

8 से.मी.

Candidate Answer: 6 cm

6 से.मी.

Question 62.Given that $\tan(\theta + 15^\circ) = \sqrt{3}$. Then the value of θ is?

यह मानते हुए कि $\tan(\theta + 15^\circ) = \sqrt{3}$, तो θ का मान बताएं ?

Options:

- 1) 15°
- 2) 75°
- 3) 45°
- 4) 65°

Correct Answer: 45°

Candidate Answer: 45°

Question 63.The least number of square tiles of side 41 cms required to pave the ceiling of a room of size 15m 17cm long and 9m 2 cm broad is:

15 मीटर 17 से.मी. लम्बे और 9 मीटर 2 से.मी. चौड़े कमरे की छत बनाने के लिए 41 से.मी. फलक वाली न्यूनतम कितनी वर्गाकार टाइलों की आवश्यकता होगी ?

Options:

- 1) 902
- 2) 656
- 3) 738
- 4) 814

Correct Answer: 814

Candidate Answer: [NOT ANSWERED]

Question 64.The average of fruits offered in a temple in a week was 75. The average of fruits offered in six days excluding Tuesday was 72. How many fruits were offered on Tuesday?

किसी मन्दिर में एक सप्ताह में औसतन 75 फल चढ़ाए गए। मंगलवार को छोड़ कर शेष 6 दिनों में औसतन 72 फल चढ़ाए गए। मंगलवार के दिन कितने फल चढ़ाए गए ?

Options:

1) 90

2) 93

3) 72

4) 92

Correct Answer: 93

Candidate Answer: 93

Question 65.

If $a = x^{\frac{1}{3}}y^{\frac{1}{3}} + x^{\frac{-1}{3}}y^{\frac{-1}{3}}$, then $a^3 - 3ay - x$ is equal to

यदि $a = x^{\frac{1}{3}}y^{\frac{1}{3}} + x^{\frac{-1}{3}}y^{\frac{-1}{3}}$, हो तो $a^3 - 3ay - x$ किस्के बरबर होगा

Options:

1) $\frac{y^2}{x}$

2) $\frac{x^2}{y}$

3) $\frac{a^2}{x}$

4) $\frac{a^2}{y}$

Correct Answer:

$\frac{y^2}{x}$

Candidate Answer: [NOT ANSWERED]

Question 66.

If $x + \frac{1}{x} = 5$, then the value of $\frac{6x}{x^2 + x + 1}$ is,

यदि $x + \frac{1}{x} = 5$ हो, तो $\frac{6x}{x^2 + x + 1}$
का मान बताइए ?

Options:

1) 1

2) 2

3) 3

4) 4

Correct Answer: 1

Candidate Answer: 1

Question 67. If $a > b > 0$, $AB = a - b$ cm, $BC = 2\sqrt{ab}$ cm, then $\angle ABC$ is

यदि $a > b > 0$, $AB = a - b$ से.मी., $BC = 2\sqrt{ab}$ से.मी. हो, तो $\angle ABC$ का मान क्या होगा ?

Options:

- 1) 45°
- 2) 60°
- 3) 90°
- 4) 120°

Correct Answer: 90°

Candidate Answer: [NOT ANSWERED]

Question 68. PR is a tangent to a circle with centre O and radius 4 cm at point Q. If $\angle POR = 90^\circ$, OR = 5 cm and OP = $\frac{20}{3}$ cm, then the length of PR is:

PR, O केन्द्र वाले वृत्त की स्पर्श रेखा है और Q बिन्दु पर त्रिज्या 4 सेमी है। यदि $\angle POR = 90^\circ$, OR = 5 से.मी. और OP = $\frac{20}{3}$ से.मी. हो तो PR की लम्बाई बताइए ?

Options:

- 1) 3 cm
- 2)

$$\frac{16}{3} \text{ cm}$$

3)

$$\frac{23}{3} \text{ cm}$$

4)

$$\frac{25}{3} \text{ cm}$$

Correct Answer:

$$\frac{25}{3} \text{ cm}$$

Candidate Answer: [NOT ANSWERED]

Question 69. From a point, 40 m apart from the foot of a tower, the angle of elevation of its top is 60° . The height of the tower is

किसी मीनार के आधार से 40 मीटर की दूरी पर, एक बिन्दु से, मीनार के शीर्ष भाग का उन्नयन कोण 60° है। मीनार की ऊँचाई बताइए ?

Options:

- 1) $40\sqrt{3}$
- 2) $40\sqrt{3}$ cm
- 3) $40\sqrt{3}$ m
- 4) $40\sqrt{2}$ m

Correct Answer: $40\sqrt{3}$ m

$40\sqrt{3}$ मी.

Candidate Answer: $40\sqrt{3}$ m

$40\sqrt{3}$ मी.

Question 70. The radius of a sphere and hemisphere are same. The ratio of their total surface area is

किसी गोलक और अर्धगोलक की त्रिज्या एक समान है। उनके कुल प्रष्ठ के क्षेत्रफल का अनुपात बताएं ?

Options:

- 1) 3:1
- 2) 2:1
- 3) 3:2
- 4) 4:3

Correct Answer: 4:3

Candidate Answer: [NOT ANSWERED]

Question 71. Two equal arcs of two circles subtend angle of 60° and 75° at the centre. The ratio of the radii of the two circles is

दो वृत्तों की दो बराबर की चाप, केन्द्र में 60° और 75° के कोण अन्तरित करती हैं। दोनों वृत्तों की त्रिज्याओं का अनुपात क्या होगा ?

Options:

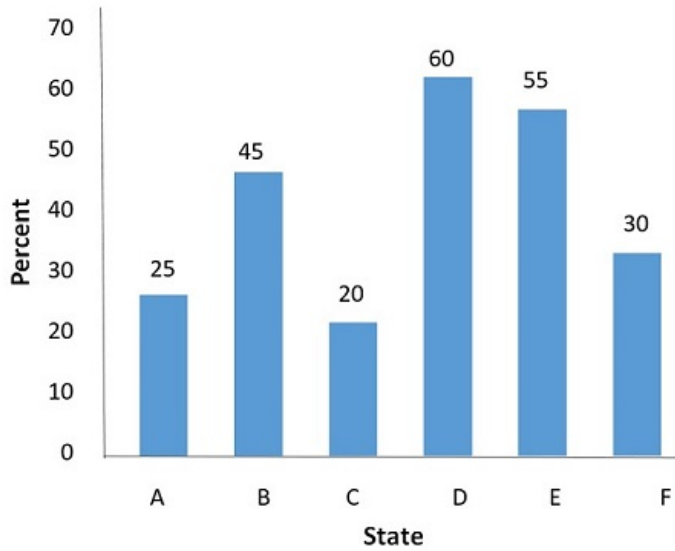
- 1) $5/4$
- 2) $3/2$
- 3) $4/5$
- 4) $2/3$

Correct Answer: $5/4$

Candidate Answer: $4/5$

Question 72. Study the following graph carefully and answer the questions

निम्नलिखित ग्राफ को ध्यान से पढ़ें, और निम्नलिखित प्रश्नों के उत्तर दीजिए।



Which state has the maximum percentage of electrified villages?

किस राज्य में अधिकतम प्रतिशत गाँव में बिजली हैं ?

Options:

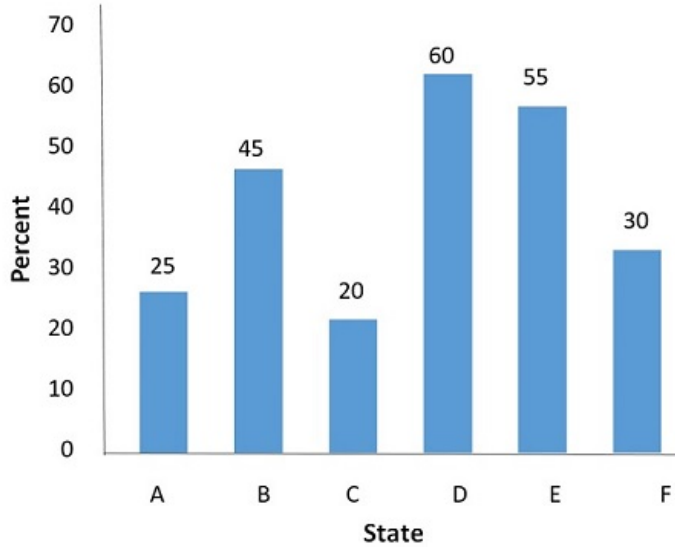
- 1) B
- 2) C
- 3) D
- 4) F

Correct Answer: C

Candidate Answer: D

Question 73. Study the following graph carefully and answer the questions

निम्नलिखित ग्राफ को ध्यान से पढ़ें, और निम्नलिखित प्रश्नों के उत्तर दीजिए।



If the Central Government desires to give aid for speedy electrification starting from states with least electrification, which state will get fourth rank in order of priority?

यदि केन्द्र सरकार तेजी से बिजली लाने के लिए सहायता देना चाहे और ऐसे राज्यों को जिनमें सबसे कम बिजली पहुँची है, तो प्राथमिकता के क्रम में चौथे नम्बर पर कौन-सा राज्य होगा ?

Options:

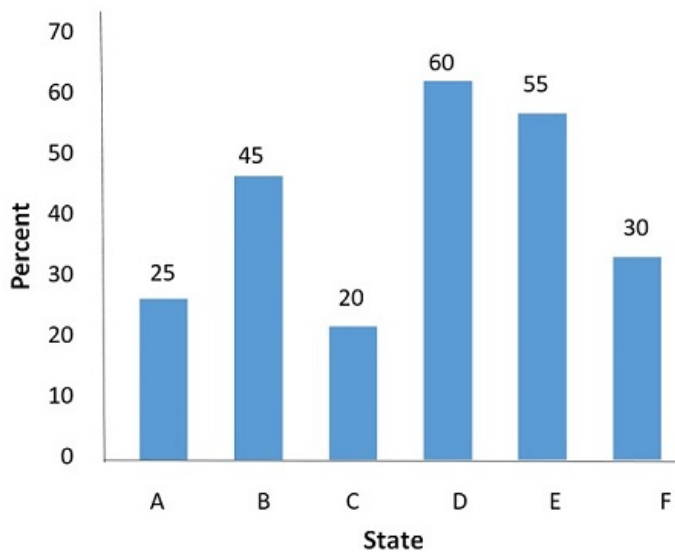
- 1) F
- 2) C
- 3) E
- 4) B

Correct Answer: F

Candidate Answer: B

Question 74. Study the following graph carefully and answer the questions

निम्नलिखित ग्राफ को ध्यान से पढ़ें, और निम्नलिखित प्रश्नों के उत्तर दीजिए।



How many States have at least 60% or more electrified villages?

कितने राज्य ऐसे हैं जिनमें कम से कम 60% या अधिक गाँव में बिजली पहुँची है ?

Options:

- 1) Five
पाँच
- 2) Three
तीन
- 3) Four
चार
- 4) Two
दो

Correct Answer: Three

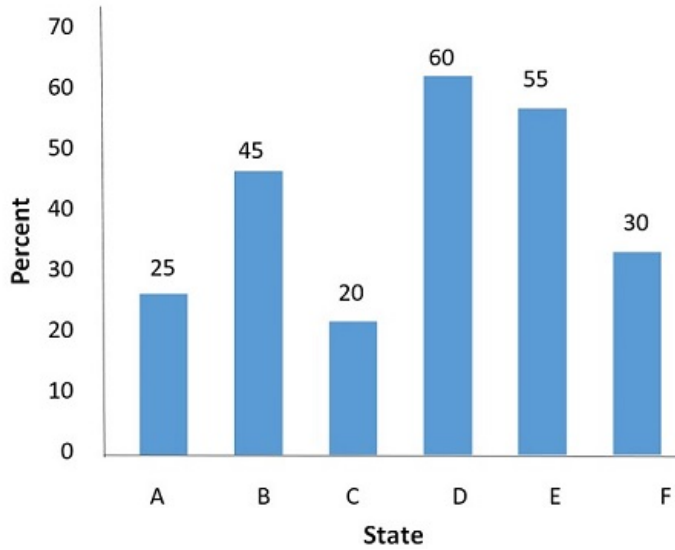
तीन

Candidate Answer: Three

तीन

Question 75. Study the following graph carefully and answer the questions

निम्नलिखित ग्राफ को ध्यान से पढ़ें, और निम्नलिखित प्रश्नों के उत्तर दीजिए।



Which state has twice the percentage of villages electrified in comparison to state D?

किस राज्य में D राज्य की तुलना में बिजली युक्त गाँवों का प्रतिशत दुगना है ?

Options:

- 1) A
- 2) E
- 3) F
- 4) C

Correct Answer: C

Candidate Answer: F

Question 76. Four words are given, out of which only one word is spelt correctly. Choose the correctly spelt word and click the button corresponding to it.

Options:

- 1) Conniosseur
- 2) Connoisseur
- 3) Connossieur
- 4) Connosseieur

Correct Answer: Connoisseur

Candidate Answer: [NOT ANSWERED]

Question 77. In the following question, out of the four alternatives, choose the word which is opposite in meaning to the given word and click the button corresponding to it.

SOOTHE

Options:

- 1) QUENCH
- 2) MITIGATE
- 3) HEAL
- 4) AGITATE

Correct Answer: AGITATE

Candidate Answer: [NOT ANSWERED]

Question 78. In the following question, out of the four alternatives, choose the word which best expresses the meaning of the given word and click the button corresponding to it.

DEVASTATION

Options:

- 1) DESTRUCTION
- 2) CONSTRUCTION
- 3) SEPARATION
- 4) FRUSTRATION

Correct Answer: DESTRUCTION

Candidate Answer: [NOT ANSWERED]

Question 79. Out of the four alternatives, choose the one which can be substituted for the given words/sentences and click the button corresponding to it.

An exact copy

Options:

- 1) Facsimile
- 2) Twin
- 3) Mirror
- 4) Clone

Correct Answer: Facsimile

Candidate Answer: Mirror

Question 80. Out of the four alternatives, choose the one which can be substituted for the given words/sentences and click the button corresponding to it.

To give money to agents for sales.

Options:

- 1) Salary
- 2) Commission
- 3) Fee
- 4) Incentive

Correct Answer: Commission

Candidate Answer: Commission

Question 81. Out of the four alternatives, choose the one which can be substituted for the given words/sentences and click the button corresponding to it.

A person who is working in the same institution.

Options:

- 1) Guide
- 2) Collector
- 3) Captain
- 4) Colleague

Correct Answer: Colleague

Candidate Answer: Captain

Question 82. In each of the questions, four alternatives are given for the Idiom/Phrase. Choose the alternative which best expresses the meaning of the Idiom/Phrase and click the button corresponding to it.

Cat-nap

Options:

- 1) Rest
- 2) Fitful sleep
- 3) Long sleep
- 4) Short sleep

Correct Answer: Short sleep

Candidate Answer: [NOT ANSWERED]

Question 83. In each of the questions, four alternatives are given for the Idiom/Phrase. Choose the alternative which best expresses the meaning of the Idiom/Phrase and click the button corresponding to it.

To pull a long face

Options:

- 1) Looked happily
- 2) Looked surprised
- 3) Looked sad
- 4) Looked calm

Correct Answer: Looked sad

Candidate Answer: Looked surprised

Question 84. In each of the questions, four alternatives are given for the Idiom/Phrase. Choose the alternative which best expresses the meaning of the Idiom/Phrase and click the button corresponding to it.

Fit her like a glove.

Options:

- 1) Too large
- 2) Too shabby
- 3) Too tight
- 4) Perfectly

Correct Answer: Perfectly

Candidate Answer: Perfectly

Question 85. The sentences given with blanks are to be filled with an appropriate word(s). Four alternatives are suggested for each question. For each question, choose the correct alternative and click the button corresponding to it.

Health is too important to be _____.

Options:

- 1) discarded
- 2) disposed
- 3) neglected
- 4) detested

Correct Answer: neglected

Candidate Answer: [NOT ANSWERED]

Question 86. The sentences given with blanks are to be filled with an appropriate word(s). Four alternatives are suggested for each question. For each question, choose the correct alternative and click the button corresponding to it.

I am _____ this crime.

Options:

- 1) ignorant on
- 2) innocent of
- 3) indebted to
- 4) ignoring

Correct Answer: innocent of

Candidate Answer: innocent of

Question 87. The sentences given with blanks are to be filled with an appropriate word(s). Four alternatives are suggested for each question. For each question, choose the correct alternative and click the button corresponding to it.

I was _____ paying the toll tax.

Options:

- 1) free from
- 2) exonerated from
- 3) exempted from
- 4) exposed to

Correct Answer: exempted from

Candidate Answer: [NOT ANSWERED]

Question 88. In the following questions, one part of the sentence may have an error. Find out which part of the sentence has an error and click the button corresponding to it. If the sentence is free from error, click the "No error" option.

I used (A)/ a pair of black trousers (B) / for a week (C)/ No error (D)

Options:

- 1) A
- 2) B
- 3) C
- 4) D

Correct Answer: A

Candidate Answer: [NOT ANSWERED]

Question 89. In the following questions, one part of the sentence may have an error. Find out which part of the sentence has an error and click the button corresponding to it. If the sentence is free from error, click the "No error" option.

He has made a mistake (A)/ of which (B) / I am certain (C) / No error (D)

Options:

- 1) A
- 2) B
- 3) C
- 4) D

Correct Answer: D**Candidate Answer:** [NOT ANSWERED]

Question 90. In the following questions, one part of the sentence may have an error. Find out which part of the sentence has an error and click the button corresponding to it. If the sentence is free from error, click the "No error" option.

He was not allowed (A) / for the teacher (B) / to read in a low voice (C) / no error (D)

Options:

- 1) A
- 2) B
- 3) C
- 4) D

Correct Answer: B**Candidate Answer:** [NOT ANSWERED]

Question 91. A passage is given with 5 questions following it. Read the passage carefully and choose the best answer to each question out of the four alternatives and click the button corresponding to it.

My mom grew up in a traditional Chinese family in which open expressions of love were never encouraged. When she had me and my three siblings, she treated us with the same hard hand. It was not that she was a slave driver or anything, but she never openly showed affection. Instead, she demonstrated that she cared in more practical ways.

My parents couldn't have been more different emotionally. My dad is a really open-hearted person who constantly showers us with hugs and kisses no matter the occasion. After much persuasion from him, my mother did try to change, but it was clear that she never felt quite right expressing her emotions. Eventually, she reverted to her old self.

The difference between my parents was never starker than whenever I brought home good test results from school. My dad would practically jump with joy, offering warm and affectionate words of congratulations, and my mother? "Ah, good, good" she would typically say with a tense smile etched on her face. "Do better next time, OK?"

I tried not to hold a grudge against her for being so reserved. That was just her way. I reasoned.

Why did the narrator not bear a grudge against her mother?

Options:

- 1) She felt that her mother had that kind of nature
- 2) She was satisfied with her father's love
- 3) Her mother was incapable of loving
- 4) Her mother was angry with everyone

Correct Answer: She felt that her mother had that kind of nature**Candidate Answer:** Her mother was incapable of loving

Question 92. A passage is given with 5 questions following it. Read the passage carefully and choose the best answer to each question out of the four alternatives and click the button corresponding to it.

My mom grew up in a traditional Chinese family in which open expressions of love were never encouraged. When she had me and my three siblings, she treated us with the same hard hand. It was not that she was a slave driver or anything, but she never openly showed affection. Instead, she demonstrated that she cared in more practical ways.

My parents couldn't have been more different emotionally. My dad is a really open-hearted person who constantly showers us with hugs and kisses no matter the occasion. After much persuasion from him, my mother did try to change, but it was clear that she never felt quite right expressing her emotions. Eventually, she reverted to her old self.

The difference between my parents was never starker than whenever I brought home good test results from school. My dad would practically jump with joy, offering warm and affectionate words of congratulations, and my mother? "Ah, good, good" she would typically say with a tense smile etched on her face. "Do better next time, OK?"

I tried not to hold a grudge against her for being so reserved. That was just her way. I reasoned.

The narrator's mother reverted to her old self because

Options:

- 1) she fought with her husband
- 2) she did not feel comfortable in revealing her emotions
- 3) she was angry with the children
- 4) her husband wanted her to be her old self

Correct Answer: she did not feel comfortable in revealing her emotions**Candidate Answer:** her husband wanted her to be her old self

Question 93. A passage is given with 5 questions following it. Read the passage carefully and choose the best answer to each question out of the four alternatives and click the button corresponding to it.

My mom grew up in a traditional Chinese family in which open expressions of love were never encouraged. When she had me and my three siblings, she treated us with the same hard hand. It was not that she was a slave driver or anything, but she never openly showed affection. Instead, she demonstrated that she cared in more practical ways.

My parents couldn't have been more different emotionally. My dad is a really open-hearted person who constantly showers us with hugs and kisses no matter the occasion. After much persuasion from him, my mother did try to change, but it was clear that she never felt quite right expressing her emotions. Eventually, she reverted to her old self.

The difference between my parents was never starker than whenever I brought home good test results from school. My dad would practically jump with joy, offering warm and affectionate words of congratulations, and my mother? "Ah, good, good" she would typically say with a tense smile etched on her face. "Do better next time, OK?"

I tried not to hold a grudge against her for being so reserved. That was just her way. I reasoned.

The narrator's mother didn't appreciate the narrator's results because

Options:

- 1) the marks were not good
- 2) the marks could be better
- 3) she wasn't very expressive
- 4) she was tense

Correct Answer: she wasn't very expressive

Candidate Answer: she wasn't very expressive

Question 94. A passage is given with 5 questions following it. Read the passage carefully and choose the best answer to each question out of the four alternatives and click the button corresponding to it.

My mom grew up in a traditional Chinese family in which open expressions of love were never encouraged. When she had me and my three siblings, she treated us with the same hard hand. It was not that she was a slave driver or anything, but she never openly showed affection. Instead, she demonstrated that she cared in more practical ways.

My parents couldn't have been more different emotionally. My dad is a really open-hearted person who constantly showers us with hugs and kisses no matter the occasion. After much persuasion from him, my mother did try to change, but it was clear that she never felt quite right expressing her emotions. Eventually, she reverted to her old self.

The difference between my parents was never starker than whenever I brought home good test results from school. My dad would practically jump with joy, offering warm and affectionate words of congratulations, and my mother? "Ah, good, good" she would typically say with a tense smile etched on her face. "Do better next time, OK?"

I tried not to hold a grudge against her for being so reserved. That was just her way. I reasoned.

How is the narrator's dad different from her mother?

Options:

- 1) He is dark
- 2) He expresses his feelings openly
- 3) He dislikes children
- 4) He is persuasive in nature

Correct Answer: He expresses his feelings openly

Candidate Answer: He expresses his feelings openly

Question 95. A passage is given with 5 questions following it. Read the passage carefully and choose the best answer to each question out of the four alternatives and click the button corresponding to it.

My mom grew up in a traditional Chinese family in which open expressions of love were never encouraged. When she had me and my three siblings, she treated us with the same hard hand. It was not that she was a slave driver or anything, but she never openly showed affection. Instead, she demonstrated that she cared in more practical ways.

My parents couldn't have been more different emotionally. My dad is a really open-hearted person who constantly showers us with hugs and kisses no matter the occasion. After much persuasion from him, my mother did try to change, but it was clear that she never felt quite right expressing her emotions. Eventually, she reverted to her old self.

The difference between my parents was never starker than whenever I brought home good test results from school. My dad would practically jump with joy, offering warm and affectionate words of congratulations, and my mother? "Ah, good, good" she would typically say with a tense smile etched on her face. "Do better next time, OK?"

I tried not to hold a grudge against her for being so reserved. That was just her way. I reasoned.

Why was the narrator's mother not expressive of her love?

Options:

- 1) She was of Chinese origin
- 2) It was not her nature
- 3) She was a harsh person
- 4) The tradition at her home didn't allow her.

Correct Answer: The tradition at her home didn't allow her.

Candidate Answer: She was a harsh person

Question 96. A sentence/a part of the sentence is underlined. Four alternatives are given to the underlined part which will improve the sentence. Choose the correct alternative and click the button corresponding to it. In case no improvement is needed, click the button corresponding to "No improvement".

Both of us had a different opinion about it.

Options:

- 1) Both of us has
- 2) Each of us had
- 3) Each of us have
- 4) No improvement

Correct Answer: Each of us had

Candidate Answer: [NOT ANSWERED]

Question 97. A sentence/a part of the sentence is underlined. Four alternatives are given to the underlined part which will improve the sentence. Choose the correct alternative and click the button corresponding to it. In case no improvement is needed, click the button corresponding to "No improvement".

The trade union is hell bent at getting its demands fulfilled

Options:

- 1) hell bent in
- 2) hell bent about
- 3) hell bent on
- 4) No improvement

Correct Answer: hell bent on

Candidate Answer: [NOT ANSWERED]

Question 98. A sentence/a part of the sentence is underlined. Four alternatives are given to the underlined part which will improve the sentence. Choose the correct alternative and click the button corresponding to it. In case no improvement is needed, click the button corresponding to "No improvement".

The police had to break the door to get in

Options:

- 1) to break up
- 2) to break in
- 3) to break down
- 4) No improvement

Correct Answer: to break down

Candidate Answer: [NOT ANSWERED]

Question 99. A sentence/a part of the sentence is underlined. Four alternatives are given to the underlined part which will improve the sentence. Choose the correct alternative and click the button corresponding to it. In case no improvement is needed, click the button corresponding to "No improvement".

The plane landed and shot towards the airport

Options:

- 1) taxied
- 2) drove
- 3) wheeled
- 4) No improvement

Correct Answer: taxied

Candidate Answer: [NOT ANSWERED]

Question 100. A sentence/a part of the sentence is underlined. Four alternatives are given to the underlined part which will improve the sentence. Choose the correct alternative and click the button corresponding to it. In case no improvement is needed, click the button corresponding to "No improvement".

After a hard days work, I just want to go home.

Options:

- 1) hard day's work
- 2) hard days' work
- 3) hard day work
- 4) No improvement

Correct Answer: hard day's work

Candidate Answer: [NOT ANSWERED]