

SSC CGL Tier I - 5th August 2017 – Slot 1

QID : 1 - In the following question, select the related word pair from the given alternatives.

Power : Watt : : ? : ?

ठननठलठखत Pff म" ढदए गए ढवकठपा म" से संबंढधत शङ्द युम को चुठनए।

ऊजा : वॉट : : ? : ?

Options:

1) Pressure : Newton

दाब : =यूटन

2) Force : Pascal

बल : पाऱकल

3) Resistance : Mho

पठतरोध : मो

4) Work : Joule

काय : जूल

Correct Answer: Work : Joule

काय : जूल

Candidate Answer: Work : Joule

काय : जूल

QID : 2 - In the following question, select the related letters from the given alternatives.

NPBG : OQCH : : AJOT : ?

ठननठलठखत Pff म" ढदए गए ढवकठपा म" से संबंढधत आरा को चुठनए।

NPBG : OQCH : : AJOT : ?

Options:

1) BKPU

2) BUPK

3) BHKP

4) HBKU

Correct Answer: BKPU

Candidate Answer: BKPU

QID : 3 - In the following question, select the related number from the given alternatives.

101 : 10201 : : 107 : ?

ठननठलठखत Pff म" ढदए गए ढवकठपा म" से संबंढधत सं"या को चुठनए।

101 : 10201 : : 107 : ?

Options:

1) 10707

2) 10749

3) 11449

4) 11407

Correct Answer: 11449

Candidate Answer: 11449

QID : 4 - In the following question, select the odd word from the given alternatives.

ठननठलठखत Pff म" ढदए गए ढवकठपा म" से ढवषम शङ्द को चुठनए।

Options:

- 1) Lion
Yसह
- 2) Leopard
त"आ
- 3) Snake
सॉप
- 4) Tiger
बाघ

Correct Answer: Snake
सॉप

Candidate Answer: Snake
सॉप

QID : 5 - In the following question, select the odd letters from the given alternatives.

अननलखत Pff म" ढदए गए ढवकपा म" से ढवषम आरा को चुनए।

Options:

- 1) NPR
- 2) TVW
- 3) FHJ
- 4) KMO

Correct Answer: TVW

Candidate Answer: TVW

QID : 6 - In the following question, select the odd number from the given alternatives.

अननलखत Pff म" ढदए गए ढवकपा म" से ढवषम सं"या को चुनए।

Options:

- 1) 69
- 2) 59
- 3) 61
- 4) 53

Correct Answer: 69

Candidate Answer: 69

QID : 7 - Arrange the given words in the sequence in which they occur in the dictionary.

1. Ropped
2. Roster
3. Roasted
4. Road
5. Roller

अननलखत शड्दा को शड्दकोश म" आने वाले Wम के अनुसार ढलख"।

1. Ropped
2. Roster
3. Roasted
4. Road
5. Roller

Options:

- 1) 35412
- 2) 45312
- 3) 34512
- 4) 43512

Correct Answer: 43512

Candidate Answer: 43512

QID : 8 - A series is given with one term missing. Select the correct alternative from the given ones that will complete the series.

BCF, CDG, DEH, ?

एक अनुWम ढदया गया है, ढजसम" से एक पद लु"त है। ढदए गए ढवकपा म" से वह सही ढवकपा चुनए, जो अनुWम को पूरा करे।

BCF, CDG, DEH, ?

Options:

- 1) EFI
- 2) EFG
- 3) DFI
- 4) EGI

Correct Answer: EFI

Candidate Answer: EFI

QID : 9 - In the following question, select the missing number from the given series.

2, 5, 12, 27, ?

8नन8ल8खत Pff म" 8दए गए 8वकuपा म" से लुत अंक Kात कह8जए।

2, 5, 12, 27, ?

Options:

- 1) 53
- 2) 56
- 3) 57
- 4) 58

Correct Answer: 58

Candidate Answer: 58

QID : 10 - If 'P 3 Q' means 'P is daughter of Q', 'P 5 Q' means 'P is father of Q', 'P 7 Q' means 'P is mother of Q' and 'P 9 Q' means 'P is sister of Q', then how is J related to K in J 3 L 9 N 3 O 5 K ?

य8द 'P 3 Q' का अथ 'P, Q कह पु7ी है', 'P 5 Q' का अथ 'P, Q का 8पता है', 'P 7 Q' का अथ 'P, Q कह माता है तथा 'P 9 Q' का अथ 'P, Q कह बहन है, तो J 3 L 9 N 3 O 5 K म, J, K से 8कस Pकार संब8धत है?

Options:

- 1) Mother
माता
- 2) Wife
पडनी
- 3) Niece
भांजी
- 4) Daughter
पु7ी

Correct Answer: Niece

भांजी

Candidate Answer: [NOT ANSWERED]

QID : 11 - Rakhi got engaged 10 years ago. Rakhi's present age is $\frac{5}{3}$ of her age at the time of engagement. If the present age of Rakhi's mother is twice that of present age of Rakhi, then what was her mother's age (in years) at the time of her engagement?

राखीकहसगाई 10 वष पहले ई थी। राखीकहवत मान आयु उसकहसगाईकेसमयकह आयुकह $\frac{5}{3}$ है। य8द राखीकहमाँकहवत मान आयु उसकहवत मान आयुकहदोगुनीह", तो राखीकहसगाईकेसमय उसकह माँकह आयु (वषf म") फ्या थी?

Options:

- 1) 50
- 2) 40
- 3) 30
- 4) 60

Correct Answer: 40

Candidate Answer: 40

QID : 12 - In the following question, from the given alternative words, select the word which cannot be formed using the letters of the given word.

Suspensefulness

8दए गए Pff म", 8नन8ल8खत 8वकuपा म" से वह शङ्क चु8नए जो 8दए गए शङ्क के आरा का Pयोग करके नह? बनाया जा सकता है।

Suspensefulness

Options:

- 1) Sense
- 2) Fuels
- 3) Useful
- 4) Fullness

Correct Answer: Fullness

Candidate Answer: Fullness

QID : 13 - In a certain code language, "BAD" is written as "7" and "SAP" is written as "9". How is "BAN" written in that code language?

एक ढवढशड कोड भाषा म, "BAD" को "7" ढलखा जाता है तथा "SAP" को "9" ढलखा जाता है। इस कोड भाषा म "BAN" को ढकस Pकार ढलखा जाएगा?

Options:

1) 8

2) 3

3) 4

4) 6

Correct Answer: 8

Candidate Answer: 8

QID : 14 - In the following question, correct the equation by interchanging two signs.

$$9 \times 3 + 8 \div 4 - 7 = 28$$

ढनढलढखत Pff म, ढक=ही दो गढणतीय संढWयान को आपस म पर5पर बदलकर ढदए गए समीकरण को सही कहढजए।

$$9 \times 3 + 8 \div 4 - 7 = 28$$

Options:

1) x and -

x तथा -

2) + and -

+ तथा -

3) ÷ and +

÷ तथा +

4) x and ÷

x तथा ÷

Correct Answer: x and ÷

x तथा ÷

Candidate Answer: x and ÷

x तथा ÷

QID : 15 - If $4 * 5 \% 3 = 8000$ and $2 * 3 \% 2 = 36$, then

$$4 * 3 \% 3 = ?$$

यढद $4 * 5 \% 3 = 8000$ तथा $2 * 3 \% 2 = 36$ हो, तो

$$4 * 3 \% 3 = ?$$

Options:

1) 432

2) 1728

3) 36

4) 144

Correct Answer: 1728

Candidate Answer: 1728

QID : 16 -

In the following question, select the number which can be placed at the sign of question mark (?) from the given alternatives.

निम्नलिखित प्रश्न में दिए गए विकल्पों में से प्रश्न चिन्ह

(?) के स्थान पर आने वाली संख्या को चुनिए।

	3	
2	31	1
	5	

	4	
2	145	6
	3	

	2	
1	?	7
	5	

Options:

1) 43

2) 49

3) 59

4) 71

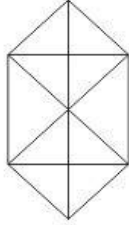
Correct Answer: 71

Candidate Answer: [NOT ANSWERED]

QID : 17 -

How many triangles are there in the given figure?

दी गई आकृति में कितने त्रिभुज हैं?



Options:

1) 20

2) 22

3) 28

4) 32

Correct Answer: 22

Candidate Answer: 20

QID : 18 - In each of the following question below are given some statements followed by some conclusions. Taking the given statements to be true even if they seem to be at variance from commonly known facts, read all the conclusions and then decide which of the given conclusion logically follows the given statements.

Statements:

- I. Some pens are pencils.
- II. All pencils are erasers.

Conclusions:

- I. Some pens are erasers.
- II. No pens are erasers.
- III. Some erasers are pencils.

नीचे दिए गए प्रत्येक प्रश्न में कुछ कथन और उनके बाद उन कथनों पर आधारित कुछ निष्कर्ष दिए गए हैं, हालांकि उनमें 'सामान्य ज्ञान' से भिन्नता हो सकती है। सभी निष्कर्ष 'सही' और 'गलत' निष्कर्ष 'गलत' के लिए दिए गए कौन से निष्कर्ष दिए गए कथनों के आधार पर युक्तिसंगत हैं।

कथन:

- I. कुछ कलम पेयसल हैं।
- II. सभी पेयसल रबर हैं।

निष्कर्ष:

- I. कुछ कलम रबर हैं।
- II. कोई कलम रबर नहीं है।
- III. कुछ रबर पेयसल हैं।

Options:

1) Only conclusion (II) follows.

केवल निष्कर्ष (II) सही है।

2) Only conclusion (I) and (II) follow.

केवल निष्कर्ष (I) तथा निष्कर्ष (II) सही हैं।

3) Only conclusion (I) and (III) follow.

केवल निष्कर्ष (I) तथा निष्कर्ष (III) सही हैं।

4) No conclusion follows.

कोई भी निष्कर्ष सही नहीं है।

Correct Answer: Only conclusion (I) and (III) follow.

केवल निष्कर्ष (I) तथा निष्कर्ष (III) सही हैं।

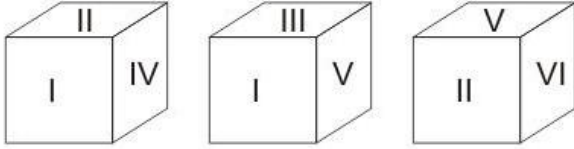
Candidate Answer: Only conclusion (I) and (III) follow.

केवल निष्कर्ष (I) तथा निष्कर्ष (III) सही हैं।

QID: 19 -

Three positions of a cube are shown below. What will come opposite to face containing 'I'?

नीचे एक घन की तीन अवस्थाएँ दर्शायी गयी है। रोमन अंक 'I' के विपरीत फलक पर कौन सा रोमन अंक आयेगा?



Options:

- 1) VI
- 2) IV
- 3) II
- 4) V

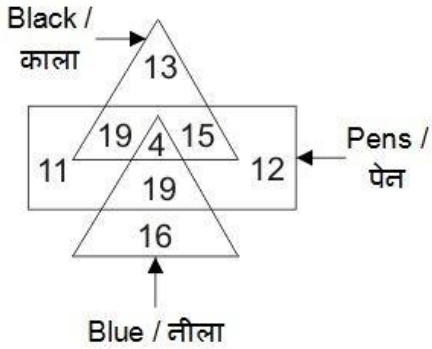
Correct Answer: VI

Candidate Answer: VI

QID : 20 -

In the given figure, how many pens are blue?

दी गई आकृति में, कितने पेन नीले हैं?



Options:

- 1) 23
- 2) 19
- 3) 12
- 4) 15


Correct Answer: 23

Candidate Answer: 23

QID: 21 -

Which answer figure will complete the pattern in the question figure?

कौन सी उत्तर आकृति प्रश्न आकृति के प्रतिरूप को पूरा करेगी?



Options:

1)



2)



3)



4)



Correct Answer:



Candidate Answer:




SPLessons

QID: 22 -

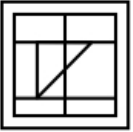
Which answer figure will complete the pattern in the question figure?

कौन सी उत्तर आकृति प्रश्न आकृति के प्रतिरूप को पूरा करेगी?

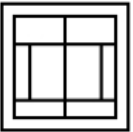


Options:

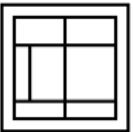
1)



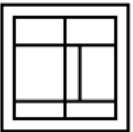
2)



3)



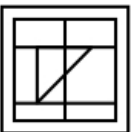
4)



Correct Answer:



Candidate Answer:

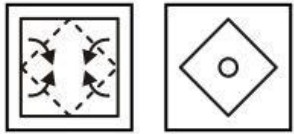


SPLessons

QID: 23 -

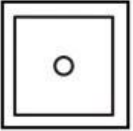
A piece of paper is folded and punched as shown below in the question figures. From the given answer figures, indicate how it will appear when opened?

नीचे के प्रश्न आकृतियों में दिखाए अनुसार कागज को मोड़कर छेदने तथा खोलने के बाद वह किस उत्तर आकृति जैसा दिखाई देगा?

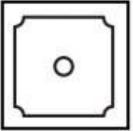


Options:


1)



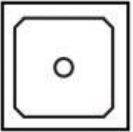
2)



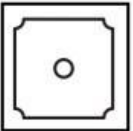
3)



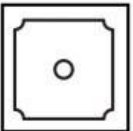
4)



Correct Answer:



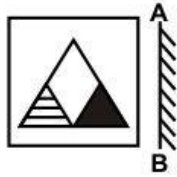
Candidate Answer:



QID: 24 -

If a mirror is placed on the line AB, then which of the answer figures is the right image of the given figure?

यदि एक दर्पण को AB रेखा पर रखा जाए, तो दी गई उत्तर आकृतियों में से कौन सी आकृति प्रश्न आकृति की सही प्रतिबिम्ब होगी?



Options:

1)



2)



3)



4)



Correct Answer:



Candidate Answer:



QID : 25 -

A word is represented by only one set of numbers as given in any one of the alternatives. The sets of numbers given in the alternatives are represented by two classes of alphabets as shown in the given two matrices. The columns and rows of **Matrix-I** are numbered from 0 to 4 and that of **Matrix-II** are numbered from 5 to 9. A letter from these matrices can be represented first by its row and next by its column, for example, 'K' can be represented by 01, 34, etc., and 'P' can be represented by 65, 99, etc. Similarly, you have to identify the set for the word "BLAND".

एक शब्द केवल एक संख्या-समूह द्वारा दर्शाया गया है, जैसा कि विकल्पों में से किसी एक में दिया गया है। विकल्पों में दिए गए संख्या-समूह अक्षरों के दो वर्गों द्वारा दर्शाए गए हैं, जैसा कि दिए गए दो आव्यूहों में है। **आव्यूह-I** के स्तम्भ और पंक्ति की संख्या 0 से 4 है और **आव्यूह-II** की 5 से 9। इन आव्यूहों से एक अक्षर को पहले उसकी पंक्ति और बाद में स्तम्भ संख्या द्वारा दर्शाया जा सकता है। उदाहरण के लिए 'K' को 01, 34, आदि द्वारा दर्शाया जा सकता है तथा 'P' को 65, 99, आदि द्वारा दर्शाया जा सकता है। इसी तरह से आपको प्रश्न में दिए शब्द "BLAND" के लिए समूह को पहचानना है।

Matrix-I आव्यूह-I						Matrix-II आव्यूह-II					
	0	1	2	3	4		5	6	7	8	9
0	A	K	B	L	C	5	N	O	P	S	D
1	B	A	C	K	L	6	P	D	S	N	O
2	L	C	K	B	A	7	O	P	N	D	S
3	C	B	L	A	K	8	D	S	O	P	N
4	K	L	A	C	B	9	S	N	D	O	P

Options:

- 1) 10, 14, 00, 68, 79
- 2) 31, 41, 33, 96, 86
- 3) 44, 20, 42, 88, 59
- 4) 23, 32, 24, 55, 66

Correct Answer: 23, 32, 24, 55, 66

Candidate Answer: 23, 32, 24, 55, 66

QID : 26 - At which rate, Reserve Bank of India borrows money from commercial banks?

8कस दर पर, भारतीय 8रजव' ब'क वा8णुय बैका से धन उधार लेता है?

Options:

- 1) Bank Rate
ब'क दर
- 2) Repo Rate
रेपो दर
- 3) Reverse Repo Rate
8रवस' रेपो दर
- 4) Statutory Liquidity Rate
सां8व8धक तरलता दर

Correct Answer: Reverse Repo Rate

8रवस' रेपो दर

Candidate Answer: Repo Rate

रेपो दर

QID : 27 - Movement along the supply curve is known as _____.

आपूतवW के साथ-साथ चलनेको _____ कहते है।

Options:

- 1) Contraction of supply
आपूत म" संकु चन
- 2) Expansion of supply
आपूत म" 8व5तार
- 3) Increase in supply
आपूत म" बढ़ीकरी
- 4) Expansion and contraction of supply
आपूत म" 8व5तार तथा संकु चन

Correct Answer: Expansion and contraction of supply
आपृदूत म" ढव5तार तथा संकु चन

Candidate Answer: Increase in supply
आपृदूत म" बढूकरी

QID : 28 - What is the minimum age required to become vice-president of India?

भारत का उप-राडपडत बनने के डलए =यूनतम आयु डकतनी होनी चाडहए?

Options:

- 1) 30 years
30 वष'
- 2) 35 years
35 वष'
- 3) 40 years
40 वष'
- 4) 37 years
37 वष'

Correct Answer: 35 years
35 वष'

Candidate Answer: 30 years
30 वष'

QID : 29 - Which of the following "writ" of the High Court or the Supreme Court is issued to restrain a person from holding a public office which he is not entitled to?

डननडलडखत म" से कून सा "=याडयक आदेश" उडच =यायालय या उडचतम =यायालय ढारा डकसी ँडन को डकसी साव'जडनक कायालय पर अडधकार करने से रूकने के डलए जारी डकया जाता है?

Options:

- 1) Certiorari
उडपेडण लेख
- 2) Mandamus
परमादेश
- 3) Prohibition
डनषेधाका
- 4) Quo Warranto
अडधकार पृडछा

Correct Answer: Quo Warranto
अडधकार पृडछा

Candidate Answer: Mandamus
परमादेश

QID : 30 - Who was the son of Chandragupta Maurya?

च=\गुत मूय' का पु7 कून था?

Options:

- 1) Bindusara
डब\सार
- 2) Chandragupta II
च=\गुत II
- 3) Ashoka
अशूक
- 4) Binbsara
डबबसार

Correct Answer: Bindusara
डब\सार

Candidate Answer: Bindusara
डब\सार

QID : 31 - Which dynasty came to power in India after the Tughlaq dynasty?

भारत म" तुगलक वंश के बाद कून सा वंश शासन म" आता है?

Options:

- 1) The Guptas
गुत वंश
- 2) The Khiljis
डखलजी वंश
- 3) The Mughals
मुगल वंश
- 4) The Sayyids
सयद वंश

Correct Answer: The Sayyids
सयद वंश

Candidate Answer: The Khiljis
डखलजी वंश

QID : 32 - Which planet is considered as the Dwarf planet?

ऒकस 5ह को बौना 5ह माना जाता है?

Options:

- 1) Earth
पृथ्वी
- 2) Jupiter
बृहस्पत
- 3) Pluto
प्लूटो
- 4) Saturn
शुक्र

Correct Answer: Pluto

प्लूटो

Candidate Answer: Pluto

प्लूटो

QID : 33 - Sandstone is which type of rock?

बलुआ पडथर ऒकस Pकार कह चान है?

Options:

- 1) Calcareous Rock
चूनेदार चान
- 2) Igneous Rock
आनेय चान
- 3) Metamorphic Rock
काया=तडरत चान
- 4) Sedimentary Rock
अवसादह चान

Correct Answer: Sedimentary Rock

अवसादह चान

Candidate Answer: Metamorphic Rock

काया=तडरत चान

QID : 34 - Wheat is a_____.

गेँ एक _____ है।

Options:

- 1) Creeper
बेल
- 2) Herb
औषडध
- 3) Shrub
झाडी
- 4) Tree
वृग

Correct Answer: Herb

औषडध

Candidate Answer: Shrub

झाडी

QID : 35 - Snakes, turtle, lizards and crocodiles falls under which category of animals?

साँप, कछु आ, ऒछपकली तथा मगरमडछ जंतुN कह ऒकस फिणी म आते है?

Options:

- 1) Pisces
मडय
- 2) Amphibian
जल-5थलचर
- 3) Reptilian
सरीसृप
- 4) Aves
पगी

Correct Answer: Reptilian

सरीसृप

Candidate Answer: Reptilian

सरीसृप

QID : 36 - Which of the following instrument is used to measure Soil Water Tension?

मृदा म जल तनाव मापने के ऒलए Pयोग ऒकये जाने वाले यंग को फ्या कहा जाता है?

Options:

- 1) Photometer
प्रकाशमापी
- 2) Pyrometer
उष्णमापी
- 3) Psychrometer
शुष्कतामापी
- 4) Tensiometer
तनावमापी

Correct Answer: Tensiometer
तनावमापी

Candidate Answer: Tensiometer
तनावमापी

QID : 37 - What is the SI unit of Force?

बल का एस आई मा7क Fया है?

Options:

- 1) Pascal
पा5कल
- 2) Boyle
बॉयल
- 3) Newton
=न्यूटन
- 4) Watt
वॉट

Correct Answer: Newton
=न्यूटन

Candidate Answer: Newton
=न्यूटन

QID : 38 - Which one of the following is a bad Thermal Conductor?

ठननठलठखत म" से कौन सा एक बुरा ऊRमा पठरचालक है?

Options:

- 1) Aluminium
एल्युमिनियम
- 2) Copper
तांबा
- 3) Glass
शीशा
- 4) Silver
चांदी

Correct Answer: Glass
शीशा

Candidate Answer: Glass
शीशा

QID : 39 - Which of the following stores data permanently in a computer?

ठननठलठखत म" से कौन क"यूटर म" 5थायी Vप से डाटा संठचत करता है?

Options:

- 1) ALU
ए.एल.यू.
- 2) Cache Memory
कैश मेमोरी
- 3) RAM
रैम
- 4) ROM
रोम

Correct Answer: ROM
रोम

Candidate Answer: ROM
रोम

QID : 40 - Rusting is _____.

जंग लगना _____ है।

Options:

1) Electrolysis

वैद्युत अपघटन

2) Oxidation

ऑक्सीकरण

3) Redox reaction (Oxidation and Reduction)

रेडॉक्स अभिक्रिया (ऑक्सीकरण और अपचयन)

4) Reduction

अपचयन

Correct Answer: Redox reaction (Oxidation and Reduction)

रेडॉक्स अभिक्रिया (ऑक्सीकरण और अपचयन)

Candidate Answer: Oxidation

ऑक्सीकरण

QID : 41 - Which amongst the following is not a Cation?

इनमें से कौन सा एक धनायन नहीं है?

Options:

1) Aluminium ion

एल्युमीनियम आयन

2) Copper ion

कॉपर आयन

3) Sulphate ion

सल्फेट आयन

4) Zinc ion

ज़िंक आयन

Correct Answer: Sulphate ion

सल्फेट आयन

Candidate Answer: [NOT ANSWERED]

QID : 42 - Which of the following is not a component of Smog?

इनमें से कौन सा एक धूम-कोहरे का घटक नहीं है?

Options:

1) Volatile organic compounds

पठरवत नशील जैविक यौगिक

2) Nitrogen Oxide

नाइट्रोजन ऑक्साइड

3) Sulphur dioxide

सल्फर डाइऑक्साइड

4) Chlorine oxide

क्लोरीन ऑक्साइड

Correct Answer: Chlorine oxide

क्लोरीन ऑक्साइड

Candidate Answer: Chlorine oxide

क्लोरीन ऑक्साइड

QID : 43 - NITI Aayog has been formed to replace which of the following institution?

नीति आयोग का गठन इनमें से किस संस्था के स्थान पर किया गया है?

Options:

1) Planning Commission

योजना आयोग

2) IRDA

आई. आर. डी. ए.

3) Department of Telecommunications (DoT)

दूरसंचार विभाग

4) Department of Information Technology

सूचना प्रौद्योगिकी विभाग

Correct Answer: Planning Commission

योजना आयोग

Candidate Answer: Planning Commission

योजना आयोग

QID : 44 - Who invented first working laser?

पहली काम करने वाली लेज़र का आविष्कार किसने किया था?

Options:

- 1) A. H. Taylor
ए. एच. टेलर
- 2) W. K. Roentgen
डॉ. के. रॉटजन
- 3) T. H. Maiman
टि. एच. मैमन
- 4) Fred Morricision
फ्रेड मॉरिसन

Correct Answer: T. H. Maiman
टि. एच. मैमन

Candidate Answer: T. H. Maiman
टि. एच. मैमन

QID : 45 - Which of the following venue hosted its first ever test match on 9th November, 2016 which was played between India and England?

किस स्थान ने 9 नवंबर, 2016 को भारत बनाम इंग्लैंड टेस्ट मैच का आयोजन किया था?

Options:

- 1) JSCA International Stadium Complex, Ranchi
जे.एस.सी.ए. अंतर्राष्ट्रीय स्टेडियम, राँची
- 2) Saurashtra Cricket Association Stadium, Rajkot
सौराष्ट्र क्रिकेट एसोसिएशन स्टेडियम, राजकोट
- 3) Himachal Pradesh Cricket Association Stadium, Dharamshala
हिमाचल प्रदेश क्रिकेट एसोसिएशन स्टेडियम, धर्मशाला
- 4) Holkar Cricket Stadium, Indore
होल्कर स्टेडियम, इंदौर

Correct Answer: Saurashtra Cricket Association Stadium, Rajkot
सौराष्ट्र क्रिकेट एसोसिएशन स्टेडियम, राजकोट

Candidate Answer: Holkar Cricket Stadium, Indore
होल्कर स्टेडियम, इंदौर

QID : 46 -

Match the following.

निम्नलिखित का मिलान कीजिए।

Artist / कलाकार	Art form / कला
1. Gauri Shankar Devilal गौरी शंकर देवीलाल	a. Flute बाँसुरी
2. Hari Prasad Chaurasia हरी प्रसाद चौरसिया	b. Painting चित्रकला
3. M. F. Hussain एम. एफ. हुसैन	c. Kathak कथक
4. Zakir Hussain ज़ाकिर हुसैन	d. Tabla तबला

Options:

- 1) 1-a, 2-d, 3-b, 4-c
- 2) 1-b, 2-c, 3-a, 4-d
- 3) 1-c, 2-a, 3-b, 4-d
- 4) 1-c, 2-b, 3-a, 4-d

Correct Answer: 1-c, 2-a, 3-b, 4-d

Candidate Answer: 1-c, 2-a, 3-b, 4-d

QID : 47 - Who is the only Indian cricketer to have received the Polly Umrigar award 3 times?

किस एकमात्र भारतीय क्रिकेटर को तीन बार पॉली उमरीगर पुरस्कार से सम्मानित किया गया है?

Options:

- 1) Sachin Tendulkar
सचिन तेंडुलकर
- 2) Virender Sehwag
वीरेंद्र सहवाग
- 3) Virat Kohli
विराट कोहली
- 4) Ravichandran Ashwin
रविचंद्रन अश्विन

Correct Answer: Virat Kohli
विराट कोहली

Candidate Answer: Virender Sehwaq
वीरें= सहवाग

QID : 48 - Who is the author of the book titled "The Sellout"?

"8द सेलआउट" नामक पुस्तक के लेखक कौन है?

Options:

- 1) Paul Beatty
पॉल बे\h
- 2) Arvind Adiga
अर\वद अडीगा
- 3) Elenor Catton
ए\लनोर के टन
- 4) Howard Jacobson
हॉवड\ जेकबसन

Correct Answer: Paul Beatty
पॉल बे\h

Candidate Answer: [NOT ANSWERED]

QID : 49 - Which country was designated as the major defence partner of USA in December, 2016?

8कस देश को 8दस\बर, 2016 म\ संयुN रा\य अमे8रका का सबसे Pमुख रा\ा सहयोगी घो8षत 8कया गया था?

Options:

- 1) Canada
कनाडा
- 2) Israel
इजराइल
- 3) India
भारत
- 4) United Kingdom
यूनाइटेड Yकगडम

Correct Answer: India
भारत

Candidate Answer: Canada
कनाडा

QID : 50 - With which country India did its seventh edition of bilateral EKUVERIN Exercise 2016 at Kadhdhoo?

भारत ने 8कस देश के साथ 2016 म\ अपना सातवाँ 8ददेशीय सं5करण एकू वे8रन अ?यास काधधु म\ 8कया था?

Options:

- 1) Nepal
नेपाल
- 2) Pakistan
पा8क5तान
- 3) Maldives
मालदहव
- 4) Bhutan
भूटान

Correct Answer: Maldives
मालदहव

Candidate Answer: [NOT ANSWERED]

QID : 51 - If X and Y are the two digits of the number 347XY such that the number is completely divisible by 80, then what is the value of X + Y?

य8द X तथा Y एक सं\या 347XY के दो अंक इस Pकार ह\ 8क सं\या 80 से पूणतः 8वभा8जत हो जाती है, तो X + Y का मान Fया है?

Options:

- 1) 2
- 2) 4
- 3) 6
- 4) 8

Correct Answer: 2

Candidate Answer: 2

QID : 52 - A, B and C can complete a work in 20, 24 and 30 days respectively. All three of them starts together but after 4 days A leaves the job and B left the job 6 days before the work was completed. C completed the remaining work alone. In how many days was the total work completed?

A, B तथा C 8कसीकाय\ को Wमशः 20, 24 तथा 30 8दना म\ पूरा कर सकते ह\। तीना ने 8मलकर काय\ को आरंभ 8कया पर=तु 4 8दन के पा\ात A ने काय\ को छोड़ 8दया तथा B ने काय\ पूरा होने के 6 8दन पहले काय\ छोड़ 8दया। C ने शेष काय\ अके ले ही पूण\ 8कया। कुल काय\ को पूरा करने म\ 8कतने 8दन लगे हागे?

Options:

- 1) 10
- 2) 12
- 3) 14
- 4) 16

Correct Answer: 14
Candidate Answer: 14

QID : 53 - A solid sphere of diameter 17.5 cm is cut into two equal halves. What will be the increase (in cm^2) in the total surface area?

17.5 से.मी. ँस वाले एक ठोस गोले को दो बराबर भाग म काटा जाता है। कु ल पृथीय िफल म ङकतनी वृष (से.मी.² म) होगी?

Options:

- 1) 289
- 2) 361.5
- 3) 481.25
- 4) 962.5

Correct Answer: 481.25

Candidate Answer: [NOT ANSWERED]

QID : 54 - After a discount of 34% an article is sold for Rs 3168. What is the marked price (in Rs) of the article?

34% क छूट के बाद एक वस्तु को 3168 व. म बेचा जाता है। वस्तु का अंकत मूय (व. म) फ्या है?

Options:

- 1) 4750
- 2) 4800
- 3) 4850
- 4) 5000

Correct Answer: 4800

Candidate Answer: 4800

QID : 55 -

If $\frac{3}{7}P = \frac{4}{11}Q$, then what is the ratio of P and Q respectively?

यदि $\frac{3}{7}P = \frac{4}{11}Q$ है, तो क्रमशः P तथा Q का अनुपात क्या है?

Options:

- 1) 12 : 77
- 2) 12 : 33
- 3) 28 : 33
- 4) 3 : 28

Correct Answer: 28 : 33

Candidate Answer: 28 : 33

QID : 56 - The average of 17 results is 60. If the average of first 9 results is 57 and that of the last 9 results is 65, then what will be the value of 9th result?

17 परणामा का औसत 60 है। यद पथम 9 परणामा का औसत 57 है तथा अंतम 9 परणामा का औसत 65 है, तो 9 व परणाम का मान फ्या होगा?

Options:

- 1) 39
- 2) 78
- 3) 117
- 4) 156

Correct Answer: 78

Candidate Answer: 78

QID : 57 - For an article the profit is 170% of the cost price. If the cost price increases by 20% but the selling price remains same, then what is the new profit percentage?

एक वस्तु के वय मूय का 170% लाभ होता है। यद वय मूय म 20% क वृष होती है लेकन ववय मूय समान रहता है, तो नया लाभ पतशत ङकतना है?

Options:

- 1) 41
- 2) 50
- 3) 75
- 4) 125

Correct Answer: 125

Candidate Answer: 125

QID : 58 - 32% of a number exceeds 17% of the same number by 120. What is the value of the number?

इकसी संख्या का 32% उसी संख्या के 17% से 120 अधिक है। संख्या का मान क्या है?

Options:

1) 900

2) 860

3) 940

4) 800

Correct Answer: 800

Candidate Answer: 800

QID : 59 -

A boat goes 15 km upstream and $10\frac{1}{2}$ km downstream in 3 hours 15 minutes. It goes 12 km upstream and 14 km downstream in 3 hours. What is the speed of the boat in still water?

एक नाव 3 घंटे 15 मिनट में 15 कि.मी. धारा के प्रतिकूल तथा $10\frac{1}{2}$ कि.मी. धारा के अनुकूल जाती है। यह 3 घंटे में 12 कि.मी. धारा के प्रतिकूल तथा 14 कि.मी. धारा के अनुकूल जाती है। स्थिर जल में नाव की गति क्या है?

Options:

1) 4

2) 6

3) 10

4) 14

Correct Answer: 10

Candidate Answer: [NOT ANSWERED]

QID : 60 - A person lent certain sum of money at 5% per annum simple interest and in 15 years the interest amounted to Rs 250 less than the sum lent. What was the sum lent (in Rs)?

एक व्यक्ति किसी धनराशि को 5% वार्षिक दर से साधारण ब्याज पर उधार देता है तथा 15 वर्षों में संयोजित ब्याज की राशि उधार दान गई राशि से 250 रु. कम है। उधार दान गई राशि (रु. में) कितनी थी?

Options:

1) 1000

2) 1500

3) 2400

4) 3000

Correct Answer: 1000

Candidate Answer: 3000

QID : 61 -

If $x = \frac{2 + \sqrt{3}}{2 - \sqrt{3}}$, then what is the value of $x + \frac{1}{x}$?

यदि $x = \frac{2 + \sqrt{3}}{2 - \sqrt{3}}$, तो $x + \frac{1}{x}$ का मान क्या है?

Options:

- 1) 14
- 2) $8/3$
- 3) 0
- 4) 18

Correct Answer: 14

Candidate Answer: 14

QID : 62 -

If $x = 2 + \sqrt{3}$, then what is the value of $\sqrt{2x} + \frac{1}{\sqrt{2x}}$?

यदि $x = 2 + \sqrt{3}$, तो $\sqrt{2x} + \frac{1}{\sqrt{2x}}$ का मान क्या है?

Options:

- 1) $2/3$
- 2) $3/3$
- 3) $(3/3 + 1)/2$
- 4) $2/3 + 1$

Correct Answer: $(3/3 + 1)/2$

Candidate Answer: $(3/3 + 1)/2$

QID : 63 -

If $x + \frac{1}{x} = 4$, then what is the value of $x^6 + \frac{1}{x^6}$?

यदि $x + \frac{1}{x} = 4$, तो $x^6 + \frac{1}{x^6}$ का मान क्या है?

Options:

- 1) 52
- 2) 256
- 3) 1026
- 4) 2702

Correct Answer: 2702

Candidate Answer: 2702

QID : 64 -

If $y = \frac{2-x}{1+x}$, then what is the value of $\frac{1}{y+1} + \frac{2y+1}{y^2-1}$?

यदि $y = \frac{2-x}{1+x}$, तो $\frac{1}{y+1} + \frac{2y+1}{y^2-1}$ का मान क्या है?

Options:

1)

$$\frac{(1+x)(2-x)}{2x-1}$$

2)

$$\frac{(1-x)(2+x)}{x-1}$$

3)

$$\frac{(1+x)(2-x)}{1-2x}$$

4)

$$\frac{(1+x)(1-2x)}{2-x}$$

Correct Answer:

$$\frac{(1+x)(2-x)}{1-2x}$$

Candidate Answer: [NOT ANSWERED]

QID : 65 - In the triangle ABC, $\angle BAC = 50^\circ$ and the bisectors of $\angle ABC$ and $\angle ACB$ meet at P. What is the value (in degrees) of $\angle BPC$?

त्रिभुज ABC में, $\angle BAC = 50^\circ$ तथा $\angle ABC$ तथा $\angle ACB$ के अंशों के बराबर $\angle BPC$ पर मिलते हैं। $\angle BPC$ का मान (अंशों में) कितना होगा?

Options:

- 1) 100
- 2) 105
- 3) 115
- 4) 125

Correct Answer: 115

Candidate Answer: 115

QID : 66 - Two circles of same radius intersect each other at P and Q. If the length of the common chord is 30 cm and distance between the centres of the two circles is 40 cm, then what is the radius (in cm) of the circles?

समान अर्धवृत्त वाले दो वृत्त एक-दूसरे को P तथा Q पर प्रतिच्छेदित करते हैं। यदि उभयवर्तुओं के बीच की लंबाई 30 से.मी. है तथा दोनों वृत्तों के केंद्रों के बीच की दूरी 40 से.मी. है, तो वृत्तों के अर्धवृत्त (से.मी. में) कितनी है?

Options:

- 1) 25
- 2) $25/\sqrt{2}$
- 3) 50
- 4) $50/\sqrt{2}$

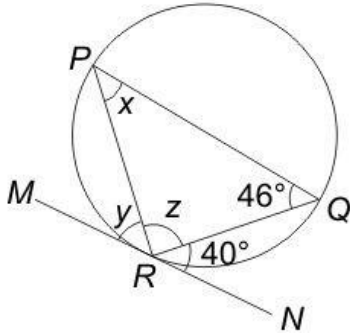
Correct Answer: 25

Candidate Answer: 25

QID : 67 -

In the given figure, $\angle QRN = 40^\circ$, $\angle PQR = 46^\circ$ and MN is a tangent at R . What is the value (in degrees) of x , y and z respectively?

दी गई आकृति में, $\angle QRN = 40^\circ$, $\angle PQR = 46^\circ$ तथा MN बिंदु R पर एक स्पर्श रेखा है। क्रमशः x , y तथा z का मान (डिग्री में) क्या है?



Options:

- 1) 40, 46, 94
- 2) 40, 50, 90
- 3) 46, 54, 80
- 4) 50, 40, 90

Correct Answer: 40, 46, 94

Candidate Answer: 40, 46, 94

QID : 68 - In ΔPQR , $\angle R = 54^\circ$, the perpendicular bisector of PQ at S meets QR at T . If $\angle TPR = 46^\circ$, then what is the value (in degrees) of $\angle PQR$?

ΔPQR में, $\angle R = 54^\circ$, Y बिंदु S से PQ का समदूरी भाजक लंब QR से Y बिंदु T पर मिलता है। यदि $\angle TPR = 46^\circ$ है, तो $\angle PQR$ का मान (डिग्री में) क्या होगा?

Options:

- 1) 25
- 2) 40
- 3) 50
- 4) 60

Correct Answer: 40

Candidate Answer: 50

QID : 69 -

What is the simplified value of $\frac{\cot A + \tan B}{\cot B + \tan A}$?

$\frac{\cot A + \tan B}{\cot B + \tan A}$ का सरलीकृत मान क्या है?

Options:

- 1) $\tan B \cot A$
- 2) $\tan A \cot B$
- 3) $\tan A \tan B$
- 4) $\cot A \cot B$

Correct Answer: $\tan B \cot A$

Candidate Answer: $\cot A \cot B$

QID : 70 -

What is the simplified value of $\left(\frac{1}{\operatorname{cosec} A + \cot A}\right)^2$?

$\left(\frac{1}{\operatorname{cosec} A + \cot A}\right)^2$ का सरलीकृत मान क्या है?

Options:

- 1) $\sec A + \tan A$
- 2) $(1 - \cos A)/(1 + \cos A)$
- 3) $(1 - \operatorname{cosec} A)/(1 + \operatorname{cosec} A)$
- 4) $\sin A$

Correct Answer: $(1 - \cos A)/(1 + \cos A)$

Candidate Answer: $(1 - \cos A)/(1 + \cos A)$

QID : 71 - If $\cos^2 \theta - \sin \theta = \frac{1}{4}$, then what is the value of $\sin \theta$?

यदि $\cos^2 \theta - \sin \theta = \frac{1}{4}$, तो $\sin \theta$ का मान क्या होगा?

Options:

- 1) -1
- 2) $\frac{1}{2}$
- 3) 1
- 4) $\frac{3}{2}$

Correct Answer: $\frac{1}{2}$

Candidate Answer: 1

QID : 72 -

The table below shows the number of students of a college studying Arts, Science, Commerce and Business for given 5 years.

नीचे दी गई तालिका में एक महाविद्यालय में दिए गए 5 वर्षों में कला, विज्ञान, वाणिज्य तथा व्यवसाय पढ़ने वाले छात्रों की संख्या को दर्शाया गया है।

Year वर्ष	Arts कला	Science विज्ञान	Commerce वाणिज्य	Business व्यवसाय
2012	48	105	148	32
2013	56	123	136	30
2014	64	125	144	36
2015	78	148	156	36
2016	92	161	168	48

What is the percentage increase in number of students of Commerce from 2012 to 2016?

2012 से 2016 तक वाणिज्य के छात्रों की संख्या में प्रतिशत वृद्धि क्या है?

Options:

- 1) 11.16
- 2) 17.28
- 3) 13.51
- 4) 15.67

Correct Answer: 13.51

Candidate Answer: 13.51

QID : 73 -

The table below shows the number of students of a college studying Arts, Science, Commerce and Business for given 5 years.

नीचे दी गई तालिका में एक महाविद्यालय में दिए गए 5 वर्षों में कला, विज्ञान, वाणिज्य तथा व्यवसाय पढ़ने वाले छात्रों की संख्या को दर्शाया गया है।

Year वर्ष	Arts कला	Science विज्ञान	Commerce वाणिज्य	Business व्यवसाय
2012	48	105	148	32
2013	56	123	136	30
2014	64	125	144	36
2015	78	148	156	36
2016	92	161	168	48

What is the simple annual growth rate (in %) of the number of students of Business from 2012 to 2016?

2012 से 2016 तक व्यवसाय के छात्रों की संख्या का वार्षिक सामान्य वृद्धि दर (% म) कितनी है?

Options:

- 1) 10
- 2) 12.5
- 3) 15
- 4) 17.5

Correct Answer: 12.5

Candidate Answer: [NOT ANSWERED]

QID : 74 -

The table below shows the number of students of a college studying Arts, Science, Commerce and Business for given 5 years.

नीचे दी गई तालिका में एक महाविद्यालय में दिए गए 5 वर्षों में कला, विज्ञान, वाणिज्य तथा व्यवसाय पढ़ने वाले छात्रों की संख्या को दर्शाया गया है।

Year वर्ष	Arts कला	Science विज्ञान	Commerce वाणिज्य	Business व्यवसाय
2012	48	105	148	32
2013	56	123	136	30
2014	64	125	144	36
2015	78	148	156	36
2016	92	161	168	48

What is the ratio of average number of students studying Arts per year and average number of students studying Science per year?

कला पढ़ने वाले छात्रों की संख्या का वार्षिक औसत तथा विज्ञान पढ़ने वाले छात्रों की संख्या का वार्षिक औसत का अनुपात क्या है?

Options:

- 1) 169 : 331
- 2) 66 : 169
- 3) 127 : 261
- 4) 32 : 75

Correct Answer: 169 : 331
Candidate Answer: 169 : 331

QID : 75 -

The table below shows the number of students of a college studying Arts, Science, Commerce and Business for given 5 years.

नीचे दी गई तालिका में एक महाविद्यालय में दिए गए 5 वर्षों में कला, विज्ञान, वाणिज्य तथा व्यवसाय पढ़ने वाले छात्रों की संख्या को दर्शाया गया है।

Year वर्ष	Arts कला	Science विज्ञान	Commerce वाणिज्य	Business व्यवसाय
2012	48	105	148	32
2013	56	123	136	30
2014	64	125	144	36
2015	78	148	156	36
2016	92	161	168	48

Which year shows the maximum percentage increase in the total number of students in these 4 subjects over the previous year?

इन 4 अवषया के कु ल छा7T कh सं"या म" 8कस वष" म" गत वष" से सबसे अ8धक P8तशत वृ8\ \ई है?

Options:

- 1) 2013
- 2) 2014
- 3) 2015
- 4) 2016

Correct Answer: 2015

Candidate Answer: [NOT ANSWERED]

QID : 76 - In the following question, some part of the sentence may have errors. Find out which part of the sentence has an error and select the appropriate option. If a sentence is free from error, select 'No Error'.

The two men were (1)/ quarrelling with one another (2)/ claiming the same watch as their own. (3)/ No Error (4)

Options:

- 1) 1
- 2) 2
- 3) 3
- 4) 4

Correct Answer: 2

Candidate Answer: 2

QID : 77 - In the following question, some part of the sentence may have errors. Find out which part of the sentence has an error and select the appropriate option. If a sentence is free from error, select 'No Error'.

Everybody knows (1)/ that Bhutan is the most peaceful (2)/ of all other countries of the world. (3)/ No Error (4)

Options:

- 1) 1
- 2) 2
- 3) 3
- 4) 4

Correct Answer: 3

Candidate Answer: 3

QID : 78 - In the following question, the sentence given with blank to be filled in with an appropriate word. Select the correct alternative out of the four and indicate it by selecting the appropriate option.

The higher you climb, the more difficult it ____ to breathe.

Options:

- 1) became
- 2) becomes
- 3) has become
- 4) is becoming

Correct Answer: becomes

Candidate Answer: becomes

QID : 79 - In the following question, the sentence given with blank to be filled in with an appropriate word. Select the correct alternative out of the four and indicate it by selecting the appropriate option.

Neha has been crying _____ morning.

Options:

- 1) from
- 2) of
- 3) since
- 4) till

Correct Answer: since

Candidate Answer: since

QID : 80 - In the following question, out of the four alternatives, select the word similar in meaning to the word given.

Opulent

Options:

- 1) Fake
- 2) Gloomy
- 3) Rich
- 4) Selfish

Correct Answer: Rich

Candidate Answer: Rich

QID : 81 - In the following question, out of the four alternatives, select the word similar in meaning to the word given.

Morose

Options:

- 1) Flatter
- 2) Gloomy
- 3) friendly
- 4) Savvy

Correct Answer: Gloomy

Candidate Answer: Gloomy

QID : 82 - In the following question, out of the four alternatives, select the word opposite in meaning to the word given.

Irk

Options:

- 1) Attract
- 2) Discourage
- 3) Irritate
- 4) Please

Correct Answer: Please

Candidate Answer: Please

QID : 83 - In the following question, out of the four alternatives, select the word opposite in meaning to the word given.

Grotesque

Options:

- 1) Free
- 2) Odd
- 3) Plain
- 4) Queer

Correct Answer: Plain

Candidate Answer: Plain

QID : 84 - In the following question, out of the four alternatives, select the alternative which best expresses the meaning of the idiom/phrase.

To keep the wolf from the door

Options:

- 1) Avoid starvation
- 2) Crack the deal
- 3) Entry prohibited
- 4) Have a pleasant tour

Correct Answer: Avoid starvation

Candidate Answer: Avoid starvation

QID : 85 - In the following question, out of the four alternatives, select the alternative which best expresses the meaning of the idiom/phrase.

Teething problems

Options:

- 1) Oral problems
- 2) Problems at the start of a new project
- 3) Problems for quite a long time in adjusting in the new place
- 4) Problem of having good dentist

Correct Answer: Problems at the start of a new project

Candidate Answer: Problems for quite a long time in adjusting in the new place

QID : 86 - Improve the bracketed part of the sentence.

She did not like to have coffee (**nor I did**).

Options:

- 1) neither I liked it
- 2) nor did I
- 3) nor I like it
- 4) No improvement

Correct Answer: nor did I

Candidate Answer: nor did I

QID : 87 - Improve the bracketed part of the sentence.

Taj Mahal is (**a worth seeing monument**) in Agra.

Options:

- 1) a monument to see its worth
- 2) a monument worth seeing
- 3) one of worth seeing monuments
- 4) No improvement

Correct Answer: a monument worth seeing

Candidate Answer: No improvement

QID : 88 - In the following question, out of the four alternatives, select the alternative which is the best substitute of the phrase.

That which cannot be corrected

Options:

- 1) Impregnable
- 2) Immolation
- 3) Incurable
- 4) Ineligible

Correct Answer: Incurable

Candidate Answer: Incurable

QID : 89 - In the following question, out of the four alternatives, select the alternative which is the best substitute of the phrase.

A person who is blamed for the wrong doings of others

Options:

- 1) Bursar
- 2) Captor
- 3) Phlegmatic
- 4) Scapegoat

Correct Answer: Scapegoat

Candidate Answer: Scapegoat

QID : 90 - In the following question, four words are given out of which one word is incorrectly spelt. Select the incorrectly spelt word.

Options:

- 1) Conceive
- 2) Leisure
- 3) Neice
- 4) Reign

Correct Answer: Neice

Candidate Answer: Neice

QID : 91 - In the following question, four words are given out of which one word is incorrectly spelt. Select the incorrectly spelt word.

Options:

- 1) Dictionary
- 2) Irrelevant
- 3) Perishable
- 4) Tangible

Correct Answer: Dictionary

Candidate Answer: Dictionary

QID : 92 - The question below consists of a set of labelled sentences. Out of the four options given, select the most logical order of the sentences to form a coherent paragraph.

P- It had been umpteen years since we had seen each other.

Q- One dull dark day in autumn, I was travelling on horseback through a dreary stretch of countryside.

R- This was the house of Roderick Usher, who had been my childhood pal.

S- At night fall, I came in sight of the house of Usher.

Options:

1) PQSR

2) PSQR

3) QSRP

4) QRSP

Correct Answer: QSRP

Candidate Answer: QRSP

QID : 93 - The question below consists of a set of labelled sentences. Out of the four options given, select the most logical order of the sentences to form a coherent paragraph.

P- According to various estimates, between 1942 and 1944 there were approximately 400 victims of this practice daily in Warsaw alone, with numbers on some days reaching several thousands.

Q- A common German practice in occupied Poland was to round up random civilians on the streets of Polish cities.

R- For example, on 19th September 1942 close to 3000 men and women were transported by train to Germany – they had been caught in the massive round-ups all over Warsaw the previous two days.

S- The term, "lapanka" carried a sardonic connotation from the word's earlier use for the children's game known in English as "tag".

Options:

1) SQRP

2) SRPQ

3) QSPR

4) QPRS

Correct Answer: QSPR

Candidate Answer: [NOT ANSWERED]

QID : 94 - In the following question, a sentence has been given in Active/Passive voice. Out of the four alternatives suggested, select the one which best expresses the same sentence in Passive/Active voice.

An elephant may be helped even by an ant.

Options:

1) An ant can even help a elephant.

2) An ant may even help a elephant.

3) Even an ant may help an elephant.

4) Even an ant ought to help an elephant.

Correct Answer: Even an ant may help an elephant.

Candidate Answer: Even an ant may help an elephant.

QID : 95 - In the following question, a sentence has been given in Direct/Indirect speech. Out of the four alternatives suggested, select the one which best expresses the same sentence in Direct/Indirect speech.

"Please don't cry" he said.

Options:

1) He begged that I should not cry.

2) He begged me not to cry.

3) He said to please him and not cry.

4) He told me to not to cry.

Correct Answer: He begged me not to cry.

Candidate Answer: He begged me not to cry.

QID : 96 - In the following questions, the sentence given with blank to be filled in with an appropriate word. Select the correct alternative out of the four and indicate it by selecting the appropriate option.

The ____ of lectures could be enhanced by introducing the lecture with a brief review of the work ____, it should also be indicated how the day's lecture ____ into the course pattern. A lecture should ____ be presented in one unbroken discourse. Unless exceptionally interesting, a long lecture strains the ____ of a concentrated listening, causing intermittent wandering of attention and loss of continuity in thought.

The ____ of lectures could be enhanced by introducing the lecture

Options:

1) condition

2) effectiveness

3) efficiency

4) interest

Correct Answer: effectiveness

Candidate Answer: effectiveness

QID : 97 - In the following questions, the sentence given with blank to be filled in with an appropriate word.

Select the correct alternative out of the four and indicate it by selecting the appropriate option.

The _____ of lectures could be enhanced by introducing the lecture with a brief review of the work _____, it should also be indicated how the day's lecture _____ into the course pattern. A lecture should _____ be presented in one unbroken discourse. Unless exceptionally interesting, a long lecture strains the _____ of a concentrated listening, causing intermittent wandering of attention and loss of continuity in thought.

with a brief review of the work _____, it should also be indicated

- ~~0) preceding~~
2) preceding
3) reciting
4) succeeding

Correct Answer: preceding

Candidate Answer: succeeding

QID : 98 - In the following questions, the sentence given with blank to be filled in with an appropriate word. Select the correct alternative out of the four and indicate it by selecting the appropriate option.

The _____ of lectures could be enhanced by introducing the lecture with a brief review of the work _____, it should also be indicated how the day's lecture _____ into the course pattern. A lecture should _____ be presented in one unbroken discourse. Unless exceptionally interesting, a long lecture strains the _____ of a concentrated listening, causing intermittent wandering of attention and loss of continuity in thought.

how the day's lecture _____ into the course pattern.

Options:

- 1) adds
- 2) fits
- 3) gets
- 4) lets

Correct Answer: fits

Candidate Answer: fits

QID : 99 - In the following questions, the sentence given with blank to be filled in with an appropriate word. Select the correct alternative out of the four and indicate it by selecting the appropriate option.

The _____ of lectures could be enhanced by introducing the lecture with a brief review of the work _____, it should also be indicated how the day's lecture _____ into the course pattern. A lecture should _____ be presented in one unbroken discourse. Unless exceptionally interesting, a long lecture strains the _____ of a concentrated listening, causing intermittent wandering of attention and loss of continuity in thought.

A lecture should _____ be presented in one unbroken discourse.

Options:

- 1) continuously
- 2) often
- 3) randomly
- 4) seldom

Correct Answer: seldom

Candidate Answer: continuously

QID : 100 - In the following questions, the sentence given with blank to be filled in with an appropriate word. Select the correct alternative out of the four and indicate it by selecting the appropriate option.

The _____ of lectures could be enhanced by introducing the lecture with a brief review of the work _____, it should also be indicated how the day's lecture _____ into the course pattern. A lecture should _____ be presented in one unbroken discourse. Unless exceptionally interesting, a long lecture strains the _____ of a concentrated listening, causing intermittent wandering of attention and loss of continuity in thought.

a long lecture strains the _____ of a concentrated listening, causing intermittent wandering of attention and loss of continuity in thought.

Options:

- 1) authority
- 2) capacity
- 3) comfortability
- 4) reasonability

Correct Answer: capacity

Candidate Answer: capacity